

Natural Sciences

Grade 8-A (CAPS)

sasol
reaching new frontiers



EXPLORE

A World Without Boundaries



basic education

Department:
Basic Education
REPUBLIC OF SOUTH AFRICA


Periodic Table of the Elements																																																							
1		2		No Element														3		4		5		6		7		8		9		10		11		12		13		14		15		16		17		18		2					
3	Li	4	Be	19	K	20	Ca	21	Sc	22	Ti	23	V	24	Cr	25	Mn	26	Fe	27	Co	28	Ni	29	Cu	30	Zn	31	Ga	32	Ge	33	As	34	Se	35	Br	36	Kr	53	I	54	Xe	85	At	86	Rn	117	Uus	118	Uuo	10	Ne	17	He
11	Na	12	Mg	37	Rb	38	Sr	39	Y	40	Zr	41	Nb	42	Mo	43	Tc	44	Ru	45	Rh	46	Pd	47	Ag	48	Cd	49	In	50	Sn	51	Sb	52	Te	53	I	54	Xe	85	At	86	Rn	117	Uus	118	Uuo	10	Ne	17	He				
55	Cs	56	Ba	57-71	La-Lu	72	Hf	73	Ta	74	W	75	Re	76	Os	77	Ir	78	Pt	79	Au	80	Hg	81	Tl	82	Pb	83	Bi	84	Po	85	At	86	Rn	117	Uus	118	Uuo	10	Ne	17	He												
87	Fr	88	Ra	89-103	Ac-Lr	104	Rf	105	Db	106	Sg	107	Bh	108	Hs	109	Mt	110	Ds	111	Rg	112	Cn	113	Uut	114	Uuq	115	Uup	116	Uuh	117	Uus	118	Uuo	10	Ne	17	He																

Natural Sciences

Grade 8-A

CAPS

developed by



funded by



Developed and funded as an ongoing project by the Sasol Inzalo Foundation in partnership with Siyavula and volunteers.

Distributed by the Department of Basic Education

COPYRIGHT NOTICE

Your freedom to legally copy this book

You are allowed and encouraged to freely copy this book. You can photocopy, print and distribute it as often as you like. You can download it onto your mobile phone, iPad, PC or flashdrive. You can burn it to CD, email it around or upload it to your website.

The only restriction is that you cannot change *this version* of this book, its cover or content in any way.

For more information about the *Creative Commons Attribution-NoDerivs 3.0 Unported (CC-BY-ND 3.0) license*, visit:

<http://creativecommons.org/licenses/by-nd/3.0/>



This book is an **open educational resource** and you are encouraged to take full advantage of this.



Therefore, if you would like a version of this book that you can **reuse, revise, remix** and **redistribute**, under the *Creative Commons Attribution 3.0 Unported (CC-BY) license*, visit our website, www.curious.org.za

AUTHORS' LIST

This book was written by Siyavula with the help, insight and collaboration of volunteer educators, academics, students and a diverse group of contributors. Siyavula believes in the power of community and collaboration by working with volunteers and networking across the country, enabled through our use of technology and online tools. The vision is to create and use open educational resources to transform the way we teach and learn, especially in South Africa.

Siyavula Coordinator and Editor

Megan Beckett

Siyavula Team

Ewald Zietsman, Bridget Nash, Melanie Hay, Delita Otto, Marthélize Tredoux, Luke Kannemeyer, Dr Mark Horner, Neels van der Westhuizen

Contributors

Dr Karen Wallace, Dr Nicola Loaring, Isabel Tarling, Sarah Niss, René Toerien, Rose Thomas, Novosti Buta, Dr Bernard Heyns, Dr Colleen Henning, Dr Sarah Blyth, Dr Thalassa Matthews, Brandt Botes, Daniël du Plessis, Johann Myburgh, Brice Reignier, Marvin Reimer, Corene Myburgh, Dr Maritha le Roux, Dr Francois Toerien, Martli Greyvenstein, Elsabe Kruger, Elizabeth Barnard, Irma van der Vyver, Nonna Weideman, Annatjie Linnenkamp, Hendrine Krieg, Liz Smit, Evelyn Visage, Laetitia Bedeker, Wetsie Visser, Rhoda van Schalkwyk, Suzanne Grové, Peter Moodie, Dr Sahal Yacoob, Siyalo Qanya, Sam Faso, Miriam Makhene, Kabelo Maletsoa, Lesego Matshane, Nokuthula Mpanza, Brenda Samuel, MTV Selogiloe, Boitumelo Sihlangu, Mbuzeli Tyawana, Dr Sello Rapule, Andrea Motto, Dr Rufus Wesi

Volunteers

Iesrafeel Abbas, Shireen Amien, Bianca Amos Brown, Dr Eric Banda, Dr Christopher Barnett, Prof Ilsa Basson, Mariaan Bester, Jennifer de Beyer, Mark Carolissen, Tarisai Chanetsa, Ashley Chetty, Lizzy Chivaka, Mari Clark, Dr Marna S Costanzo, Dr Andrew Craig, Dawn Crawford, Rosemary Dally, Ann Donald, Dr Philip Fourie, Shamin Garib, Sanette Gildenhuys, Natelie Gower-Winter, Isabel Grinwis, Kirsten Hay, Pierre van Heerden, Dr Fritha Hennessy, Dr Colleen Henning, Grant Hillebrand, Beryl Hook, Cameron Hutchison, Mike Kendrick, Paul Kennedy, Dr Setshaba David Khanye, Melissa Kistner, James Klatzow, Andrea Koch, Grove Koch, Paul van Koersveld, Dr Kevin Lobb, Dr Erica Makings, Adriana Marais, Dowelani Mashuvhamele, Modisaemang Molusi, Glen Morris, Talitha Mostert, Christopher Muller, Norman Muvoti, Vernusha Naidoo, Dr Hlumanani Ndlovu, Godwell Nhema, Edison Nyamayaro, Nkululeko Nyangiwe, Tony Nzundu, Alison Page, Firoza Patel, Koebraa Peters, Seth Phatoli, Swasthi Pillay, Siyalo Qanya, Tshimangadzo Rakhuhu, Bharati Ratanjee, Robert Reddick, Adam Reynolds, Matthew Ridgway, William Robinson, Dr Marian Ross, Lelani Roux, Nicola Scriven, Dr Ryman Shoko, Natalie Smith, Antonette Tonkie, Alida Venter, Christie Viljoen, Daan Visage, Evelyn Visage, Dr Sahal Yacoob

A special thanks goes to St John's College in Johannesburg for hosting the first planning workshop for these workbooks and to Pinelands High School in Cape Town for the use of their school grounds for photography.

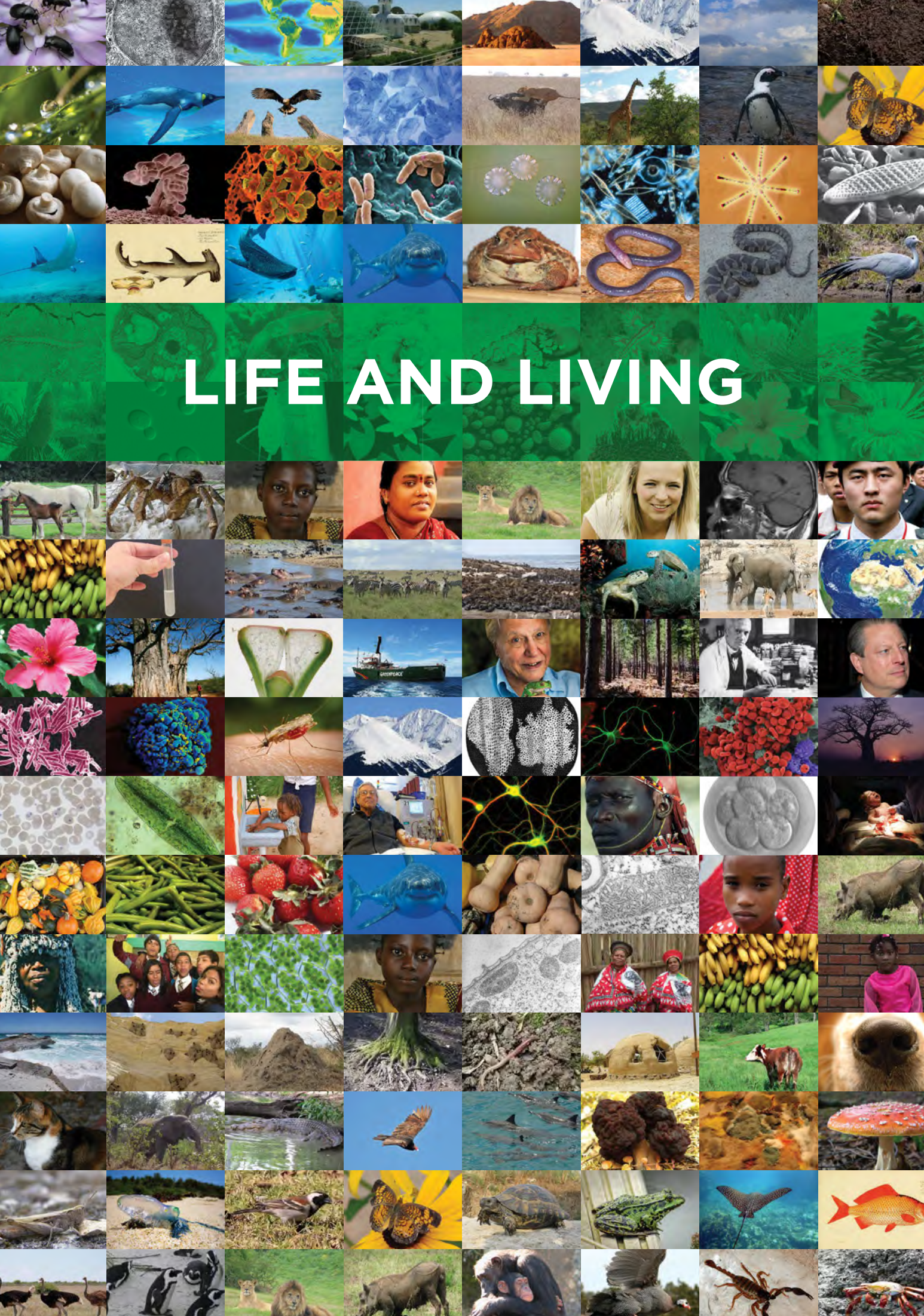
To learn more about the project and the Sasol Inzalo Foundation, visit the website at:

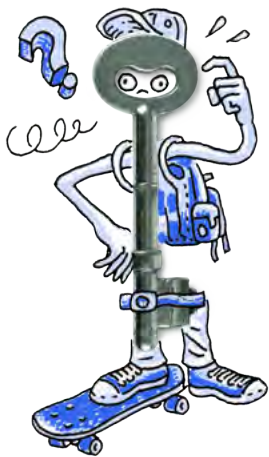
www.sasolinzalofoundation.org.za

Table of Contents

Life and living	2
1 Photosynthesis and respiration	4
1.1 Photosynthesis	4
1.2 Respiration	15
2 Interactions and interdependence within the environment	26
2.1 What is ecology?	26
2.2 Ecosystems	31
2.3 Feeding relationships	41
2.4 Energy flow: Food chains and food webs	47
2.5 Balance in an ecosystem	55
2.6 Adaptations	63
2.7 Conservation of the ecosystem	71
3 Microorganisms	86
3.1 Types of microorganisms	86
3.2 Harmful microorganisms	93
3.3 Useful microorganisms	102
Matter and Materials	118
1 Atoms	120
1.1 The building blocks of matter	120
1.2 Sub-atomic particles	125
1.3 Pure substances	127
1.4 Mixtures of elements and compounds	142
2 Particle model of matter	152
2.1 What is the particle model of matter?	153
2.2 Solids, liquids and gases	156
2.3 Changes of state	167
2.4 Density, mass and volume	175
2.5 Density and states of matter	178
2.6 Density of different materials	180
2.7 Expansion and contraction of materials	189
2.8 Pressure	196
3 Chemical reactions	208
3.1 How do we know a chemical reaction has taken place?	208
3.2 Reactants and products	211
Image Attribution	228







KEY QUESTIONS:

- What drives life on Earth and in ecosystems?
- How do green plants photosynthesise when no other organism can make its own food?
- What do plants do with the food that they produce?
- Why do we need to eat food? What does it provide us with?
- We know respiration is one of the seven life processes, but what happens during respiration in organisms?

Energy is needed to sustain life and without it nothing would be able to live on Earth. Our most important source of energy is the Sun. In this chapter we are going to investigate the processes involved in transferring the Sun's energy to our bodies to allow us to read this text! These two important processes are **photosynthesis** and **respiration**.

1.1 Photosynthesis

Energy sustains life

All life on Earth depends on energy to sustain the seven life processes.



ACTIVITY: The seven life processes

INSTRUCTIONS:

1. Do you remember what the seven life processes are? Do you remember using the letters from MRS GREN to help you remember these?
2. Write down the seven life processes below.

M _____

R _____

S _____

G _____


R _____

E _____

N _____



The form of energy that the Sun produces is called **radiant energy**. Although the Sun provides us with both light and warmth, plants only use the light energy from the Sun to photosynthesise.



The Sun provides us with energy in the form of light and heat.

Most organisms cannot directly use the energy from the sun to perform the seven life processes. For example, a reptile can lie in the Sun to warm up from the heat energy, but this does not provide the necessary energy for that animal to move, reproduce or excrete waste.

Except for a few sea slugs, plants are the only organisms on Earth that can absorb the Sun's radiant energy and convert it into food for themselves and for other living organisms.

Radiant energy to chemical potential energy

What is potential energy? Do you remember that we spoke about energy for movement (kinetic energy) and energy that is stored (potential energy) in Energy and Change in Gr. 6 and 7? What are some things that have kinetic energy and some that have potential energy? Remember to take down some notes in the margins of your workbook as you discuss things in class.

All living organisms can use energy in the form of **chemical potential energy** for the life processes. This is the energy that is stored in the food that organisms eat. Plants are able to capture the radiant energy from the Sun and transfer it to chemical potential (stored) energy for other organisms to use. They do this through the process of photosynthesis. All organisms release the stored potential energy from the food that they eat to support their life processes. This process is called **respiration**.

Photosynthesis takes place in small structures called **chloroplasts**, which are inside the cells of the leaves and stems of green plants. Inside the chloroplasts are green **pigments** called **chlorophyll**. This is what gives plants their green colour. Photosynthesis is the process in which chlorophyll molecules absorb the radiant energy from the sun and transfers it into chemical potential energy. The only function of chlorophyll is to trap the sunlight energy; chlorophyll is not produced or used up during photosynthesis.


NEW WORDS

- chemical potential energy
- chlorophyll
- chloroplast
- glucose
- photosynthesis
- radiant energy
- respiration
- starch
- soluble
- insoluble
- pigment



DID YOU KNOW?

All the **New words** listed in the boxes in the margin are defined in the glossary at the end of this strand.



VISIT

Find out why plants that photosynthesise are green.

bit.ly/18cAb2v



TAKE NOTE

Chloroplasts are a type of organelle found only in plant cells. A cell is the basic unit of all living things. We will learn more about the structure and functioning of cells next year in Gr. 9.

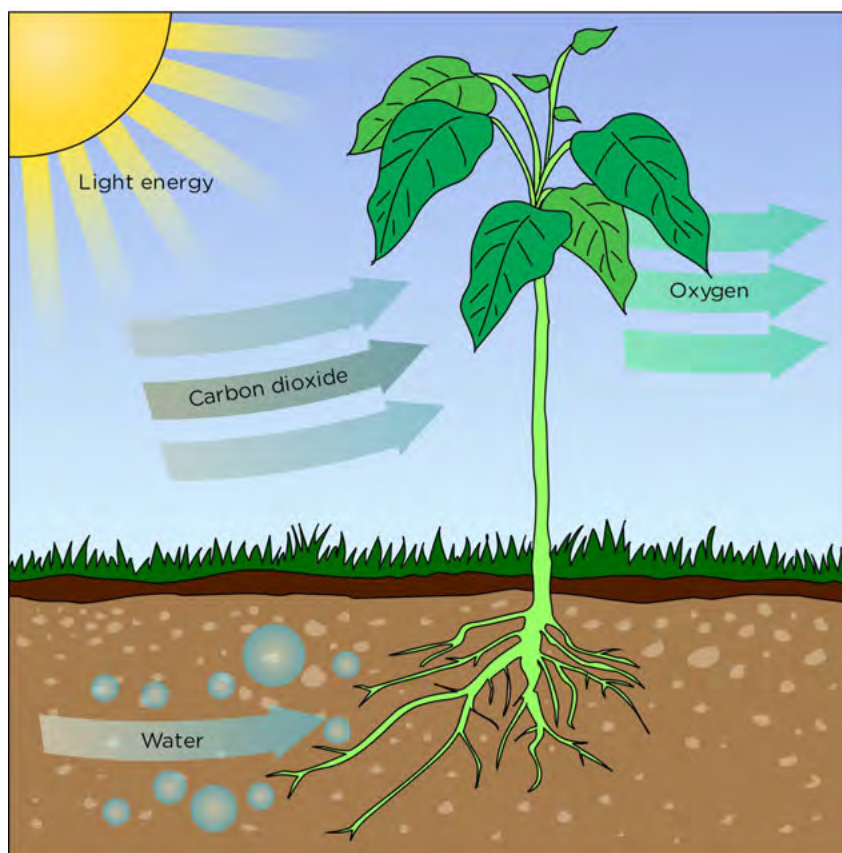


Elysia chlorotica, a sea slug, has evolved to absorb the chloroplasts from the green algae it eats and use them to photosynthesise! This animal can produce its own food and is green.

Photosynthesis has other requirements besides light energy from the Sun. What are these? Look at the following diagram which summarises the process of photosynthesis.

DID YOU KNOW?

Chloroplasts are only present in plants. However some sea slugs have learnt to absorb the chloroplasts from the green algae that they eat into their bodies and can actually photosynthesise themselves!

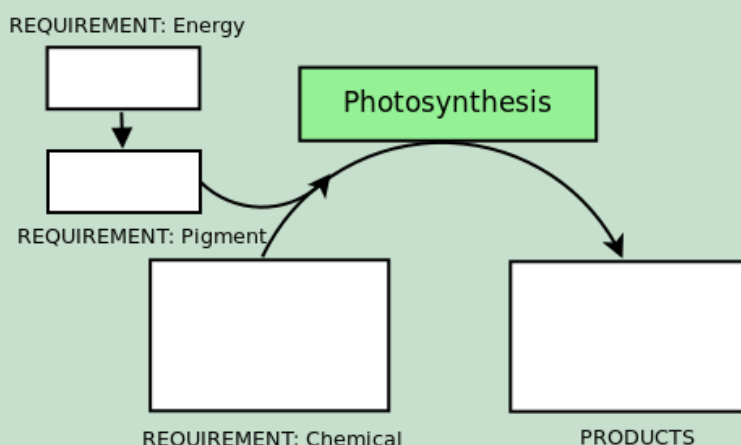


Plants use radiant energy from the Sun in a series of chemical reactions to change carbon dioxide from the air and water from the soil into **glucose**. The process releases oxygen.

ACTIVITY: Requirements and products of photosynthesis

INSTRUCTIONS:

1. Summarise what you have learnt about photosynthesis in the diagram below.
2. Fill in the requirements of photosynthesis in the block on the left and fill in what type of energy is needed and the name of the pigment that absorbs the energy.
3. Fill in the products of photosynthesis in the block on the right.



TAKE NOTE

Plants use sugars (glucose) as a basic molecule from which to make hundreds of other compounds, such as proteins, oils, vitamins, colourful pigments in flowers, strong tasting chemicals (hot chilli plant), sweet tasting nectar and sweet smelling fragrances.

The process of photosynthesis can be presented in the form of an equation:



What happens to the glucose that plants produce during photosynthesis?

Glucose storage and use


The glucose that a plant produces when it photosynthesises is the food for the plant. The plant can use this glucose directly, and release the energy during its own respiration or it can store the glucose or convert it into other chemical compounds.

Glucose is **soluble** in water. As we learnt in Matter and Materials in Gr. 6, this means that glucose can dissolve in water. This is useful to the plant as it means it can transport the glucose in water to where it is needed elsewhere in the plant. However, in order to store large amounts of glucose, plants need to convert it into compounds which are **insoluble** in water. Therefore the plant converts glucose into **starch**, which is insoluble in water. Why do you think the plant might need to store some glucose?



TAKE NOTE

The **Visit** boxes in the margins contain links to interesting websites and videos. Simply type the link exactly as it is into the address bar in your browser.



In addition to starch, plants also convert glucose into cellulose. Cellulose is used to support and strengthen plants. Animals do not have cellulose for support. Instead animals have something else to provide support and protect the body. Do you remember what this is?

Glucose is also converted into other chemical compounds that enable processes in the plant such as reproduction and growth.

We have now learnt about how plants produce glucose and store it as starch, but how do we know for sure? As young scientists we also need to question whether this explanation of photosynthesis is accurate. Is there an investigation we can do to test for the presence of these compounds? Let's find out!

We have learnt that plants produce glucose during photosynthesis and store this in the form of starch. Therefore, to see if a plant photosynthesises, we can test to see if the plant produced starch.

Study the following properties of starch and glucose with your class. Think of possible tests that can be done to determine whether a plant has produced either starch or glucose. Record some of your discussion points.

- Glucose tastes sweet but starch does not taste sweet at all.
- Glucose will dissolve in water while starch will not dissolve in water.
- Iodine changes from brownish-orange to dark blue-black when it comes into contact with starch. Have a look at the following photos which illustrate this.

VISIT

A video on the starch test.

bit.ly/177Z3ay



test tubes

iodine solution
(starch absent)

iodine solution
(starch present)

The left tube contains only diluted iodine solution and the right tube contains diluted iodine solution with starch.

Now that we know that plants produce glucose and change this into starch, we can find out if all leaves produce the same amount of starch through photosynthesis.



INVESTIGATION: Which leaves photosynthesise?

There are two parts to this investigation. First, we want to find out which leaves are able to photosynthesise. We will place some pot plants in the light for a day, and some other pot plants in a dark cupboard for a day, and then perform the investigation on the leaves of plants from both groups.

In the second part of the investigation, we will use what we have learnt to investigate which parts of variegated leaves photosynthesise.

Part 1: Leaves in light and dark

AIM:

1. What do you wish to establish by conducting this investigation?

HYPOTHESIS:

1. What do you think or predict will happen when you conduct this investigation?

MATERIALS AND APPARATUS:

- gloves
- a range of pot plants that can be easily moved around
- 100 ml beaker or glass jar in a saucepan with water
- bunsen burner, spirit lamp or a stove
- tweezers
- ethyl alcohol (or methylated spirits)
- glass petri dishes, white saucer or white tile
- stopwatch or timer
- glass pipette or dropper
- iodine solution

METHOD:

1. Work in groups of three or four.
2. Place half of the plants in the dark for at least 24-48 hours and the others in a well-lit area of the class that is exposed to lots of natural sunlight.
3. After 24 hours, pour 50 ml of the ethyl alcohol into the beaker and place it in the saucepan with water. Heat the saucepan over the bunsen burner or the stove. The water in the saucepan will distribute the heat evenly to warm the ethyl alcohol evenly.
4. Remove one healthy looking leaf from the pot plants that were in the well-lit area exposed to direct sunlight.
5. Using the tweezers, dip a leaf into the boiling water for 1-2 minutes. This helps to remove the waxy cuticle that covers the leaf and breaks down the cell walls.

6. After this, place the leaf into the beaker with the ethyl alcohol.
7. Leave the leaf in the alcohol until all the chlorophyll has been removed from the leaf and the alcohol turns green.
8. Place the leaf into warm water to soften it.
9. Remove the leaf from the warm water and place it on a white tile or a petri dish on top of a white surface.
10. Use the pipette or dropper to carefully drop 2 or 3 drops of iodine solution on the leaf in the petri dish and record your observations.
11. Repeat this process for two more leaves that were in the well-lit area.
12. Remove the plants that were in the dark for at least 24 hours. Use the test above to test whether there is starch present in the leaves from the plants that were kept in the dark.
13. Record your observations.

RESULTS AND OBSERVATIONS:

Keep a record of your observations. Draw a table to record and compare your results.



CONCLUSION:

1. What did you learn from doing this investigation?

QUESTIONS:

1. Why were some plants placed in a well-lit area with direct sunlight and others in the dark?

2. Explain what the results of the iodine test indicates.

Part 2 : Which parts of variegated leaves photosynthesise?

Have a look at the following photos of different plants. What do you notice about the leaves?



Ivy leaves.



Geranium leaves.

We call these leaves variegated as they have green and white sections. We want to find out which parts of these leaves photosynthesise in this part of the investigation.

INSTRUCTIONS:

1. You need to design this investigation yourself.
2. First decide what question you are trying to answer and the aim of your investigation.
3. Make a hypothesis for your investigation.
4. You then need to think back to part 1 and design the method for your investigation.
5. After conducting the investigation, you need to write up an experimental report of your findings.
6. In your report, you must have the following headings:
 - a) Aim
 - b) Hypothesis
 - c) Materials and apparatus
 - d) Method
 - e) Results
 - f) Discussion
 - g) Conclusion

7. In your results section you need to record your observations in a scientific way. You can do this using a table, diagrams or a combination of both. Think carefully about what information you need to record in order to come to conclusions at the end of your experiment.
8. In your discussion, you need to explain your results and what they mean. You also need to evaluate your investigation and explain if there were any unusual results and suggest ways that you could have improved your investigation for future researchers who might want to repeat what you have done.
9. Present your report on separate paper.



Leaves are not the only parts of plants that store starch. Starch is also stored in the stems, roots and fruit. Have you ever wondered why fruit becomes sweeter as it ripens? Think of an unripe green banana and a ripe yellow banana. Which one is sweeter? Let's find out why.



INVESTIGATION: Why do bananas become sweeter as they ripen?

In this investigation we will taste the bananas to determine if they have more glucose or more starch. We will also conduct a starch test on the ripe and unripe bananas to see which contain more starch.



Ripe yellow bananas and unripe green bananas.

AIM:

1. What do you wish to establish by conducting this investigation?

HYPOTHESIS:

1. What do you think or predict will happen when you conduct this investigation?

MATERIALS AND APPARATUS:

- ripe and unripe bananas cut into discs
- petri dish or saucer
- iodine solution
- dropper

METHOD:

1. Work in groups of three or four. Take a piece of the ripe banana and a piece of the unripe banana and compare the tastes and textures of each. Record your observations in a table. Which banana do you think contains the most starch and the least glucose (a sugar) based on the taste test?

2. Use the iodine starch test identify which banana, the ripe or the unripe one, contains the most starch. Record your observations in the table.
3. Compare this test to the results from your taste and texture test to identify which banana contained the most starch.

OBSERVATIONS:

1. Draw a table to record your observations from the taste and iodine test for starch.



QUESTIONS:

1. Compare your observations of ripe and unripe bananas with those of the other learners in the class. Did you all make the same observations?

2. What do you conclude from these results? Which method of testing is better to use and why do you say so?

3. Explain what you think happens to the starch as the bananas ripen.



Now that we have looked at how green plants produce their own food, let's find out how all living things release the energy stored in food in order to perform the life processes.

1.2 Respiration

We have now seen how plants produce food during photosynthesis. The energy from this food needs to be used by plants and by all the animals who eat those plants. In fact, all organisms need to break down food in order to release its chemical potential energy for life processes. So how does this happen? Let's find out.

Energy from food

Our bodies need energy to move and do work. Where do we get our energy from? The energy is obtained from the food that we and all other organisms eat.

If you think back to the work you did on fuel and energy in previous grades in Energy and Change, you will remember that fuels, such as wood, coal, and oil, contain **chemical potential energy**. When this fuel is burned in the presence of oxygen, the chemical potential energy is transferred into light and heat energy. In the same way, the glucose from the food that you eat is combined with oxygen in a series of chemical reactions to release the energy. The glucose is broken down and the energy is released. This energy is then used to drive all the other processes in your body. This process is called **respiration**. We can define respiration in all living organisms as the process by which energy is released from glucose in a series of chemical reactions.

Respiration takes place in all organisms, even plants. However, plants do not need to eat any food as they make their own food during photosynthesis.

Products of respiration

Do you remember how we represented photosynthesis as an equation to show what goes in and what comes out? We can represent respiration as an equation in the same way as we did for photosynthesis.

We know what is required for respiration to take place in all organisms. List the two ingredients for respiration.

However, respiration does not only produce energy. It also produces water and carbon dioxide as by-products. We can write an equation for respiration as follows:

glucose + oxygen → carbon dioxide + water + energy

During photosynthesis in plants, oxygen is produced as a by-product. We call it a by-product as it is not the main product that is wanted from the process. In photosynthesis, the main product that is required from the process is glucose. What are the by-products in respiration?

The carbon dioxide that is produced in the body of an organism during respiration needs to be removed. In humans, we do this by breathing out carbon dioxide-rich air. We will learn more about the whole respiratory system next year in Gr. 9, and how breathing, our blood circulation system and respiration all work together as one system within our bodies.

We can test for the products of respiration using our own breath. So how do we test that our breath contains carbon dioxide? It is a colourless gas, so we cannot see it directly.


NEW WORDS

- limewater
- respiration



TAKE NOTE

We will learn more about chemical reactions next term in Matter and Materials. You will also learn more about respiration in later grades.




TAKE NOTE

A by-product is also sometimes referred to as a waste product.



There is a very well known test for detecting carbon dioxide using clear limewater. To test if a gas contains carbon dioxide, simply bubble the gas through **limewater**. If the clear limewater turns milky, then the gas contains carbon dioxide. Next term in Matter and Materials, we will look at this again and find out about the chemical reaction taking place in the test. For now, let's use this test to show that our breath contains carbon dioxide.



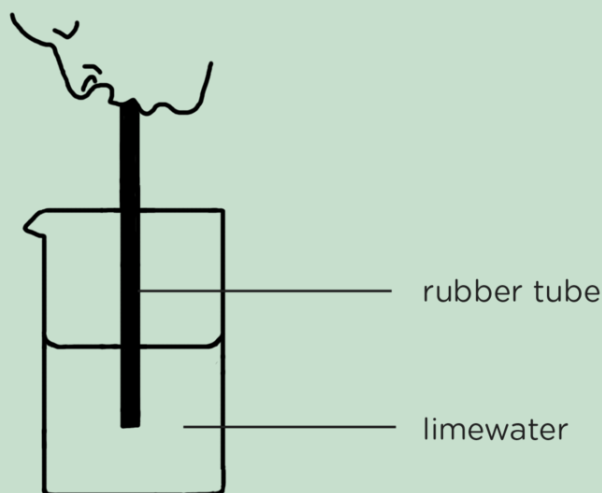
ACTIVITY: Does our breath contain carbon dioxide?

MATERIALS:

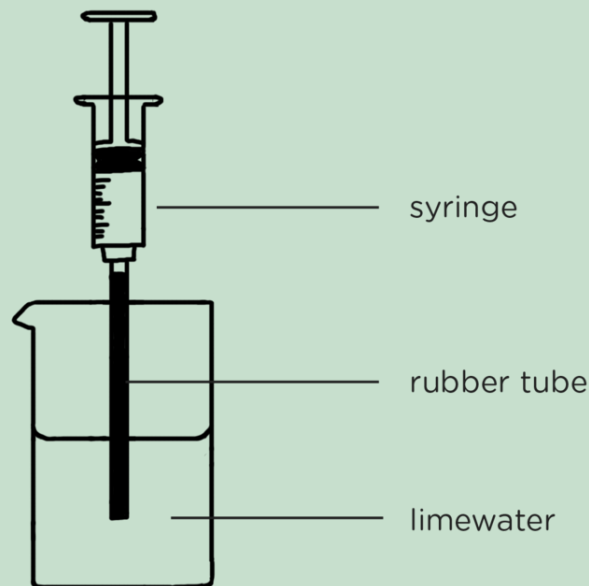
- small beakers (or test tubes)
- rubber tubes or drinking straws
- limewater
- 20 ml syringe (or larger if available)

INSTRUCTIONS

1. Work in groups of three.
2. Mark one beaker AIR and the other BREATH.
3. Pour clear limewater into each beaker until they are half full.
4. Blow bubbles through the rubber tube into the beaker marked BREATH, as shown in the diagram. Do this for at least 1 minute. Notice what happens to the clear limewater.




5. Attach a rubber tube to the front of a syringe. Draw air into the syringe from the atmosphere.
6. Place this rubber tube into the beaker marked AIR and push out the air inside the syringe slowly and carefully into the limewater as shown in the diagram. Notice what happens to the clear limewater.



TAKE NOTE

Do not confuse breathing with respiration! Breathing is the act of inhaling and exhaling air into and out of the lungs.

Respiration is the metabolic process that uses oxygen to release energy and releases carbon dioxide as a by-product.



QUESTIONS

1. Describe what you observed when you blew air from your lungs through the limewater. What does this mean?

2. Describe what you observed when you used the syringe to bubble air from the atmosphere through clear limewater.

3. A very small percentage of atmospheric air is carbon dioxide gas (0.03). Why do you think you observed the result you did when you pushed air from the atmosphere through the limewater?

4. Think about respiration.
 - a) What are the requirements for respiration?

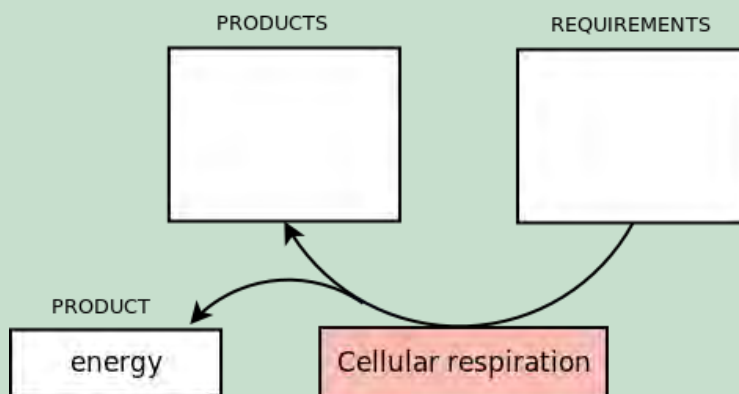
- b) What are the products of respiration?



ACTIVITY: Requirements and products of respiration

INSTRUCTIONS:

1. Summarise what you have learnt about respiration in the summary diagram below.
2. Fill in the requirements of respiration in the block on the right.
3. Fill in the products of respiration in the block on the left.



SUMMARY:

Key Concepts

- The need for energy drives the interactions and interdependence in an ecosystem.
- The Sun provides energy to the Earth in the form of radiant (light) energy and heat energy.
- Photosynthesis is the process whereby green plants use carbon dioxide from the air, water from the soil and radiant energy from the Sun in a series of chemical reactions to produce glucose (food) and oxygen.
- Plants are able to photosynthesise because they contain chlorophyll, a green pigment that can capture light energy from the Sun.
- Plants change the glucose that they produce into starch that can be stored more easily.
- Plants also produce cellulose fibres that give plants strength and support and are important to our digestive systems as roughage.
- The food that a plant produces is used by animals when they eat the plant and by other animals that eat them.
- This food contains chemical potential energy that needs to be released from the food.
- Respiration is the process in all living organisms by which energy is released from glucose in a series of chemical reactions.
- Respiration uses oxygen while carbon dioxide and water are given off as by-products.

Concept Map

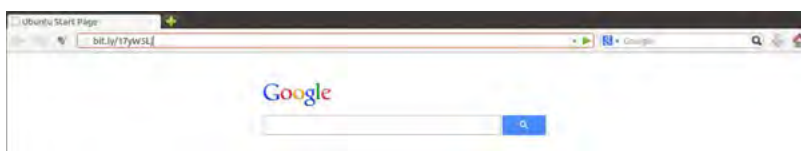
This year in Natural Sciences, we are going to learn more about how to make our own concept maps.

In the summary, we first have the "Key concepts" for this chapter. This is a written summary where the information from this chapter is summarised using words. We can also create a concept map of this chapter. This is a map of how all the concepts (ideas and topics) in this chapter fit together and are linked to each other. A concept map gives us a more visual way of summarizing information.

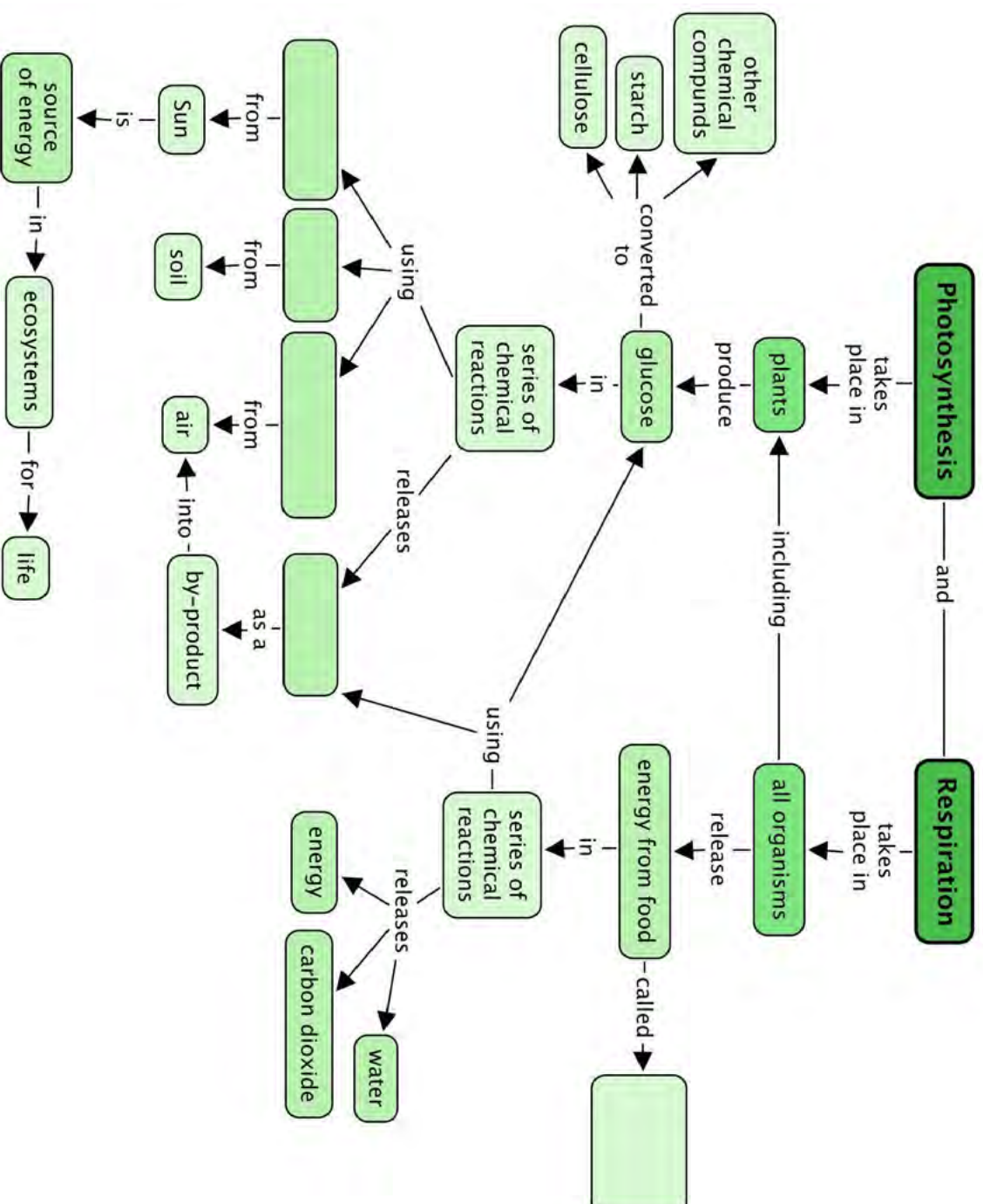
Different people like to learn and study in different ways; some people like to make written summaries, whilst others like to draw their own concept maps when studying and learning. Others like to make things even more visual, using pictures and diagrams to form their summaries. Figuring out the study method that works best for you, and developing these skills is very useful, especially for later in high school and after school!

Have a look at the concept map below for 'Photosynthesis and Respiration'. Do you see that there are some empty spaces? You need to complete the concept map by filling these in. To do this you need read the map from top to bottom and have a look at the concepts which come before. For example, read the concept map as follows, "Respiration takes place in all organisms. All organisms release energy from food, called" What type of energy does food contain? Remember, food is the fuel for our bodies. You also need to fill in the three things that plants use to photosynthesise. You need to look at what concepts link from these in order to know where to put each one. Finally, what does photosynthesis release as a by-product? You also need to fill this in.


Have you noticed the **VISIT** boxes in the margins which contain links? You simply need to type this whole link into the address bar in your internet browser, either on your PC, tablet or mobile phone, and press enter, like this:



It will direct you to our website where you can watch the video or visit the webpage online. **Be curious and discover more online at our website!**



REVISION:



1. A Gr. 4 learner wanted to grow some beans and carefully planted them in a yoghurt tub and watered them. He was scared that his little brother would knock his tub over, so he hid the tub in his cupboard.

a) Explain what he would have noticed a few days after planting the beans. [2 marks]

b) Predict what would have happened after another few days with the beans hidden in his cupboard. [2 marks]

c) Explain why you predicted this outcome for his beans. [2 marks]

d) What should he have done to make his bean plants grow tall and strong? [2 marks]

2. What are the requirements for photosynthesis to occur? [3 marks]

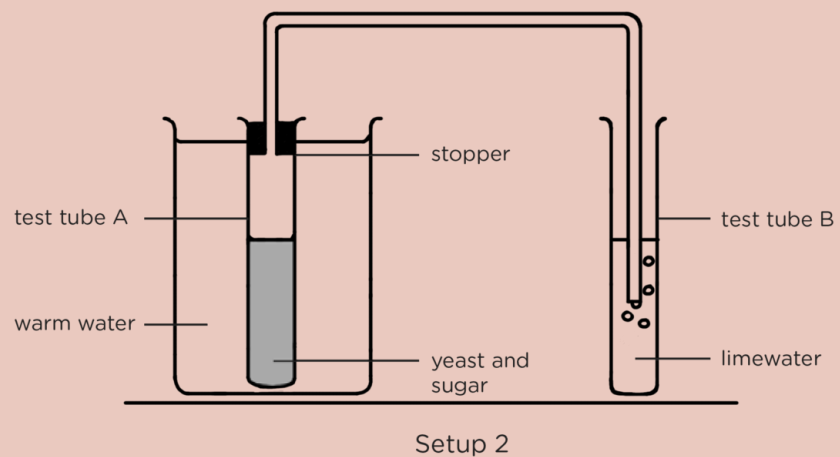
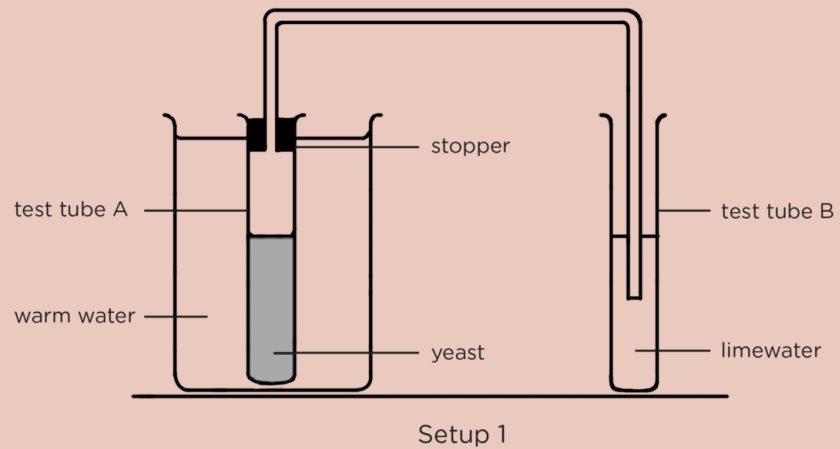
3. A farmer is growing some tomatoes. He heard from his daughter that plants produce glucose during photosynthesis, so he decided to see for himself. However, when he tested the leaves, he did not find much glucose, but he did find a lot of starch present.

a) Why did the farmer see this result? [2 marks]

b) Describe the test that the farmer conducted to show that the leaf contained starch. [5 marks]

4. Do plants undergo photosynthesis and respiration all day and all night?
Give reasons for your answer. [4 marks]

5. A group of Gr. 7 learners wanted to show that carbon dioxide is used to make bread rise because the yeast and sugar that is added to the bread mix produces the carbon dioxide. They set up the following two experiments. The gas that they collected from each test tube was run through limewater.



- a) Why did they run the rubber tube from Test Tube A to Test Tube B? [3 marks]

- b) Explain why they added a stopper into the top of Test Tube A. [1 mark]

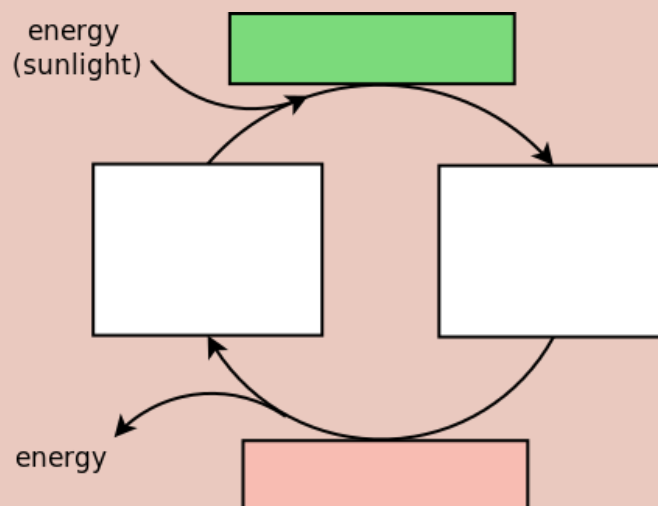
- c) The following photo shows one of the test tubes after the experiment. Which test tube do you think it is and from which set-up. Give reasons for your answer. [2 marks]



Which test tube is this?

- d) Why do you think the yeast solution in Setup 1 did not produce carbon dioxide. [2 marks]

6. Study the following diagram and fill in the missing information. [6 marks]



7. Draw a table in the following space to show the differences between the two processes, photosynthesis and respiration. Your table should highlight the differences in requirements, the differences in the products, which organisms the processes take place in, and when. [8 marks]

	Photosynthesis	Respiration
Requirements	Light, Carbon Dioxide, Water	Glucose, Oxygen
Products	Glucose, Oxygen	Carbon Dioxide, Water
Organisms	Plants, Algae, Some Bacteria	All Living Organisms
When	Daytime	Day and Night

Total [44 marks]



Here is your chance to discover the possibilities. What can this apple become?





KEY QUESTIONS:

- What is ecology?
- We talk about the population of people in South Africa, but do other animals live in populations?
- What makes up an ecosystem? Are we part of an ecosystem?
- How are organisms linked by their feeding relationship to make food webs?
- Why do we need many more producers and fewer carnivores in a food web?
- How does an ecosystem remain balanced so that it can support all of the organisms that live there?
- We know that natural disasters can have a huge impact on ecosystems, but what are we as humans doing that upsets the fine balance in ecosystems?
- What does it mean if an organism is adapted to its environment?
- Why have some organisms become extinct?
- During the course of Earth's history, many organisms have become extinct, so what is different and worrying about the decreasing numbers of rhinos and elephants?
- How can we make a difference to conserve our own environments?

NEW WORDS

- biosphere
- community
- ecologist
- ecology
- ecosystem
- interact
- population
- population ecology
- species

2.1 What is ecology?


Every living organism on earth depends on and interacts with other living and non-living things to stay alive. Organisms depend on other organisms for food for example, and also depend on their environment for protection and a place to stay. The particular branch of Science that studies how organisms interact with other organisms and their environment is called **ecology**. Someone who studies these relationships and interactions is called an **ecologist**.

Ecological interactions

The ecological interactions that take place within a specific area are generally classified into four levels: **populations**, **communities**, **ecosystems** and the **biosphere**.

Individuals live together in **populations**. Different populations together make up a **community**. Communities together with the non-living things in their surroundings make up an **ecosystem**. All the ecosystems on Earth make up the **biosphere**.

Look at the following illustration which shows the levels of organisation.



TAKE NOTE

If you want to check the definitions of a **New word**, check the glossary at the back of this strand.



You may have heard of terms such as the biosphere and ecosystems in previous grades. What about populations and communities? You may have also heard about the population of people in South Africa, or when someone talks about your local community at home. What do we mean when we use these terms in ecology? Let's take a closer look.

Population

In the previous illustration, we can see that the individual impala make up a population in the game reserve. On a large scale, we can also say that the 50 million people in South Africa make up our country's population.

A population is a group of organisms of the same species that live in the same area at a specific point in time and they can interbreed with each other. When a scientist studies a population they might study how the population grows and the factors that affect how the population increases or decreases. They will also look at how the population interacts with the environment.

Community

In ecology, a community refers to all the populations of organisms that **interact** in a certain area. Community ecology is the study of how they interact. For example, what feeding relationships occur in the area? What types of grasses do specific herbivores eat and what eats the herbivores? Turn back to the illustration of the wildlife in the game reserve. Which animals make up the community?

VISIT

A simulation of different real-time changes in Earth's human populations.
bit.ly/178rzXx





ACTIVITY: What is a population?

INSTRUCTIONS:

1. Look at the following examples of populations.
2. Answer the questions which follow.



A population of hippos in the St Lucia estuary (river mouth) in Kwa-Zulu Natal.



A population of zebra in Kruger National Park.



A population of seals on Seal Island in False Bay.



A population of penguins at Boulders Beach.

QUESTIONS:

1. What do you notice about all the animals that make up a population?

2. In each of the photos, the populations of animals are found in a specific area. Do you think the zebra in Kruger National Park and the zebra in Hluhluwe-Umfolozi game reserve in Zululand are from the same population? Why do you say so?

3. How big is a population?

4. Do you think the seals that lived on Seal Island 100 years ago are part of the same population as the seals that live there now in the photo? Why do you say so?

5. What do you think would happen to the population of hippos in the estuary at St Lucia if the river dried up? Explain your answer.

6. A group of scientists is studying a population of zebra in the Kruger National Park. They notice that over the last 4 years, the population has grown quite rapidly. Why do you think this might be the case? What are some possible reasons for this? Discuss this with your class.



Ecosystem

Turn back to the illustration of the wildlife in a game reserve. The different populations interact with each other to form a community. When we look at how the communities interact with the non-living things in their environment, then we are looking at ecology at the ecosystem level.

Think of the different populations of organisms making up a community in Kruger National Park, such as the zebra, elephant, lions, springbok, different trees and grasses. Now look at the photo of some of these populations at a watering hole. In this photo we are studying how the living things interact with the non-living things. For example, the zebra and springbok are drinking water, whilst the elephant is splashing mud over itself to cool down. This is an **ecosystem**.




An ecosystem in the game reserve consist of the living and non-living things interacting with each other.

Biosphere

All the ecosystems on Earth combined make up the biosphere. At the biosphere level, we can study how the living and non-living things interact on a much larger scale. This includes climate changes, how the Earth has changed over history and even how the movement of planet Earth affects different ecosystems, wind patterns as well as rock and soil formation.



All the ecosystems on Earth make up the biosphere.



ACTIVITY: Check your understanding

Write your own definitions and explanations for the following terms.

1. Ecology:

2. Interaction:

3. Organism:

4. Population:

5. Community:

6. Ecosystem:

7. Biosphere:



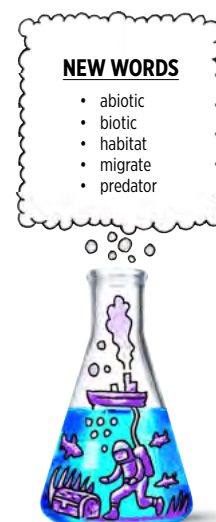
Let's now take a closer look at ecosystems.


2.2 Ecosystems

The living organisms on Earth live and interact in different ecosystems around the planet. Together all these ecosystems make up the Earth's biosphere. An ecosystem consists of the **abiotic** (non-living) environment and the **biotic** (living) organisms.

Biotic and abiotic components in an ecosystem

We have looked a lot at the living organisms in different ecosystems in the last section, but what are some of the abiotic things in ecosystems? And how do the biotic things interact with the abiotic environment in a system?

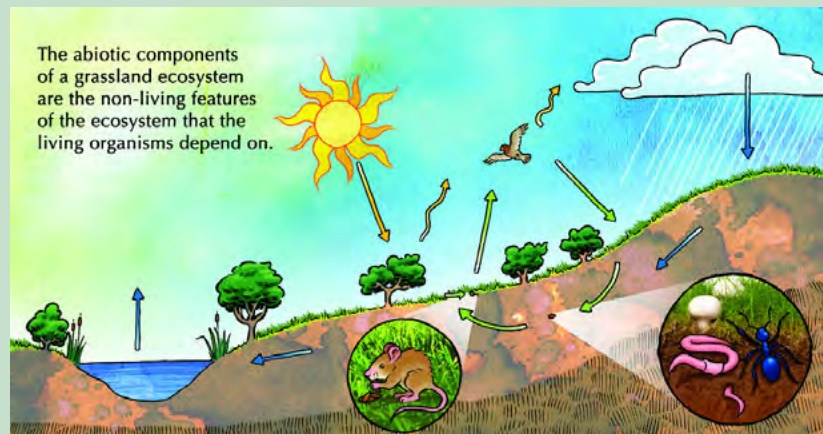




ACTIVITY: Abiotic components in a grassland ecosystem

INSTRUCTIONS:

1. Look at the following image of a grassland ecosystem.
2. Answer the questions that follow.



QUESTIONS:

1. List some of the abiotic things in the grassland ecosystem shown in the image.

2. For each of the animals, discuss how you think the organisms below are interacting with the abiotic environment.

a) The eagle

b) The trees and grass

c) The mouse

d) The worm and insect

3. In the picture, the blue arrows show the movement of water through the ecosystem. What do we call this movement of water?

4. Temperature is an abiotic factor in an ecosystem. What can affect the temperature in the grassland ecosystem?

5. Another abiotic factor which affects ecosystems is the slope of the land. For example, is it flat or are there hills or mountains. How would you describe the land in the grassland ecosystem? How do you think this contour affects the ecosystem?

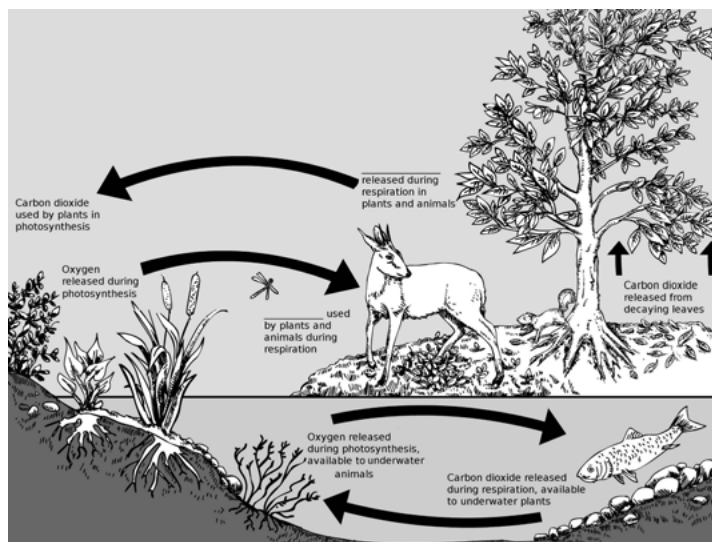
VISIT

Play a game to identify specific habitats on Earth.

bit.ly/1beFyQA




Apart from the recycling water, biotic and abiotic factors also interact to recycle carbon dioxide and oxygen in ecosystems. Photosynthesis in plants uses carbon dioxide to produce glucose. The plants and animals then break down the sugars and release carbon dioxide again during respiration. Photosynthesis releases oxygen, while plants and animals take it in for respiration. Look at the following illustration which shows how the gases are cycled through a pond ecosystem.



TAKE NOTE

You can find out lots more online by visiting the links provided in the **Visit** boxes. Be curious and discover the possibilities!



There are two labels missing, but lines have been provided for you to fill them in on the diagram. Discuss this with your class and write them in.

Now that we know a bit more about the different biotic and abiotic factors in an ecosystem and how they interact, let's study an ecosystem!




ACTIVITY: Studying an ecosystem

MATERIALS::

- 60 m long string
- pegs or stakes
- measuring tape (10 m long)
- old material for flags on pegs
- thermometer
- rulers
- trowel
- sieve
- insect nets
- large plastic ziploc bags
- marking pens
- forceps
- gloves
- hand lens
- clipboard, paper and pens or pencils
- camera (if possible)

INSTRUCTIONS:

1. Work in groups of five. Your teachers will help you to select a site to study.
2. Stake out a square measuring 10 m x 10 m. Use the 10 m measuring rope and knock the stakes or pegs into the ground to mark the corners of the square. Tie a flag to the stake to make it more visible. (You will use this square to study different things in the next few weeks so make sure that you choose an appropriate site that does not overlap with another group's site.)




An example of a square with four quadrants.


3. Try to identify as many plants as possible. Use the following space to record your findings about the plants. You can even draw some illustrations.



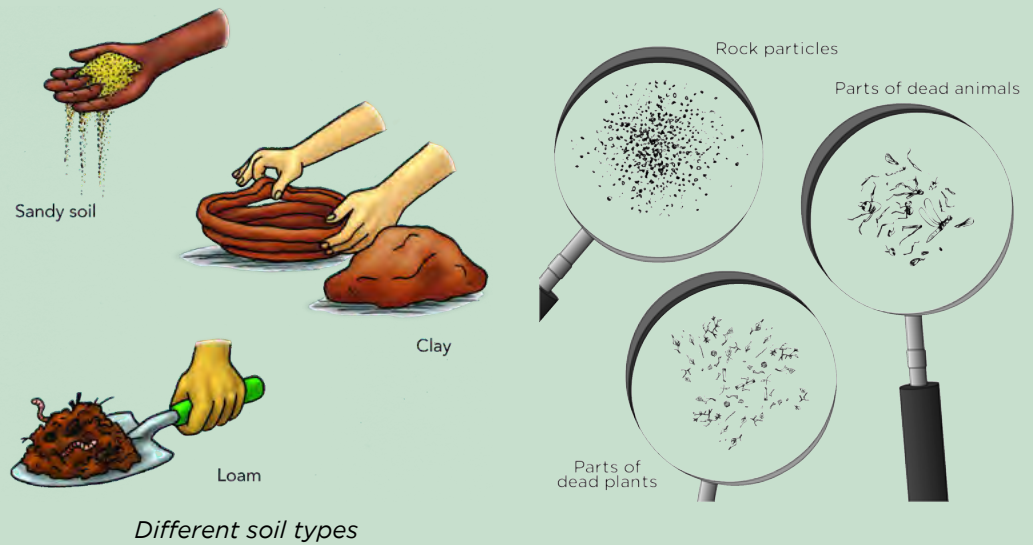
4. Use the net to capture a few small invertebrates. Try to identify them (ask for help if you need it), then release them unharmed. Use the following space to record your observations. You can use illustrations.



5. Look for evidence of bigger animals. Are there any dropping, tracks, or birds in the trees? Record what you find.



6. Measure the temperature.
 - a) Measure the air temperature in your square.
 - b) Measure the temperature of the soil about 5 cm below the surface.
7. Take a soil sample by putting one scoop of soil into a plastic bag. Determine whether it is sand, loam or clay soil. Compare your sample with those of other groups. The following illustrations give an idea of the different types of soil.



Use the hand lens to see if you can find any plant or animal remains in the soil.

VISIT

Build your own wind meter.

bit.ly/1cx14FP



8. Use the following space to write about your observations and draw images. (Optional: Measure the rainfall and wind speed. Measure the rainfall over the next few weeks.)

QUESTIONS:

1. Describe the different habitats in your ecosystem.

2. Explain how you think the abiotic factors of the ecosystem you studied affect the plants and animals in your ecosystem.

3. What relationships did you notice between the plants and animals in the area you studied?

4. In the area that you studied, was there any evidence of human interference? For example, rubbish or a pathway? How did this impact on the living organisms and also the abiotic factors in your square? What suggestions can you make to prevent this kind of interference.

5. Do you think that your presence while you made your observations had an influence on the animals or plants in the quadrant that you observed?



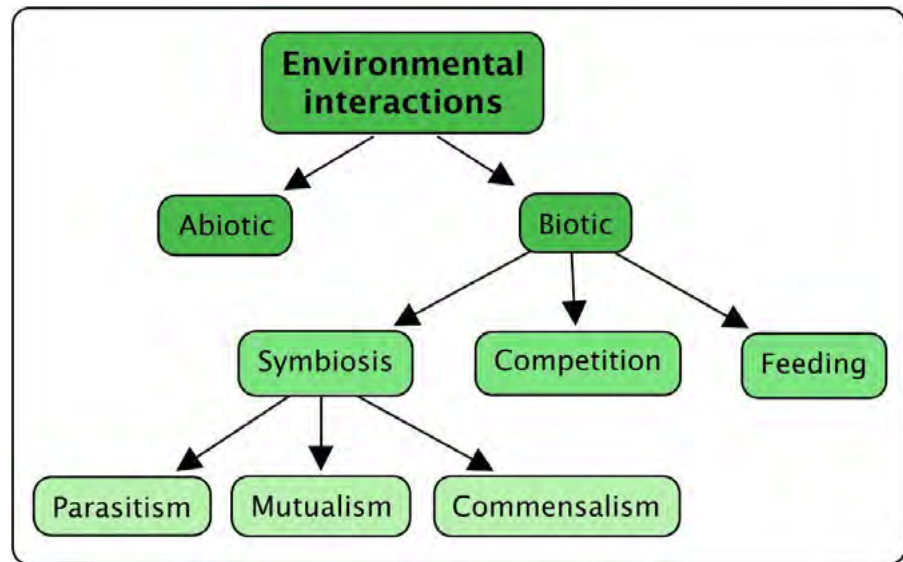
We studied relatively small ecosystems. How big can an ecosystem be? Does size in an ecosystem matter?

Ecosystem size

The size of a real ecosystem is not defined in terms of area, but rather by the interactions that occur inside it. It can be as small as a river bank or as large as the Kruger National Park.

Types of interactions

Within an ecosystem the species living in a particular area can interact in different ways with each other. We can classify the interactions between organisms as follows:



1. Competition

When two species in an ecosystem need to share a valuable and often limited resource, such as food or water, they are in competition with each other. The two different species compete with each other for the same resources, especially food.



Hyenas and vultures are both scavengers and compete for the same food.

2. Symbiosis

Symbiosis describes the way in which two different species living together in the same community, interact with each other over a long time period. This can occur in the form of parasitism, mutualism or commensalism.

a) Parasitism: Parasitism is when the one species benefits or gains something from the relationship and the other species is harmed in some way. The host may die in some interactions.



Ticks are parasites and feed off the blood of many animals, for example dogs, cows, buck and humans.

DID YOU KNOW?

Some ants have fungi farms that they carefully look after and protect, providing the fungi with organic matter to fertilise it, while the fungi provides the ants with nutrients.

b) Mutualism: Mutualism occurs between any two species where both of the individuals benefit from the interaction. Both species gain something from the other, so we can say it is mutually beneficial.



Pollination is an example of mutualism as the bee gets food (nectar) from the flower and the flower is pollinated by the bee so that it can reproduce.

VISIT

A video of leaf cutter ants tending to their fungi farm
bit.ly/1cx16xq

c) Commensalism: In some interactions between individuals from different species, the one species benefits, while the other one is unaffected by the relationship. Unlike parasitism, in commensalism the other species is not harmed or benefited in any way.



A whale shark with remora fish. The remora fish get scraps of food that fall out of the shark's mouth. The whale shark is unaffected.



3. Feeding: Different species in an ecosystem are related and interact when one species can use the other species as a food source. For example, in predator-prey relationships, the one species (**predator**) will hunt another species (**prey**).






Lions and zebras have a predator-prey relationship.





ACTIVITY: Identify the type of interaction between organisms

INSTRUCTIONS:


1. Study the photos and information in the following table.
2. Identify the interdependence in each case and give a reason for your choice.

	Type of interaction	Explain this kind of interaction
 A hummingbird feeding.		
 Plants on a forest floor.		
 Flea bites on a human.		

	Type of interaction	Explain this kind of interaction
 <p>Clownfish in an anemone.</p>		
 <p>An egret waiting for the rhino to disturb insects to eat.</p>		

TAKE NOTE

The term autotroph comes from the Greek words *autos* meaning 'self' and *trophe* meaning 'nourishing'. So autotroph means 'self-feeding'.



Now that we know how organisms interact with each other, we will take a closer look at the feedings relationships between different organisms.

2.3 Feeding relationships

In the last section we saw how organisms from different species interact within an ecosystem. Let's now take a closer look at how organisms interact through their feeding relationships.

Feeding types

Living organisms need to feed to be able to perform the other life processes. Some organisms can produce their own food, such as plants, while other organisms cannot do this and need to feed on other organisms to obtain their energy.

We can therefore identify different feeding types in an ecosystem, based on how the organism obtains (gets) its food. There are **producers** and **consumers**.

Producers

Producers are organisms that are able to produce their own organic food. They do not need to eat other organisms to do this. Producers are also called **autotrophs**. Which organisms have you come across that can make their own food?

NEW WORDS

- carnivore
- consumer
- decomposers
- herbivore
- insectivore
- omnivore
- producer



Plants are producers because they make their own food during photosynthesis. What do plants need in order to photosynthesise?

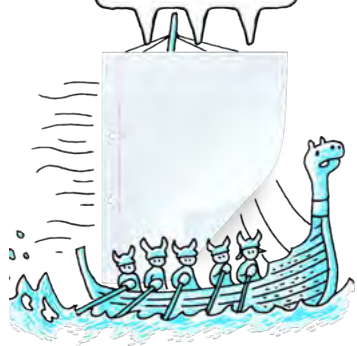
DID YOU KNOW?

In 2011, deep sea researchers discovered mussels living in symbiosis with bacteria that use hydrogen as a fuel source in chemosynthesis. These are the first organisms discovered to do so!



TAKE NOTE

The term heterotroph comes from the Greek words *heteros* meaning 'different' and *trophe* meaning 'nourishing'. So heterotroph means 'different-feeding' or feeding on different things.



Plants produce food through photosynthesis.

Consumers

Organisms which cannot produce their own food need to eat other organisms to get food. These organisms are called consumers. All animals are consumers as they cannot produce their own food. Consumers are also called **heterotrophs**.



There are many types of consumers and we can classify them into specific groups depending on the food that they consume. These are:

- **herbivores**
- **carnivores**
- **omnivores**
- **decomposers**

ACTIVITY: Different types of consumers

INSTRUCTIONS:

1. The following image shows a variety of different animals found in South Africa.
2. Study the illustration and then answer the questions that follow.



QUESTIONS:


1. What is a herbivore? Write a definition below and then give four examples of animals from the images which are herbivores.

2. What is a carnivore? Write a definition below and then give four examples of animals from the images which are carnivores.

3. There are different types of carnivores. Some carnivores hunt other animals. They are called predators. The animals that they hunt are called prey. A lion is an example of a predator. Give three examples from the images of animals which are prey of the lion.

4. Other types of carnivores are called scavengers as they eat dead meat, for example a hyena. There are three other scavengers in the images. Identify them and write the names below.

5. The following animals are also all carnivores. They all have a similar diet. Do you know what they all eat? Find out what these animals eat. Discuss this with your class.



A chameleon



A bat



A praying mantis



A swallow

6. Write down below what these animals all eat and what we call this type of carnivore.

7. What do we call animals that eat both plants and other animals? Give one example from the pictures.

8. What would you classify humans as?

9. The last group of animals that we can discuss from this image are the decomposers. Decomposers break down the remains of dead plants and animals. Give an example of a decomposer from the image.

10. Refer to the study of an ecosystem in or near your school that you are busy with.

a) List the producers in your ecosystem. Explain how you know they are producers.

b) List the herbivores that you found in your ecosystem. Explain how you know they are herbivores.


c) Did you find evidence of or find examples of carnivores in your ecosystem? List them below.

d) Study the soil again. Use the hand lens to see if there are any decomposers that you can see or see evidence of in your ecosystem. Describe any decomposers that you found below.



In the last activity, we looked at different consumers. The examples that we studied were all different types of animals. But what about the other kingdoms, such as fungi?

You might remember learning about fungi in previous grades. Fungi are not plants. Fungi cannot photosynthesise as they do not have chlorophyll. So where do fungi get their food from?



ACTIVITY: Different decomposers

INSTRUCTIONS:

1. Look at the following photographs of different fungi.
2. Answer the questions that follow.



QUESTIONS:

1. What kingdom do the above organisms belong to?

2. What do you notice about where these mushrooms are growing? What are they mostly growing on? Is it dead or alive?

3. The mushrooms get their nutrients from what they are growing on. At the same time, they are breaking down this dead matter. What can we therefore call fungi?

VISIT

Play the food chain game!

bit.ly/13m4bWk



-
-
-

2.4 Energy flow: Food chains and food webs

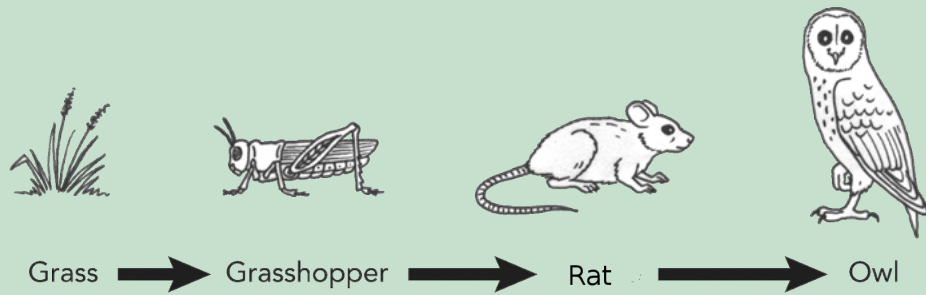
Energy transfer

NEW WORDS

- energy pyramid
- food chain
- food web
- primary consumer
- secondary consumer
- tertiary consumer
- trophic level

INSTRUCTIONS:

-



QUESTIONS:

1. What can we call this diagram?

2. Which organism is the producer?

3. Which organisms are the consumers?


4. Out of the consumers, identify the herbivore and the carnivores.

5. The rat also actually eats seeds and other plants. Therefore, what do we call the rat? Give a reason for your answer.

6. What do the arrows show us?

7. Do you think it makes a difference which way the arrows are pointing? Explain your answer.

8. Use the following space to draw three more food chains. Use organisms from the ecosystem that you are studying at or near your school in at least two of the food chains you draw.



9. Where would you place decomposers in a food chain? Why do you say so?



Can you see how the above food chain describes how the energy is passed along from the producer to the consumers? But, there are three different consumers in this food chain. How can we distinguish between the different consumers?

- Animals that eat plants are **primary consumers**. (Primary means *first*.)
- Animals that eat primary consumers are called **secondary consumers**.
- Animals that eat the secondary consumers (mostly predators) are the **tertiary consumers**.

Identify the different levels of consumers in the food chain in the activity.

Each of these levels in the food chain is called a **trophic level**. The organism uses up to 90% of its food energy itself for its life processes. Only about 10% of the energy goes into new body cells and is available to the next animal when it gets eaten. This loss of energy at each trophic level can be shown by an **energy pyramid**. But, why do we show it in the shape of a pyramid? Let's find out.





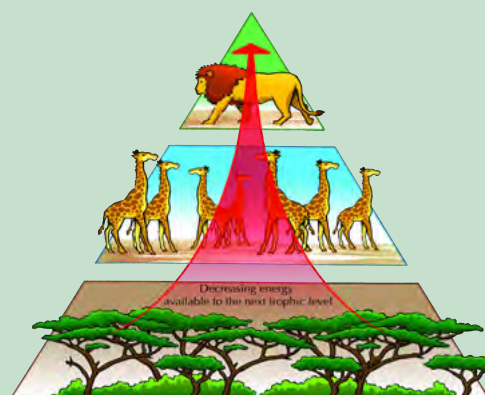
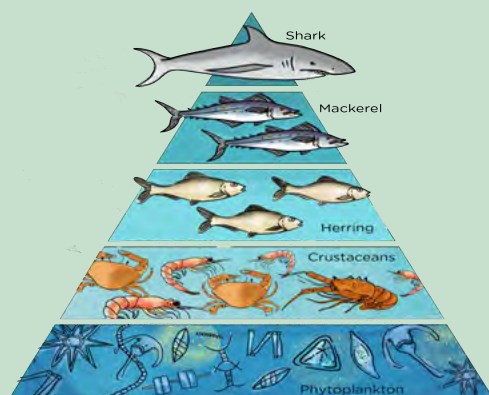
ACTIVITY: Studying energy pyramids

MATERIALS:

- cardboard
- scissors
- glue
- coloured pens and pencils

INSTRUCTIONS:

1. Have a look at the following energy pyramid for a marine and a savanna ecosystem. Pay careful attention to the number of organisms in each level.
2. Answer the questions that follow.
3. At the end, you can make your own energy pyramid.



QUESTIONS:

1. Which organisms are the producers in the marine ecosystem and in the savanna ecosystem?

2. Which organisms are the primary consumers in the marine ecosystem and in the savanna ecosystem?


3. 90% of the energy is lost and only 10% is made available to the next trophic level. Why do you think this happens? Discuss this in your class and write your answer down below.

4. Give possible reasons why you think there needs to be so many producers in these ecosystems.

5. How many trophic levels are there in each of the ecosystems?

6. Compare the amount of producers with the amount of secondary consumers. Why does there seem to be such a large difference in numbers?

7. Read the following quote and draw an energy pyramid with five trophic levels in the space provided:
"Three hundred fish are needed to support one man for a year. The trout, in turn, must consume 90 000 frogs, that must consume 27 million grasshoppers that live off 1000 tons of grass."



Now let's make our own energy pyramids. Follow the steps:

1. Use an A4 sheet of cardboard and cut out a square. Do this by folding one corner to the opposite side and cutting off the rectangle sticking out.



2. Next, fold the square in half the other way so that you have two folds diagonally across the square.



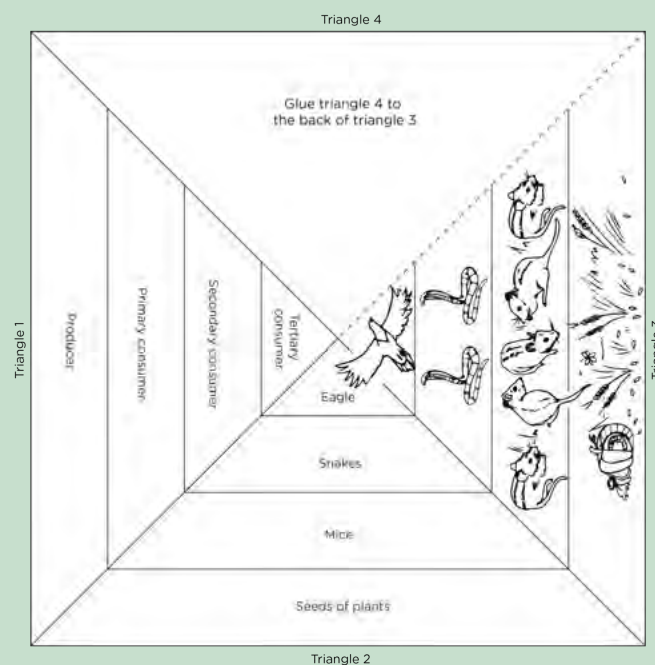
3. Cut along one fold to the centre.



4. Fold the one of the triangle sides underneath the other one to make a pyramid.



5. Before gluing the two sides together, draw three lines to divide the sides into 4 layers.
6. Now you need to design your energy pyramid. Decide on the organisms that will go into each level. You will need producers, primary consumers, secondary consumers and a tertiary consumer.
7. In one of the triangles, draw images of each of the organisms in the different levels.
8. In another triangle write the names of the organisms.
9. In the last triangle, write whether the organism is the producer or which type of consumer.
10. Now glue the triangle together.
11. Have a look at the following example. You must come up with different organisms!




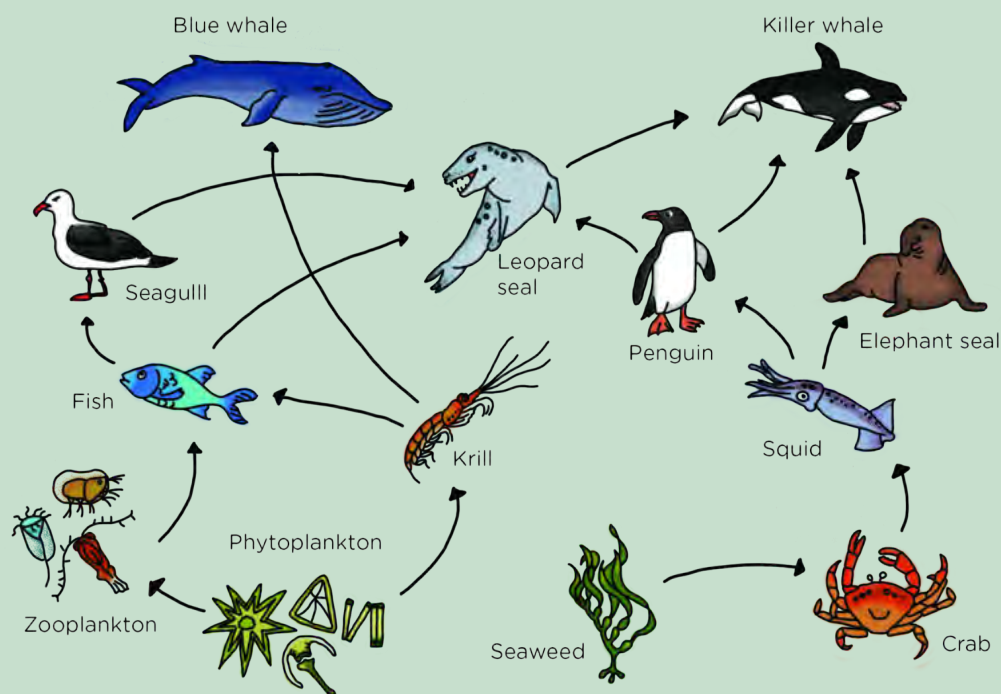
Food webs

Consumers have different sources of food in an ecosystem and do not only rely on only one species for their food. If we put all the food chains within an ecosystem together, then we end up with many interconnected food chains. This is called a food web. A food web is very useful to show the many different feeding relationships between different species within an ecosystem

ACTIVITY: Identifying food chains and food webs

INSTRUCTIONS:


1. Study the food web below.
2. Answer the questions that follow.



QUESTIONS:

1. What sort of ecosystem does this food web describe?

2. Use the following space to write down 4 different food chains from this food web.




3. What does a food web show?

4. Name the producer in this food web.

5. List the herbivores in this food web.

6. Name two species in this food web that are top carnivores.


Refer to the ecosystem that you are currently studying. See if you can identify the food web that is applicable in your marked off ecosystem. Draw it below.



What do you think would happen to the marine ecosystem in the last activity if we removed the phytoplankton? This brings us to the next section.

2.5 Balance in an ecosystem

In this section will examine the balance between the different trophic levels in ecosystems, since all organisms in the ecosystem have to rely on the resources the area can supply. Any area can only support a **limited** number of animals. Look at the ecosystem below and decide which resources the organisms depend on. Remember to take some notes.



A balanced savanna ecosystem.

If all the grass and trees die, what would happen to the zebra and elephants? What would later happen to the cheetah and hyena? Why is this? The balance in an ecosystem refers to how many animals it can support for long periods. If the balance is upset, the whole system could fail.

One of the factors that we can look at within an ecosystem to see if it is balanced is the population growth of different species over time.

Population growth

Over time ecological populations interact and change within a community. All populations change over time and grow. The population growth of a species in the wild is kept in balance by a number of different factors.

Human intervention can sometimes cause serious damage to an animal population, such as the critically **endangered** Riverine Rabbit. There are fewer than 200 individuals left in South Africa. It only eats from a few plant types, so its **habitat** is restricted to where these plants are found, like small areas of the Karroo. During the day, it hides under bushes on the river banks, but many of its home areas have been invaded by humans or destroyed.

NEW WORDS

- endangered
- extinct
- limit




VISIT

Try your hand at balancing a jungle ecosystem!

bit.ly/13IKVG5






ACTIVITY: The critically endangered Riverine Rabbit

INSTRUCTIONS:

1. Study the diagram that shows the threats to the Riverine Rabbit.



VISIT

Learn more about the
Riverine Rabbit
bit.ly/178sJUW

1. Explain the different limiting factors on the population growth of the Riverine Rabbit using the information in the diagram.

The main goal of any species is to reproduce and ensure the survival of the species. Factors beyond the control of the species often influence this and limit the growth of the population, as with the Riverine Rabbit. These disruptions cause an imbalance in the ecosystem and can affect the organisms that live there as well as the ecosystem as a whole.

Factors that disrupt a balanced ecosystem

We can group these factors as:

1. natural factors; and
2. human factors.

We have already discussed this in some detail, but let's take a closer look.

Natural factors

Natural disasters like floods or hurricanes can cause severe disruptions to ecosystems, but the ecosystems recover eventually. If the change occurs over long periods, like climate change and global warming, the damage may not be reversible. For example, there are many different theories about why the dinosaurs become **extinct**. One of the main theories is a sudden change in climate. This sudden change, whether it was due to a meteor striking earth or not, disrupted the balance in the ecosystems. It was to such an extent that all the dinosaurs died out.



A sudden natural disaster, such as flooding, can disrupt an ecosystem.



ACTIVITY: Assessing the impacts of a natural disaster

In the 1980s a devastating drought and famine raged in Ethiopia and caused the death of 400 000 people. Many animals, plants and microorganisms also died and species that depend on water for their reproductive cycle, like amphibians, were particularly badly affected.



The dry landscape in Ethiopia.



People trying to collect water.

QUESTIONS:

1. What is a drought?

2. What is a famine?

3. How do you think a drought and famine in a particular area, such as in Ethiopia are linked?

4. A famine is often accompanied by the spread of diseases amongst animals and humans. Why do you think this is so?

5. Do you think the effects of a drought and famine on an ecosystem are reversible or irreversible? Give a reason for your answer.



Human factors

Many years ago, people like the San had little impact on their environment, as they lived in harmony with the land and only took what food they could carry. Modern man has, however, had a huge effect on nature. We clear land to build cities, roads and farms, we pollute the environment and produce waste and litter. Humans also poach endangered animals and over-harvest marine animals, causing lasting damage to ecosystems.

ACTIVITY: Poaching in Southern Africa

INSTRUCTIONS:

1. Read the following newspaper article.
2. Answer the questions that follow.

Hunting and bushmeat - the road to extinction

19 October 2012

Illegal hunting (poaching) of animals and the killing of wild animals for 'bush meat' in many parts of Southern Africa is of serious concern to environmentalists and is driving some species close to extinction. Poor communities often rely on small wild animals they can trap for food, but removing too many of the smaller animals could force the carnivores (like lions, leopards and wild dogs) that eat them to turn to domestic animals like sheep or cattle for food. For this reason, farmers may go out and shoot even more of them. The carnivores themselves sometimes get caught in the traps. Although hunting and finding bushmeat have been traditional ways of getting food for many generations, the current 'over-hunting' is causing concern. Dr Rene Czudec of FAO commented: "There is an urgent need to look for solutions to ensure the sustainable use of SA's wildlife, while still helping to develop poor communities"

QUESTIONS:

1. After reading this article, explain what you think bushmeat is.

2. How did the hunting of the San differ from today's removal of bush meat?
3. Why do you think there is a market for bushmeat (people who buy the bushmeat)?

4. Some people from local communities that live on the edge of protected reserves, sneak into the reserves and illegally kill wildlife for food. Do you think this is justified? Discuss this with your class. What do you think some solutions to the problem could be?




5. What is poaching?

6. Why do you think poaching causes an imbalance in an ecosystem?

7. In the article, wildlife is poached for the meat to be sold as food. What two other animals that are poached in southern African game reserves and why are they poached?

8. Abalone (Perlemoen) are edible sea snails sold as a delicacy in Asia. Although they are farmed, many are removed illegally by divers, causing a serious decrease in their numbers.



A perlemoen in its natural environment.



Perlemoen served as a delicacy.

How do you think the illegal poaching of perlemoen is affecting our marine ecosystems?

9. In the northern provinces in South Africa, Mopani worms are a traditional source of high protein seasonal food found in the area. But, they have also become a favourite of tourists and visitors of the area. Each year, more and more are being eaten so that they are now hard to find. We say they are becoming locally extinct.



Describe the impact that this could have on the rest of the food chain or food web.




Another way in which humans have a huge impact on the environment and cause disruption to ecosystems is through pollution. There are many different types of pollution. Are you aware of the ways in which you are contributing to pollution?

ACTIVITY: Assess your impact on the environment

QUESTIONS:

1. There are different types of pollution, as listed below. For each one, discuss it with your partner and write a short description of the pollution, where it can come from.
 - a) Water pollution.

- b) Air pollution.



c) Land pollution and refills.

2. Assess your own life. Where have you perhaps contributed to the types of pollution mentioned above?

3. Brainstorm ways in which you can reduce each of these types of pollution.

4. Study the following posters made by a Gr. 8 class.



What do you think they are trying to encourage us to do? What is the message of the posters?



2.6 Adaptations

Organisms in ecosystems face competition, predation, parasitism and human influence, all of which could affect them negatively, forcing them to **adapt**, move away or die. It is well known that SA has undergone big climatic changes in the past. For example, the dry Karoo was once swampy and the Cango Caves in Oudtshoorn were once under water.



Rock formations inside the Cango Caves show that they were once under water.

What is adaptation?

When Southern Africa rose out of the sea millions of years ago, organisms that could not adapt to the new, drier **terrestrial environment** became extinct, but individuals that could adapt, survived and formed new populations. These adaptations could be changes in the organism's structure, function or behaviour over very long time periods. Only populations of organisms that happen to have suitable characteristics are able to survive in changing conditions within an environment. They are 'selected by nature' to survive. Those species that do not adapt will die out and become extinct.

As we have said, adaptation in species can occur in three main ways:

1. Structural: the physical characteristics of a species such as having long legs and strong muscles.
2. Functional: a species may have special way of carrying out its life processes such as being able to produce eggs with a hard shell, so that the embryos can grow and hatch even if the climate changes.
3. Behavioural: the species can have special behaviours that are instinctive (which they know by **instinct**) or can be learned such as making safe nests for protecting their babies

These changes take place over a long time period within a species and must be passed on from generation to generation. Over time and over many generations, these adaptations in the individual organisms will allow the species to evolve and adapt to its changing environment. Let's have a look at some of the adaptations of plants and animals.

Adaptations in animals

Animals have different adaptations which have enabled different species to live and function in different areas. Let's look at some of the animals that live in our country and how they have adapted to live in their environments.

NEW WORDS


- adapt
- camouflage
- hibernation
- instinct
- migration
- mimicry
- terrestrial environment



DID YOU KNOW?

Cango is a KhoiSan word and means 'Place of deep water'.





ACTIVITY: Distinguish between types of adaptations

INSTRUCTIONS:

1. We will work through different adaptations in South African animals that have enabled them to survive in the environment they live in.
2. In each of the examples, say whether you think it is a structural, functional or behavioural adaptation and give a reason for your choice.

QUESTIONS:

Record your work in the table below each set of animals.

1. **Aardvark:** It has a flexible, tubular tongue up to 30cm long as well as thick skin and short, powerful legs with strong claws for digging into termite mounds, its favourite food. These ants are then collected by the tongue - up to 50 000 in one night! It hides underground in daytime to escape heat and predators.



Two aardvarks in an enclosure.

How is the species adapted to life in its habitat?	
What type(s) of adaptation is this?	

2. **Desert beetles :**They have ridges on their backs for collecting mist in the Namib Desert at night. Long back legs tilt the body, so mist is collected, condenses and runs via channels and grooves into their mouths.



A desert beetle

How is the species adapted to life in its habitat?	
What type(s) of adaptation is this?	

3. **Gemsbok:** This striking antelope from the Kalahari Desert prefers grass and shrubs, but will dig for roots and tubers if it needs water. They save water by not sweating and sleep in the shade during the day. If they can not find shade, they turn the body's lightest side to the sun.




Gemsbok in the Kalahari

How is the species adapted to life in its habitat?	
What type(s) of adaptation is this?	

4. **Ostrich:** These are the biggest and heaviest birds, but they can't fly. To avoid predators, they fight with strong clawed toes or run away, up to 70km/hr! Ostriches swallow small stones to help digest any food they find. Male ostriches get red beaks in the mating season. The female lays eggs and she sits on them during the day, while the male incubates them at night - examine their colour differences to see why.



A female ostrich




A male ostrich



How is the species adapted to life in its habitat?	
What type(s) of adaptation is this?	

5. **Stick and leaf insect:** These insects look like leaves or sticks to avoid predators - this is called **mimicry**. They feed on plant materials at night and move very slowly to avoid being seen. Female stick insects can reproduce without mating.



A stick insect

How is it adapted to life in its habitat?	
What type(s) of adaptation is this?	





Other behavioural adaptations

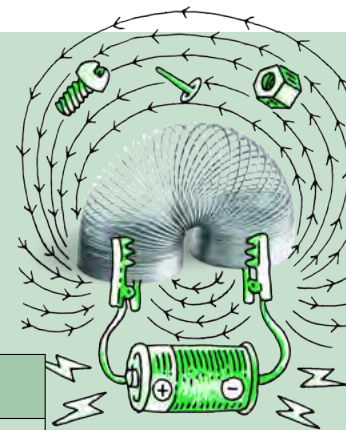
Many species of animals display an interesting behavioural adaptation called **migration**. This occurs when an animal or a group of animals move between different areas at different times or periods.

ACTIVITY: Why do animals migrate?

INSTRUCTIONS:

1. Have a look at the following animals.
2. Think of reasons why they would want to **migrate** from their present habitat.

Animals	Description	Reason to migrate
 <p>Wildebeest migrating in the Masai Mara.</p>	<p>Wildebeest migrate long distances each year which coincides with the pattern of rainfall and grass growth.</p>	
 <p>The sardine run as sardines migrate along the South African coastline.</p>	<p>The sardine run occurs along the African coast during May to July each year when billions of sardines migrate to the north east coast of South Africa.</p>	



VISIT
Watch underwater footage of the amazing sardine run that occurs each year from May to July
bit.ly/1cMMUMX



DID YOU KNOW?
Frogs have a special chemical in their bodies that prevents their blood from freezing completely - a kind of natural antifreeze!

Animals that don't migrate sometimes go into an inactive state called **hibernation** in winter. Some of them sleep through a whole winter, while some frogs hibernate by burrowing into the mud when the pond dries up, until the rains return.



Adaptations in plants

Several local plants are also adapted to their environment. The umbrella thorn in the African savannah can survive temperatures ranging from 50°C to below freezing. Its deep roots reach ground water easily and the small leaves prevent dehydration, while still being well exposed to light due to the umbrella shape of the tree. Why does it need light?



An umbrella thorn acacia.

The Baobab tree survives in dry areas, since it stores water in the thick trunk and spongy wood. The smooth bark reflects heat, making it cooler, but also helps protect the fruits from monkeys. How can it do this?



The sun setting behind a baobab tree.



This baoba is over 3000 years old! Take note of its width and the reflective bark.

The flowers smell like rotting meat to attract bats, flies and moths at night. Why do you think the baobab tree needs to attract these animals to its flowers?



A baobab flower which smells like rotting meat.

We are now going to look at some very unique plants, which are only found in South Africa.

ACTIVITY: Living stones

INSTRUCTIONS:

1. Study the following photographs. They show different types of plants. These plants actually look like pebbles. They are from the genus *Lithops* and they succulent plants, meaning they have parts that can store water.
2. Answer the questions which follow.



Lithops plants growing in dry rocky ground.



Different patterned Lithops plants.



A very camouflaged Lithops plant. Can you see it?



A flowering Lithops.

QUESTIONS:

1. Why do you think these plants are commonly referred to as 'living stones' or 'pebble plants'?

2. Why do you think the plants have such different patterns on their surfaces? How does this help them to survive in their environment?



TAKE NOTE

The name '*Lithops*' comes from two Ancient Greek words *lithos* meaning 'stone' and *ops* meaning 'face'. So, *Lithops* means 'stone-faced'!



-
3. *Lithops* plants are classified as succulents. What does this mean? What type of environment are succulents adapted to live in?
-
-

4. *Lithops* leaves are fleshy and mainly underground, and the stem is short. Flowers grow between the leaves, which shrink to below ground level during drought. How does this help the plant survive?
-
-

5. If the leaves are reddish-brown and mainly underground, where is the chlorophyll? Examine these dug-up stone plants.



The upper surfaces of Lithops plants.




The underneath surfaces of the Lithops plants.

Where is most of the green part of the plant located?.

6. This is a thin section of a stone plant under a hand lens. Draw a diagram of it and label the top of the leaves, the split between the leaves and the stem. Indicate where the soil level would be. What is stored in the clear area of the leaves?



A cross section of a Lithops plant viewed under a microscope.



7. The upper patterned surface acts as a window. Can you see the clear, fleshy middle parts of the leaves? Do you think light can travel through this? How does this allow the plant to photosynthesise?

2.7 Conservation of the ecosystem


Our country is one of the most naturally diverse in the world. This means that we have many different species and habitats and ecosystems here, more than most other places in the world.

Our country's natural beauty and diversity attract thousands of tourists each year, but it is under severe threat from poaching, pollution and other human influence. Ecosystems are able to naturally recycle materials like water, carbon dioxide and other gases and the remains of organisms, if they are left alone. But ecosystems cannot do this effectively if we interfere. These human interferences include:

- Habitat destruction like deforestation and burning
- Pollution causing global warming
- Alien invasive plants taking over ecosystems
- Hunting, poaching and other killing of wildlife

These pressures have caused great loss in biodiversity. Some ecosystems are under strain and others have already collapsed. There are many reasons why it is important for humans to care about the environment. As we have learnt, everything in an ecosystem is connected. Therefore harming one component of the ecosystem will have a ripple effect that can damage all the other systems.





ACTIVITY: Finding solutions to environmental problems

INSTRUCTIONS:

1. The following table is a list of environmental issues.
2. Do some research on air pollution, water pollution, landfills and climate change.

INSTRUCTIONS:

1. Write down the effect (consequence) of this issue on the ecosystem (or on humans). Write down a possible solution or a simple action that you can take to help.

Environmental Issue	Consequence	Action
Inappropriate waste disposal: Air pollution		
Inappropriate waste disposal: Water pollution		
Inappropriate waste disposal: Landfills and littering		
Carbon emissions and climate change		



Some people and organisations like Greenpeace, fight for environmental conservation. There may be groups in your local area that also promote environmental conservation - do not think that you can not make a difference if you are just one person!



The Greenpeace ship, Arctic Sunrise, which is used for environmental awareness campaigns and research.


ACTIVITY: Why should we care?

INSTRUCTIONS:

1. Divide the class into two teams. One group supports environmental conservation and the other believes we should use all earth's resources as we like.
2. Both groups must research their topics beforehand and gather relevant points.
3. The teacher can lead the debate and ensure it proceeds in an orderly way.

QUESTIONS:

1. After the debate, write down 3 points about each viewpoint that you can remember.



VISIT

Learn about actions that you can take at home to help the environment. YOU can make a difference

bit.ly/1euLiFN



There are all ordinary people who feel passionate about saving the only world we have. It takes the combined work of many concerned people to maintain healthy ecosystems - you can also make a difference!

ACTIVITY: Individuals who make a difference

INSTRUCTIONS:

1. Below are some photos of various individuals who have contributed to environmental conservation and awareness in some way.
2. Research what each individual has done.
3. Then, chose one who you find most inspiring and write about them, identifying what is is you admire.
4. You do not have to stick to the people who have been identified here. You can write about someone else too who you have identified with.
5. Lastly, reflect on how you can make a difference in your own life and what you could do to conserve you own local environment. Write about this too.






Sir David Attenborough



Jane Goodall



Jacques Cousteau



Al Gore

VISIT

Your photos can help scientists to map where mammals are in South Africa and help guide their conservation efforts

bit.ly/110zgEI



Some other people to research include:

- Wangari Mathai
- Lawrence Anthony
- Steve Irwin
- Diane Wilson
- Dian Fossey
- Ian Player

VISIT

A short tribute film on
Wangari Mathai.

bit.ly/110zjAb



SUMMARY:

Key Concepts

Ecosystems

- Ecology is the study of interactions of organisms with one another and with the physical and chemical environment.
- The study of ecological interactions is conducted at four levels:
 - populations
 - communities
 - ecosystems
 - biosphere(s)
- All ecosystems combined make up the biosphere.
- An ecosystem consists of a community that includes all living organisms (biotic) such as plants and animals, together with the non-living (abiotic) environment and climatic conditions such as temperature, air and wind, water, interacting as a system.
- An ecosystem can refer to a specific area on Earth or the entire biosphere can be regarded as one large ecosystem.
- The survival of populations and species depends on whether enough individuals are suited to the environmental conditions at the time. As conditions do change over time only those better suited to the changed environment will be able to continue the species. And so over time species adapt.

Feeding relationships

- Plants are *producers*. They make their own food.
- Animals are *consumers*. They obtain food from plants either directly (such as herbivores) or indirectly (such as carnivores).
- *Herbivores* feed on plants.
- *Carnivores* feed on other animals (living or dead). This group includes:
 - *Predators* hunt other animals, their *prey*, for example lions and leopards.
 - *Scavengers* that eat dead animals, for example hyenas and vultures.
 - *Insectivores* that eat insects and other small invertebrates such as worms
- *Omnivores* feed on plants and animals. Humans are generally omnivores.

- *Decomposers* break down (decompose) the remains of dead plants and animals. They recycle important nutrients in the environment.

Energy flow: food chains and food webs

- Plants and some algae play a very important role in the ecosystem because they capture the radiant energy from the Sun and use it in the process of photosynthesis to produce glucose that the plant and other animals can use to gain energy.
- This energy is passed along a food chain from producers to consumers; decomposers are the last link in this transfer of energy. They release energy as heat to the environment.
- Each stage of a food chain is called a *trophic level*.
- Energy transfer and energy loss occur at each trophic level.
- Interlinked food chains together form food webs.

Balance in an ecosystem

- An ecosystem can only accommodate as many organisms as its resources (food, water and shelter) can carry.
- The balance can be disturbed by natural or human factors:
 - natural factors include extreme changes in patterns of weather and climate, such as floods, drought, extreme and sudden changes in temperature.
 - human factors include removing organisms from the ecosystem (such as poaching), human-induced pollution.
- These factors can contribute to an imbalance in an ecosystem, seriously impacting on its components and altering its nature.

Adaptations

- Adaptation is the change in the structural, functional or behavioural characteristics of a species over many generations.
- Adaptation allows the species to survive as it adapts to changing conditions within the environment.
- Species and populations of organisms that are unable to adapt to changes in the environment will die out and become extinct.

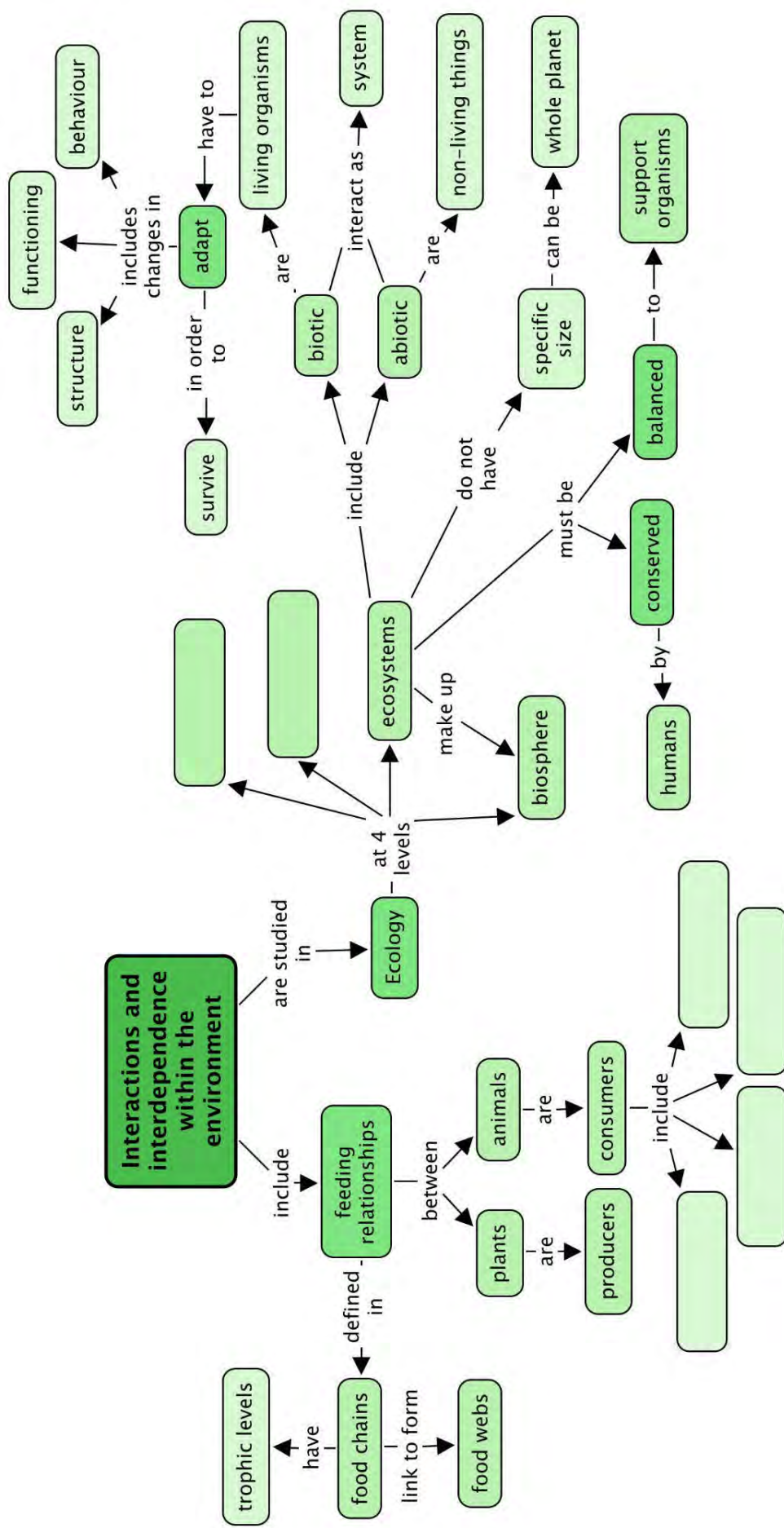
Conservations of ecosystems


- People can work towards managing and sustaining natural ecosystems.
- Individuals can contribute to conservation in various ways such as appropriate waste disposal (including recycling and reusing).

Concept Map

This concept map shows how the concepts in this chapter on the 'Interactions and interdependence within the environment' link together. Complete the concept map by filling in the 2 levels which are missing for the study of ecology. Also, fill in the 4 types of consumers that you have learned about in this chapter.

Can you see how the arrows show the direction in which you must 'read' the concept map?





REVISION:

1. Match the columns in the following table to link the description to the term. Write your answers on the lines below. [9 marks]

1. Producer	A. Organisms that eat other organisms to obtain food
2. Carnivore	B. Feeds on plants and animals
3. Consumer	C. Organisms that make their own food.
4. Omnivore	D. Organisms that eat only plant material
5. Predator	E. A carnivore that eats dead animals
6. Decomposer	F. An organism which feeds on other animals (living or dead)
7. Insectivore	G. An organism that breaks down the remains of dead plants and animals
8. Scavenger	H. A carnivore that hunts other animals
9. Herbivore	I. A carnivore that eats mainly insects and other small invertebrates

2. Distinguish between abiotic and biotic factors in the environment. [4 marks]


-
-
-
3. There are different levels of ecological organisation between an individual organism and the biosphere of the Earth. List and describe the levels in between the two mentioned here. [6 marks]

-
-
-
-
-
-
-
4. Discuss the different types of interaction that exists between species. [9 marks]

-
-
-
-
-
-
-
5. Explain what the different trophic levels represent in an ecosystem and why we can represent the levels as a pyramid with the bottom layer being the largest. [8 marks]
-
-
-
-
-
-
-

6. Evaluate this statement: *An insectivore is a carnivore.* [2 marks]

7. Identify the following in this food web. [7 marks]



a) Producers:

b) Primary consumers:

c) Secondary consumers:

d) Scavengers:

e) Decomposers:

8. There are more zebra than cheetah in this balanced ecosystem. Explain why this is so. [3 marks]

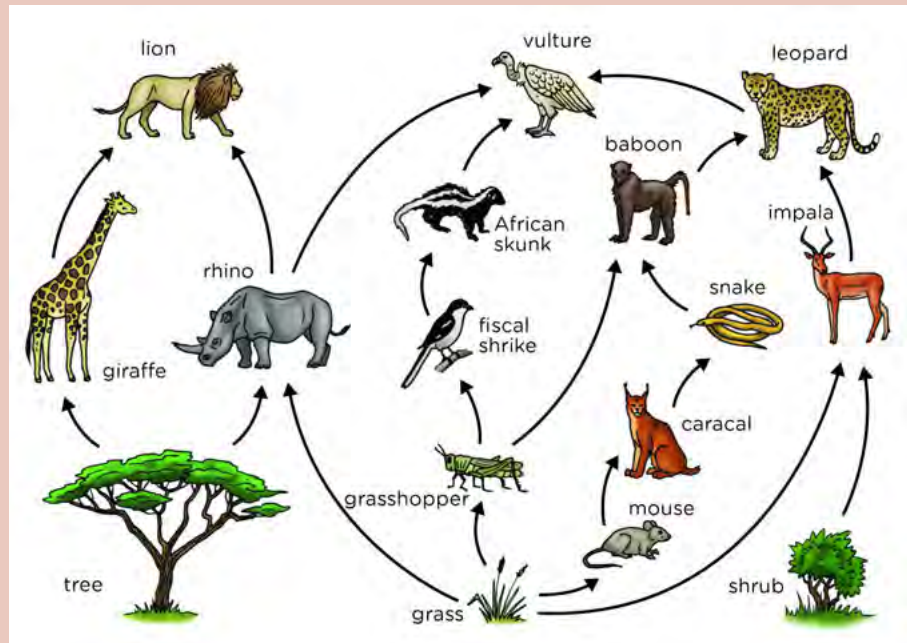
9. Describe the work of the producers in this ecosystem. [2 marks]

10. Based on this picture, evaluate how active the decomposers are in this environment. [2 marks]

11. What do you think would happen to this ecosystem if all the zebra got a disease and died? [2 marks]


12. What do you think would happen to this ecosystem in the short term and in the long term if a big fire came through and burned most of the grass and some of the trees? [2 marks]




13. The following food web shows the feeding relationships between organisms in another savanna ecosystem.



Use this food web to write down three food chains. [6 marks]

14. Describe how the different organisms in the table below are adapted to live in their specific environments. [4 X 3 marks = 12 marks]

Organism	Adaptations
 <p>A leopard</p>	

Organism	Adaptations
 <p>A whale</p>	
 <p>A Venus Flytrap</p>	
 <p>A dung beetle</p>	

15. Read this paragraph about the Quiver tree of the Kalahari and Namib desert.

The Quiver tree lives in the Namib and Kalahari deserts, where the heat and lack of water makes it extremely difficult for plants to grow and survive. It stores its water inside green succulent leaves and bloated branches. The San used to hollow out the branches and use them for their quivers, which is where the tree gets its name from. The branches are covered with a white powder that reflects the heat and the leaves have very few pores to minimise water loss through evaporation. During extremely harsh weather conditions, the tree can amputate (remove) its own branches and reduce the leaves to minimise water loss even further, then when the conditions improve, it sends out new shoots and grows a rich leafy top again.



How is this species adapted to life in its habitat? [4 marks]

16. A group of poachers recently made the following statement when they were arrested: *"Why is it so important to conserve the biodiversity and the environment? Surely there are enough wild animals and plants that it doesn't matter if some of them die and become extinct?"* Write 3 - 4 sentences to explain to them why we need to care about the biodiversity in our country. [6 marks]

Total [84 marks]



Curious? Use your imagination and show what this key can be.





KEY QUESTIONS:

- What are microorganisms?
- Why do we need microorganisms on Earth?
- Are there microorganisms living in my body?
- How do we study microorganisms?
- What causes your body to get sick?
- Are microorganisms of any use to us?

Microorganisms have been on Earth for billions of years and have adapted to live in extreme conditions. They are found in almost all areas of the Earth's biosphere and new microorganisms are still being discovered all the time. Some can be harmful, causing disease and illnesses, while others are useful to us and are a vital part of ecosystems. Let's take a closer look!

3.1 Types of microorganisms

Microorganisms are extremely small living organisms. People did not even know they existed until the invention of microscopes in the 1600s!

We say that we cannot see microorganisms with the 'naked eye' because they are too tiny to view without the aid of magnification. We have to view them under a microscope.




A basic light microscope.

Antonie van Leeuwenhoek designed and built his own microscopes. In 1674 he became the first person to see and describe microscopic organisms like **bacteria**, yeast and many other microorganisms.



Antonie van Leeuwenhoek is considered to be the first microbiologist.



Some of the microorganisms which van Leeuwenhoek observed and first described. He called them 'animalcules'.

NEW WORDS

- bacteria
- disease
- fungi
- infect
- protist
- virus

TAKE NOTE

Someone who studies microorganisms is a microbiologist.

ACTIVITY: What does 'microscopic' mean?

MATERIALS:

- hand lens or magnifying glass
- newspaper print
- other small objects with detail



INSTRUCTIONS:

1. Your teachers will provide you with a range of different objects to view.
2. First observe the objects with your naked eye.
3. Then use the hand lens to view the objects again.
4. Take note of the differences in the detail you can observe.

QUESTIONS:


1. What do we mean by the term 'naked eye'?

2. Describe some of the differences when you viewed the objects using just your eyes and when you used a hand lens.

3. The following images show different views of the same object. One image shows what we would see with our naked eye. We call this the **macroscopic** view. The other photo shows what we would see if we viewed the object under a microscope. This is called the **microscopic** view.


For each object, identify which is the microscopic view and which is the macroscopic view.

a) **Beetle**

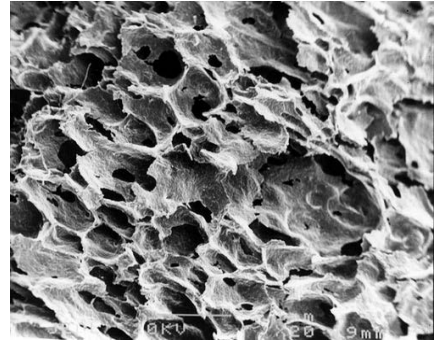


TAKE NOTE

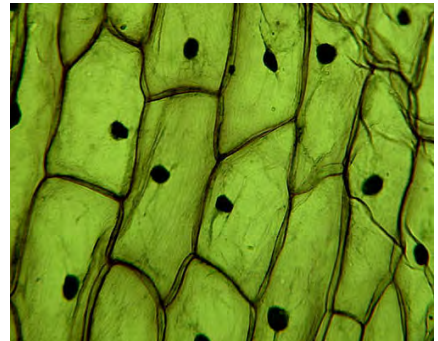
The prefix 'micro' comes from the Greek word *mikros* meaning small. How many words can you think of which contain the prefix micro? What do they all have in common?



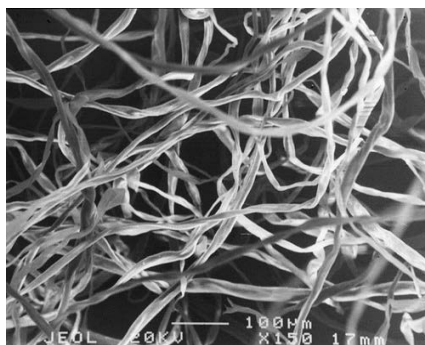
b) **White bread**



c) **Onion skin**



d) **Cotton**



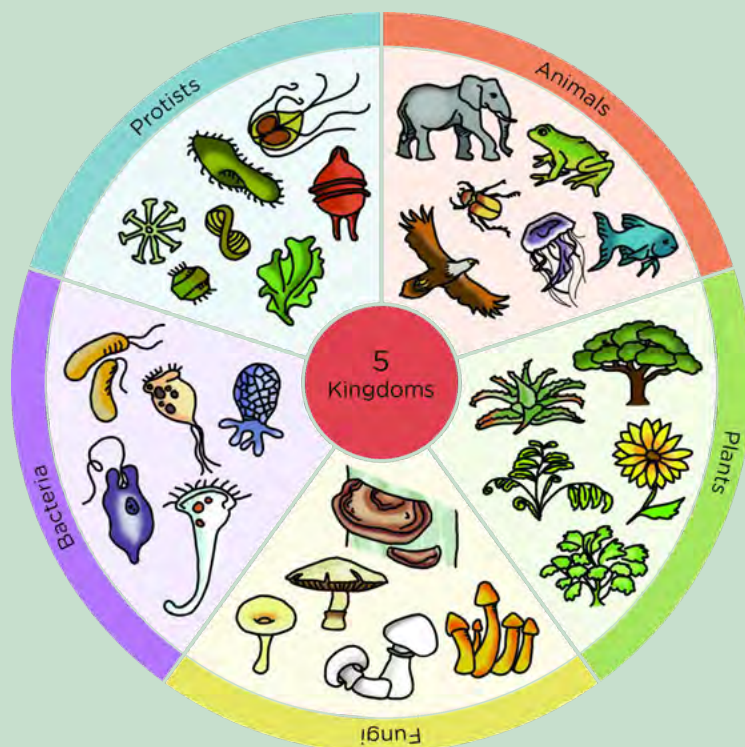

In the last activity we saw that you can view objects under a microscope allowing you to see much more detail than if you just viewed them with your naked eyes. There are many organisms on Earth however, which we cannot see at all with our naked eye. We can only see them when we look under a microscope. These are **microorganisms**.

ACTIVITY: Classifying organisms

The living organisms on Earth can be grouped in many ways. You have learnt about classification before. Let's revise our classification system for all organisms on Earth.

INSTRUCTIONS:

1. Study the following diagram showing how we classify organisms on Earth.
2. Answer the questions that follow.



QUESTIONS:


1. Do you see that the organisms in the diagram are divided into five groups? What do we call these five groups?

2. Which groups do you think contain organisms which can be classified as microorganisms?

3. Do you think microorganisms are living or non-living? Give a reason for your answer.

TAKE NOTE

Bacterium is singular and bacteria is plural.




Microorganisms include **viruses**, bacteria, **protists** and some types of **fungi** (although many fungi can be seen without the use of a microscope). Let's have a closer look at the different types of microorganisms, before looking at how they can impact our lives in a positive or negative way.

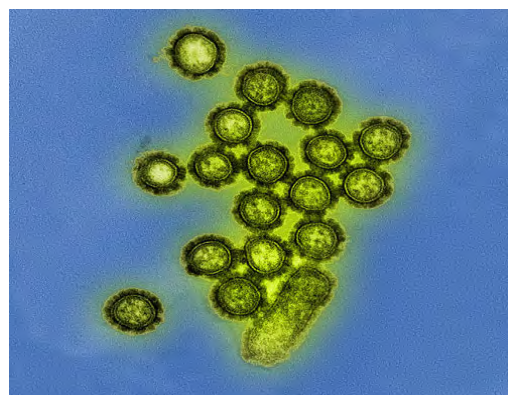
Bacteria are a large kingdom of microorganisms. Many bacteria are responsible for causing diseases in humans, however some are also useful as we will see later. Viruses are also tiny organisms, much smaller than bacteria even. They can **infect** all types of organisms, such as plants, animals and also bacteria. Viruses need to infect other organisms in order to replicate (reproduce).

DID YOU KNOW?

There is much debate amongst scientists about whether we can classify viruses as living or not!



Mycobacterium tuberculosis bacteria which cause Tuberculosis (TB) in people.



H1N1 influenza virus particles which cause flu symptoms in people.

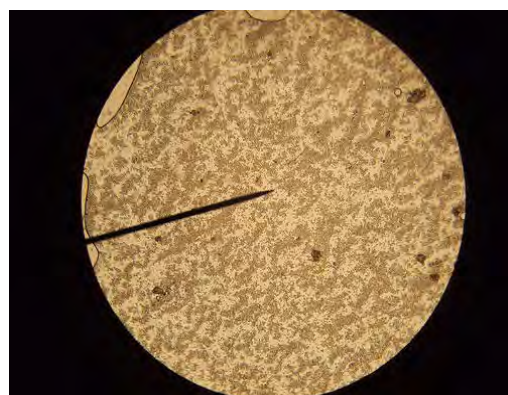
Fungi are also one of the five kingdoms of organisms. Many different varieties of fungi exist. Some are large enough for us to see without the help of a microscope, like mushrooms and bread mould. They are macroscopic. There are others which are microscopic and can only be seen under a microscope, for example yeast.

VISIT

Watch how yeast reproduce
bit.ly/1cfthi7



Not all fungi are microscopic, such as mushrooms.



Millions of yeast cells viewed under the microscope.

Protists are a very diverse group of microorganisms. The organisms in this kingdom do not fit easily into any of the other four kingdoms, namely animals, plants, fungi or bacteria. However, some protists are plant-like and others are animal-like. Most protists are microscopic and live in water. The only macroscopic members are the algae or seaweeds.



A protists living in freshwater.

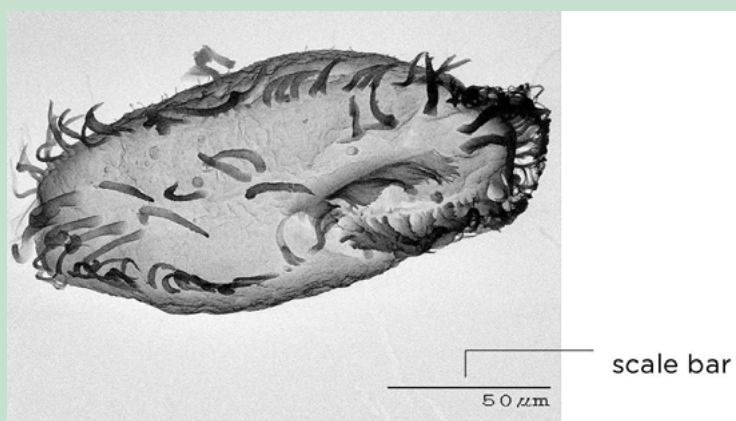


A protist found in the gut of many animals.


As you might have noticed from some of the microorganisms mentioned here, some of them can be harmful to humans and other organisms as they cause **diseases** and illnesses.

ACTIVITY: Calculating the size of an organism using a scale bar

How do you know the size of a microorganism? You will notice that many pictures of microorganisms have a **scale bar**. A scale bar is a very useful tool that allows us to calculate the actual size of objects. Follow the instructions below to figure out the length of this *Oxytricha trifallax* protist.



*A micrograph of *Oxytricha trifallax*.*



INSTRUCTIONS:

1. Measure the length of *Oxytricha trifallax* using your ruler. (Express your answer in mm.)

2. Measure the length of the scale bar with your ruler. (Express your answer in mm.)

3. Divide the size of the object (in mm) by the size of the scale bar (in mm) and round off. Your answer will be a ratio and will not have units, since you divided mm by mm.

4. To find the actual size of the organisms, take your answer and multiply it by the number on the scale bar. The units on the scale bar are in μm and so your answer must be in μm . How big is *Oxytricha trifallax*?

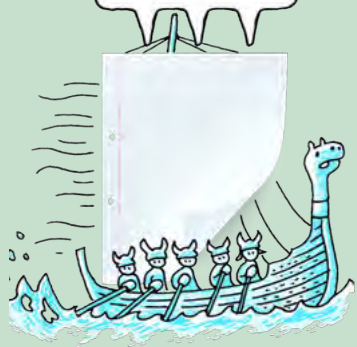
5. How many μm are there in a mm?

6. How many *Oxytricha trifallax* could lie end to end in 1 mm?

7. Using the same method you practised before, calculate the size of the following organisms:

TAKE NOTE

Scientists know what size to make the scale bar because they know what magnification they are using on their microscopes. You will learn about magnification, field of view and how to create your own scale bar if you continue with Life Sciences in Gr. 10.



a)



A Euglena



b)

A fossilised diatom.

3.2 Harmful microorganisms

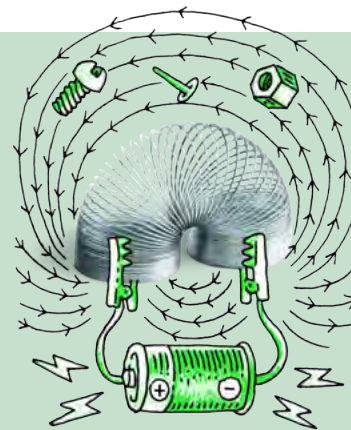
Some microorganisms cause diseases which may result in death. Microorganisms that cause diseases are called **pathogens**. These pathogens infect other organisms and cause various signs and symptoms in the organism.

ACTIVITY: Where are pathogens found?

We can come into contact with various dangerous microorganisms each and every day. This activity will help you identify some common places where harmful pathogens are found.

INSTRUCTIONS:

1. Discuss the question asked in the title of this activity with your group or class.
2. Use the following photos in your discussion.





A handrail.



Public pay phones.



A basin and toilet.



An ATM keypad.

TAKE NOTE

These diseases are called **infectious** diseases as they can be passed from one organisms to the next.



Rubbish.




Drains and pipes.

QUESTIONS:

1. What can you conclude about where disease-causing microorganisms are found?

2. How do you think diseases spread from one person to the next?



3. Find out what it means to 'sterilise' an object, and write your own definition.

Transmission of infectious diseases

We can come into contact with various dangerous microorganisms each and every day, whether it is when you open the door handle of a toilet or use a trolley at the shopping centre. Pathogens can spread between humans and other organisms in many different ways, for example:

1. **In droplets from the air that we breathe:** When an infected person sneezes or coughs, the pathogen travels in the drops of spit or mucus to another person.
2. **In untreated and contaminated water:** The pathogen is **transmitted** in **contaminated** water, especially if it has been in contact with human sewage. These diseases are called waterborne diseases, such as cholera and typhoid, and cause diarrhoea.
3. **In contaminated food:** Sometimes people prepare food without washing and disinfecting their hands properly and the food can become contaminated.
4. **Through cuts or wounds:** Many pathogens enter our bodies via cuts or wounds. For example, tetanus bacteria live in the soil and when someone hurts themselves on a piece of rusty metal, this pathogen can infect the person.
5. **Through bites from animals:** Some pathogens can spread via bites from infected animals. For example, the rabies virus from infected animals and malaria is transmitted to humans through mosquitoes.

One of the best ways to prevent the spread of harmful pathogens is by washing your hands regularly with soap and warm water.

NEW WORDS

- contaminate
- fever
- immune system
- pathogen
- transmitted



ACTIVITY: How easily do viruses spread?

We are going to have a look at how some viruses spread by acting it out.

MATERIALS:

- paper cups or beakers (one per learner)
- white vinegar (dilute)
- water
- dropper
- liquid indicator

INSTRUCTIONS:



1. Your teacher will divide your class into three groups: A, B and C.
2. Each group will be given specific instructions. You must obey the instruction that your teacher gives to your group for the activity.
3. After the activity, answer the questions.

QUESTIONS:

1. Which group had the most cups with red liquid? What does this mean?

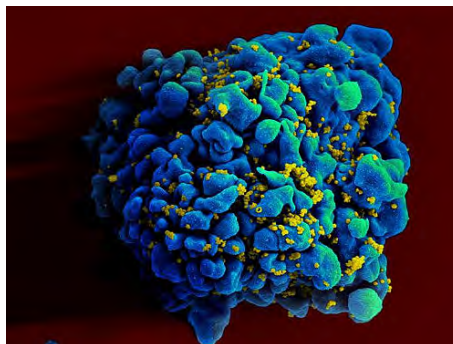
2. The activity that you just acted out can be used to describe the spread of one of the most devastating viruses in the world today, especially Southern Africa. Which virus is this?

3. How does this virus spread? What action did you do in the activity to represent this?

4. How can you prevent the spread of this virus? Discuss this with your class.



The Human Immunodeficiency Virus (HIV) is one of the most devastating viruses in our world today. The HI virus causes Acquired Immunodeficiency Syndrome (AIDS) in humans. It is a condition where the **immune system** starts to fail and is ultimately life-threatening. HIV infects white blood cells in the human immune system.



White blood cell (stained blue) infected with tiny HI viruses (stained yellow).

ACTIVITY: HIV Research


INSTRUCTIONS:

1. Below is a list of questions about HIV. You will be allocated a question to research.
2. Write your findings in the space provided and then you will report back to the class in a discussion.

QUESTIONS:

1. What organism causes HIV/AIDS?
2. What are the symptoms of the disease?
3. What are the dangers of having many sexual partners and unprotected sex?
4. How can the spread of the virus be prevented/minimised?
5. What is the current treatment for this condition?
6. How is mother-to-child infection prevented?
7. Why is pre- and post- natal treatment and monitoring important for pregnant mothers?

Write about what you found in the following space.




DID YOU KNOW?

South Africa is one of the world leaders in the treatment of HIV/AIDS and better ways of living with the syndrome are being developed all the time. You must continue to do your own reading about the latest developments.



As we saw, the spread of HIV can be prevented by abstinence and having protected sex. HIV can also spread if one uses an infected needle, for example. This is why it is very important that doctors always use sterilised needles and equipment in their practise. Other diseases spread in different ways.



ACTIVITY: Preventing the spread of diseases

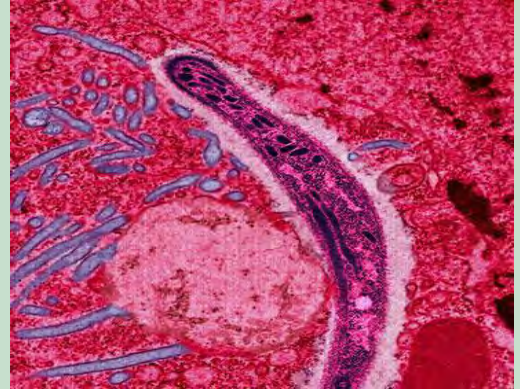
Malaria is a disease caused by a protist. The protist enters the human body via the bloodstream when an infected female Anopheles mosquito bites a person. The protist travels to the liver of the person and starts to reproduce. Malaria causes high fever and severe headaches, and can lead to a coma and death.

DID YOU KNOW?

The Anopheles mosquitoes that cause malaria have their abdomens pointing up, whereas normal mosquitoes have their abdomens pointing down?



The Anopheles mosquito which spreads the protist that causes malaria in humans.



The protist (purple) that causes malaria is moving through the gut of the mosquito in this image.

QUESTIONS:

1. Find out how the spread of malaria can be prevented. Write about this in the space below and what you should do if you are travelling to an area where there is a high risk of malaria.

VISIT

Watch what happens inside you when a mosquito bites.

bit.ly/11VNIzV

2. Airborne diseases such as tuberculosis (TB) caused by a bacteria, and influenza (flu) caused by a virus, can spread very easily. How do these disease spread and how can we reduce the transmission of these diseases?



ACTIVITY: Typhoid Mary

Typhoid is a disease caused by a bacterial infection. Some people can have these bacteria inside their bodies without realising it, and without ever getting ill from it. They are called 'carriers'. This was the case with Mary Mallon or Typhoid Mary who was a carrier of the disease.

INSTRUCTIONS:

1. Research typhoid. Find out what causes the disease and what its symptoms are, and find out about treatment.

2. Share your research with the class.
3. Read Mary's story below and then answer the questions that follow.

Typhoid Mary

Mary Mallon emigrated from Ireland to America at the age of 15. When she arrived she became a servant, and soon discovered a talent for cooking. Since the cook in households earned a higher salary, she was happy to change from a simple servant to this role. She worked in 8 households from 1900-1907 as the cook, leaving a trail of 51 people seriously ill with typhoid, one of whom, a small girl, died of the disease.

When she was eventually identified as the cause of the many illnesses, authorities at first tried to persuade her to volunteer samples of her faeces, blood and urine to be tested. She refused, although she did admit that she seldom washed her hands when working with food. She didn't think it was necessary.

Eventually, after putting up a tremendous fight, she was taken with the help of 5 policemen, to the nearby hospital where the samples were removed. These proved that she was in fact infected with typhoid although she was not sick at all. The authorities sent her to a small island near the city where she was kept away from others for fear of infecting them too. Apart from a short 'parole period', she remained on this island, in full health, until her death.



Mary Mallon, also known as 'Typhoid Mary', was a carrier of typhoid without knowing it.



QUESTIONS:

1. Why do you think the newspaper article from more than 100 years ago shows Mary breaking skulls into a frying pan?

2. Explain how you think the disease was most probably spread from Mary to the people in the home where she worked? Tip: We know that handwashing was not a common practice at this time.

3. Do you think Mary believed the accusations against her? What could have been her reasons for this?

4. Imagine being Mary and refusing to give authorities samples of your faeces, urine and blood. Why would you not want to give these?

5. Do you think authorities acted against Mary's basic human rights? Explain your answer.

6. If you were the doctor in charge of the investigation against Mary, how would you have acted in the same situation? Explain why you would have done this.

7. Discuss with your class possible alternative courses of action that we, as a society, can take when faced with such a dangerous microorganism that can potentially kill millions of people.



As we have seen, many microorganisms can be harmful and cause dangerous diseases around the world.

ACTIVITY: Research an infectious disease

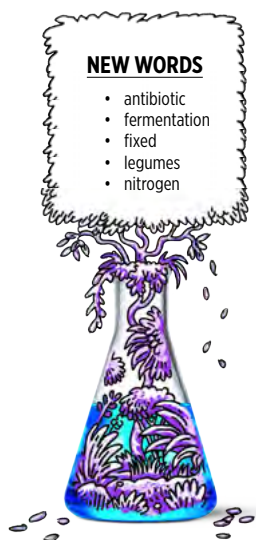
INSTRUCTIONS:

1. Your teacher will assign the following viruses, bacteria, protist or fungal diseases to different learners in the class.
2. Use sources from the library, the internet and interviews with healthcare professionals, to find out more the diseases. Remember to list your sources in a bibliography.
3. Write a report, prepare a poster or oral depending on your teacher's instruction on the disease.
4. You must include information on:
 - a) The causes of the disease
 - b) Symptoms of the disease
 - c) Treatment of the disease
 - d) How communities react to people with the disease



Diseases or illnesses caused by viruses	Diseases or illnesses caused by bacteria	Diseases from fungi and/or protist
chicken pox or shingles colds genital herpes infectious hepatitis influenza (flu) measles meningitis mumps pneumonia rabies rubella (German measles) smallpox yellow fever Marburg Virus Disease (MVD) poliomyelitis	anthrax bubonic plague cholera diphtheria some strains of dysentery gonorrhea leprosy mastitis meningitis pneumonia syphilis tetanus tuberculosis typhoid fever whooping cough	malaria African sleeping sickness giardiasis amoebic dysentery diarrhoea candidiasis ringworm athlete's foot

Many scientists around the world are continually doing research to find and develop cures or vaccinations for infectious diseases, as well as ways to prevent the spread and transmission.



Louis Pasteur (1822 - 1895), a famous French microbiologist.

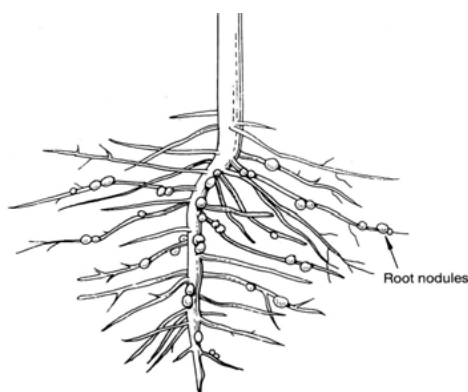
One of the most important scientists in medical microbiology was Louis Pasteur. He was a French chemist and microbiologist. He discovered a way to reduce death rate in many diseases and also created the first vaccines for rabies and anthrax.

Would you like to make a difference to the lives of people in the world? Perhaps you also want to contribute to the research going on to find cures for some of the devastating infectious diseases, such as HIV/AIDS? Or develop a vaccine against a certain strain of influenza? If so, find out what subjects you need to do in Gr. 10 and what and where you can study after school! Be curious and discover the possibilities!

3.3 Useful microorganisms

In Chapter 2 we looked at the interactions and interdependence of organisms within an ecosystem. Do you remember discussing food chains and decomposers? What was the role of decomposers in the environment?

Many decomposers are microorganisms. These microorganisms play a very important role in ecosystems as they break down dead plant and animal matter. They help to return the nutrients to the soil so that they are recycled. Some bacteria remove **nitrogen** (N_2) from the air and convert it to nitrogen compounds that animals and plants can use. In plants such as **legumes**, the roots actually contain nodules with the bacteria inside of them.

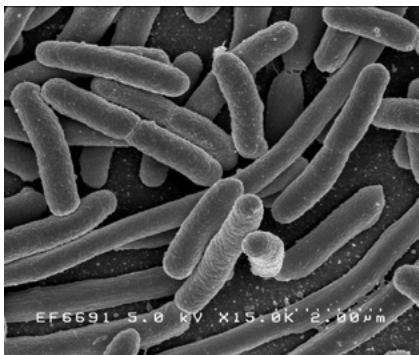


Nitrogen-fixing bacteria form root nodules in some plants, such as legumes.



Can you see the white root nodules on these roots, which contain Rhizobia bacteria?

These nitrogen-fixing bacteria, called Rhizobia, cannot live independently and need a plant host. The bacteria get glucose from the plant and the plant benefits by getting the nitrogen compounds which the bacteria **fixed** from the soil. What is this kind of symbiotic relationship called?



Escherichia coli bacteria found in the gut of many warm-blooded animals.

We also have bacteria which live inside of us and help the functioning of our bodies! *Escherichia coli* is found in the lower intestine of many warm-blooded animals. They are part of the natural flora of the gut. They can actually help the animal by producing vitamin K₂ and also help prevent other harmful bacteria from growing in the gut.

VISIT

An interesting article on a newly discovered species of microorganism that lives in symbiosis in the digestive tract of termites.

bit.ly/13m66dA



Humans have also found ways to use microorganisms to do things for us. This dates back throughout our history. Let's find out!

Microorganisms used by people

You might be surprised at how many of our day to day experiences are somehow due to microorganisms.

Have you ever seen the side of a yoghurt container which says it contains 'live cultures'? This refers to the bacteria inside the yoghurt. People use microorganisms for processing foods, such as when brewing beer, making wine, baking bread and pickling food. Microorganisms are also used in the **fermentation** process when producing dairy products, such as yoghurt and cheese.


Yeast is one of the microorganisms humans have used for food-processing. The most common uses of yeast are in producing alcoholic beverages, such as beer and wine, and in baking, as yeast is used to make dough rise.

Yeast grows under specific conditions. As it grows it uses sugar for energy and converts it into carbon dioxide and alcohol. This process is called fermentation. We can measure the amount of carbon dioxide that is produced to see how well the process works.

What are the best conditions for this to take place? Is there an optimal amount of sugar and what about the best temperature? These are all questions which curious people have asked over time! Let's do an investigation to find out.

TAKE NOTE

We will look more at fermentation next term in Matter and Materials when we do chemical reactions.



INVESTIGATION: Investigating the growth of yeast

You will conduct two separate investigations to determine the optimal conditions for yeast to grow.

- The first will measure what sugar concentrations are necessary for yeast to grow best. You will receive some guidance and help with this part.
- The second part will require that you set up your own investigation to determine at what temperature the yeast will grow best. You will be required to plan, conduct and collect data from the investigation on your own.

Part 1: Yeast growth in different sugar concentrations

AIM:

INVESTIGATIVE QUESTION:

HYPOTHESIS:

MATERIALS AND APPARATUS:


- 6 balloons
- 14 grams (2 packets) of dry yeast
- white sugar
- mass scale
- funnel
- 6 x 50 cm string
- 2 - 50 ml graduated cylinders
- 600 ml beaker
- overflow pan
- permanent markers
- ice packs

METHOD:

1. Work in groups of four.
2. Use the permanent marker to label each balloon A, B, C, D, E and F.
3. Each balloon will need to be filled with 2 g of yeast and a different quantity of sugar. Balloon A will need to get 2 g of sugar, B will get 3 g of sugar, C will get 4 g of sugar and so on. (See the table below.) Use a plastic spoon or spatula to place the yeast and sugar into the balloon.
4. Use a funnel and pour 50 ml lukewarm tap water into each balloon.
5. One person should hold the balloon and funnel while the other pours in the water.
6. As soon as the balloon has been filled, take a piece of string and tie off the balloon as close as possible to the level of the water without trapping any air.
7. Knot the balloon's rubber neck to ensure that no air can get in or water can get out.
8. Place each prepared balloon on ice to prevent the fermentation process from starting.
9. Before you allow the fermentation process to start, you need to determine the starting mass and volume of each balloon.

TAKE NOTE


There are different kinds of yeasts. The one we are using breaks down sugar in dough. Others break down wood and corn stalks and produce ethanol (alcohol) while another breaks down the sugar in fruits, nectar, molasses or sorghum.



10. **MASS:** Determine the mass of the tied balloon to the nearest 2 decimal places. Return it to the ice.
11. **VOLUME:** Use the water displacement method to determine the volume of the balloon.
 - a) Place water in a large jug level with the top of the jug.
 - b) Completely submerge the balloon under the water in the jug: push the balloon and allow the water to flow over the sides into the overflow pan. You should stop when your fingers touch the water.
 - c) The water in the overflow pan is therefore the volume of water that the balloon displaced.
 - d) Carefully measure the water in the overflow pan. Record your measurements in the table below.
 - e) Return the balloon to the ice as soon as possible.
12. **PREPARE FOAM COOLER BOX:** You are going to place the balloons inside a foam cooler box with warm water in (the box should keep the water warm). Pour 40 °C water into the cooler box (as it normally cools down quite quickly).
13. **FERMENTATION INCUBATION:** You are now ready to start the process of incubating the yeast.
 - a) Place each balloon into the warm water.
 - b) Record which balloons sink and which float.
 - c) Leave the balloons in the warm water for 20 - 30 minutes during which time the yeast will ferment the sugar.
 - d) Record the exact time that you used for incubation: _____ minutes.
14. **AFTER INCUBATION:** Use a paper towel to dry the balloons.
 - a) Determine the volume of each balloon.
 - b) Determine the mass of each balloon.

Tip: It is really important that you work fast and accurately at this point. Your team should really consider letting one pair determine the mass and the other the volume of each balloon.

15. Calculate what changes (if any) occurred during incubation to the mass and volume of each balloon.
16. Hang your balloon on a clothesline or hanger in the class to dry.
17. Clean up your work area and wash, dry and pack away all equipment that you used.
18. **THREE DAYS LATER:** remove your balloons from the clothes line / hanger. Record all observations that you can make - remember to use ALL your senses.
19. Use the same methods to determine the mass and volume of each balloon and record this on the table.
20. AFTER measuring the mass and volume of each balloon, carefully cut it open. Make careful notes to describe your observations of the contents of each balloon.
21. Use your table of measurements to draw a graph.




RESULTS AND OBSERVATIONS:

Complete the table with the correct information obtained from your work.

Balloon	Yeast (g)	Sugar (g)	Balloon mass before fermentation (g)	Balloon volume before fermentation (g)	Sink/Float	Balloon volume after fermentation (g)	Balloon mass after fermentation (g)
A	2	2					
B	2	3					
C	2	4					
D	2						
E	2						
F	2						

ANALYSIS:

Present the data you collected on a graph in the space below.



QUESTIONS:

1. Describe the changes that you observed happening in your balloons from the start to the end of the incubation period.

2. Were the changes the same in each balloon?

3. Explain why you think these changes occurred differently in the contents of each of your balloons.

4. How did you expect the balloons to react after 3 days?

5. Describe how each of the balloons actually looked after the 3 days.

6. Provide a possible explanation for your observations. Think for instance of what could possibly have been lost from the balloons.

7. At the start you added yeast, sugar granules and water. Describe how the contents of each of the balloons looked at the end of the investigation.

CONCLUSION:

1. What did you learn from doing this investigation?

Part 2: Yeast growth at different temperatures

Conduct this investigation again, but this time you need to find out the best temperature for yeast growth. A suggestion is to use 10 ml of sugar for each of the balloons and 7 g of instant yeast (or 2 teaspoons of sugar and 1 teaspoon of yeast). Why do you need to add the same amount of yeast and sugar to all containers? You will need to change the temperature of the water however to measure the optimum temperature for yeast to ferment.

Write an experimental report, using the headings of AIM, HYPOTHESIS, MATERIALS, METHOD, RESULTS AND OBSERVATIONS, DISCUSSION and CONCLUSION.


Remember to evaluate your results and discuss any difficulties you might have had or ways to improve your experimental design. In your discussion, you will also need to do some extra research about the applications of this process and include this information. Do not forget to reference your sources in a bibliography at the end.



Besides the use of microorganisms in food and food-making processes, there are also other processes for which we use microorganisms. Specific microorganisms are used in water treatment, like when treating sewage on a large scale.

In biotechnology research, microorganisms are being used to produce alternative, renewable energy, for example, biogas and biofuels.

Microorganisms are used in the development of various medicines, for example, **antibiotics**. Penicillin is a group of antibiotics which come from *Penicillium* fungi. The discovery of penicillin and its uses to treat certain bacterial infections happened by chance. This was due to the curiosity of a scientist, Alexander Fleming, and this led to the discovery of many more antibiotics.



Sir Alexander Fleming, who discovered penicillin in 1928.

Microorganisms are also used in many fields of science and medical research. Scientists use yeast to learn more about many other types of organisms. The use of viruses is also currently being explored in many universities around the world to actually help with cures for various conditions, even cancer! The possibilities for discovery are endless!

ACTIVITY: Careers as a natural scientist

INSTRUCTIONS:

1. Examine the list of careers below and select one career that interests you.

Agronomist	Farmer	Botanist	Zoologist	Food Scientist
Ecologist	Veterinarian	Microbiologist	Gameranger	Nature conservationist
Doctor	Nurse	Entomologist	Geneticist	Environmental Scientist

2. Do some research about the career you have selected.
3. Pretend it is 14 years in the future and you are about to attend your 10-year high school reunion!
4. Break into groups and have a discussion as 28-30 year-olds!
5. Use the questions below to guide your discussions.

QUESTIONS

1. What subjects did you take in Gr. 10?


2. Which university did you go to? What did you study?

3. Where do you live?

4. What does your "typical day" involve?

5. What is the best part of you job?

6. What is the worst part of your job?





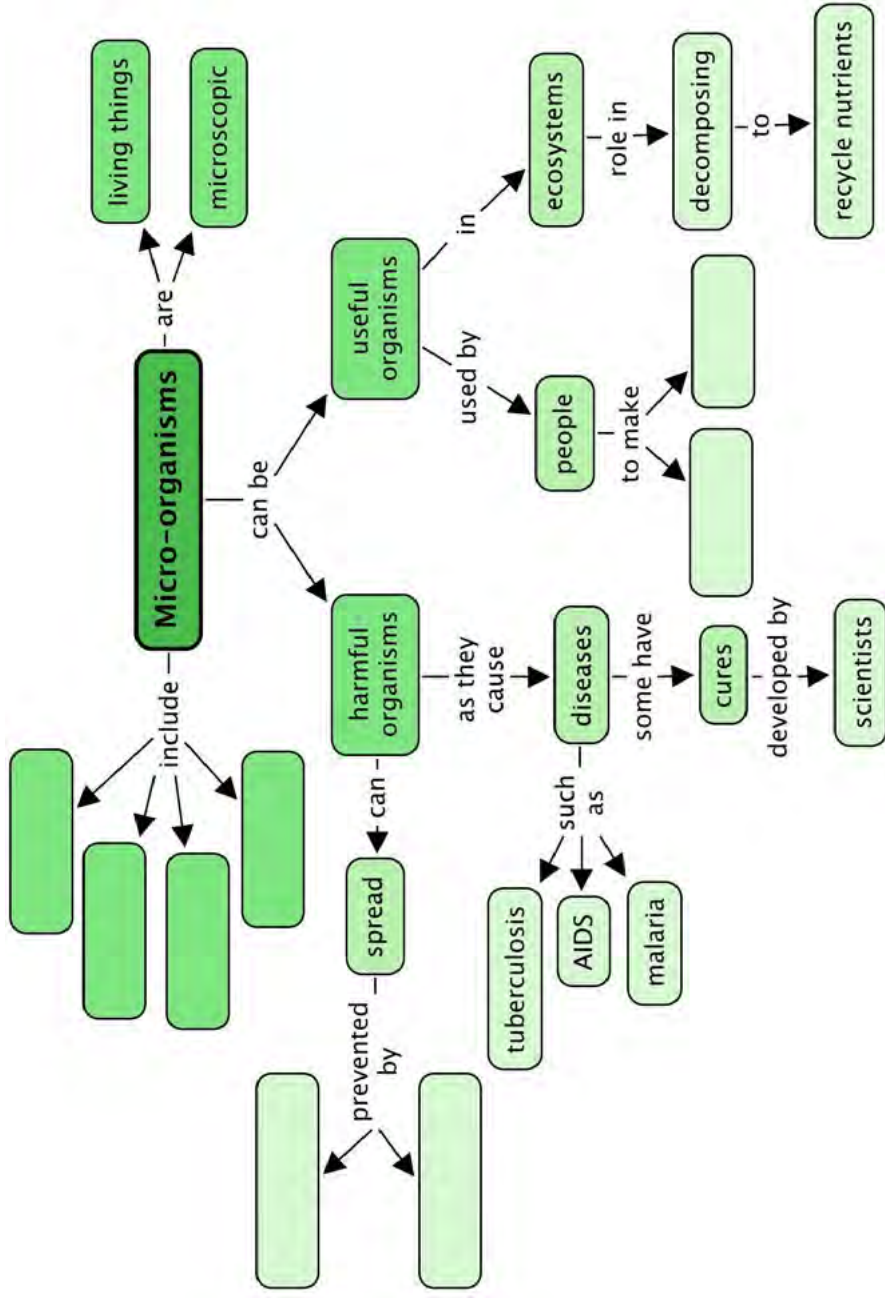
SUMMARY:


Key Concepts

- Microorganisms are living things.
 - They are too small to see with the naked eye and can only be seen under a microscope.
 - There is a variety of microorganisms, including viruses, bacteria, protists and fungi.
 - Microorganisms can be harmful or useful.
-
- **Harmful microorganisms:**
 - Harmful microorganisms causes disease such as TB, HIV, malaria and food poisoning.
 - Disease-causing organisms are found almost everywhere - ATMs, handrails, toilets, etc.
 - Waterborne diseases such as cholera and dysentery cause diarrhoea resulting in many childhood deaths.
 - Effective methods of preventing the spread of diseases caused by microorganisms including washing hands and sterilising equipment and utensils.
 - Modern scientists such as Louis Pasteur play an important role in identifying and developing cures for some diseases.
 - **Useful microorganisms:**
 - Some microorganisms play an essential role in ecosystems, such as decomposing dead plant and animal matter, thereby recycling nutrients in the soil.
 - Some microorganisms are used by people for making certain foods (like yoghurt and bread) and medicines (like penicillin)

Concept Map

This concept map shows all that we have learnt about Microorganisms in this chapter. What types of microorganisms are there? Fill these into the 4 spaces below. How can we prevent the spread of harmful microorganisms? Fill in 2 of these actions in the spaces provided. In this chapter we learnt about useful microorganisms - what are two products we make using microorganisms? Fill these in.





REVISION:

1. Explain in your own words why a microorganism is said to be 'microscopic'. [2 marks]

2. Which groups of organisms are always microscopic? [3 marks]

3. Which kingdom contains organisms which can be microscopic or macroscopic? [1 mark]

4. Name 3 foods that are made using microorganisms. [3 marks]

5. Draw a cartoon to show how someone in a shopping centre could possibly be contaminated by a virus or bacteria. [5 marks]

6. More people seem to catch colds and the flu in winter than in summer. Explain a possible reason(s) for this. Hint: think of the different ways in which people behave in winter.) [2 marks]

7. Describe how someone would typically contract a waterborne virus. [2 marks]

8. Why do you think certain diseases such as malaria, typhoid and cholera, are more serious and cause more deaths in third-world countries in Africa, especially in children, compared to first-world countries? [4 marks]

9. List 3 important ways that we can prevent the spread of diseases. [3 marks]

10. Describe the optimal conditions necessary for yeast to grow. [2 marks]

Total [26 marks]





GLOSSARY

abiotic:	non-living; devoid of life
adapt:	to change, become adjusted to new conditions
antibiotic:	a compound, often produced by microorganisms, which kills or slows down the growth of bacteria
bacteria:	microscopic organisms, lacking a nucleus; they can inhabit many different environments (air, water, soil, the bodies of other organisms etc.)
biosphere:	the regions of the surface and atmosphere of the Earth where different organisms live
biotic:	relating to living organisms
camouflage:	an adaptation in which an animal can hide by blending in with its surroundings
carnivore:	an animal that feeds on other animals
chemical potential energy:	stored energy in the form of chemical compounds
chlorophyll:	a green pigment found in green plants (and certain bacteria) that absorbs radiant energy from the Sun to provide energy for photosynthesis
chloroplast:	a part inside the plant cell of green plants that contains chlorophyll, where photosynthesis occurs
community:	all the animals, plants or microorganisms that live together and interact in a certain area at a specific time
consumer:	an organism that cannot produce its own food and therefore has to eat other organisms; also called a heterotroph; e.g. all animals, fungi
contaminate:	unwanted or waste material enters a place where it does not belong e.g. sewage entering a river, bacteria entering a wound
decomposers:	organisms that decompose (break down) organic material, including the remains of dead plant and animal material; usually bacteria or fungi
disease:	an abnormal condition (or sickness) of an organism that interrupts the normal functioning; often includes pain, weakness and other symptoms
ecologist:	a scientist who studies the interactions of organisms with each other and with their environment
ecology:	the branch of biology that deals with the interactions of organisms with one another and with the physical and chemical environment
ecosystem:	a biological community of interacting organisms and their physical environment
endangered:	organisms that are seriously at risk of extinction
energy pyramid:	a triangular picture of a food chain with producers at the bottom and consumers higher up

extinct:	an organism that no longer exists; the death of an entire species
fermentation:	the chemical breakdown of a substance (by microorganisms such as bacteria or yeast) in the absence of oxygen, producing simpler compounds and energy
fever:	dangerously high body temperature
fixed (fix, fixation):	the process in which nitrogen or carbon in their elemental forms are assimilated into biological molecules, eg nitrogen fixation by bacteria, carbon fixation during photosynthesis
food chain:	a series of organisms linked together to show which one eats what; arrows show the flow of energy through it
food web:	many food chains interlinked in an area form a food web, so organisms have many different food sources
fungi:	a kingdom of organisms which includes moulds, yeasts and mushrooms, that do not contain chlorophyll, produce spores to reproduce and feed on other matter
glucose:	a type of sugar, produced by plants during photosynthesis
habitat:	a particular type of environment in which an organism lives
herbivore:	an animal that eats only plants
hibernating:	an instinctive behaviour in which some animals spend time where conditions are not ideal (e.g. winter; periods of food scarcity) in an inactive (dormant) state
immune system:	the system that defends the body against infections, disease and foreign substances
infect:	a microorganism enters the body and multiplies, causing illness and damage to the organs
insectivore:	animals that feed on insects and other smaller invertebrates such as worms
insoluble:	substances that do not dissolve in a liquid
interact:	to have an effect on somebody/something else or on one another by being or working closely together
instinct:	a pattern of behaviour that requires no thinking and is biologically driven
legumes:	group of plants, including beans, lentils, peas and peanuts, that have edible seeds inside fruit that forms a pod
limewater:	a solution of calcium hydroxide in water which turns cloudy white in the presence of carbon dioxide
limit:	a restriction on the size or amount of something available or possible
migrate:	to move from one region or habitat to another according to the seasons

migration:	a seasonal movement of animals move from one place to another and back again
mimicry:	an adaptation in which one animal imitates (copies) another in appearance or behaviour
nitrogen:	an important element that forms part of proteins in all living organisms
nocturnal:	active at night
omnivore:	an animal that eats both plant and animal material
pathogen:	a microorganism that causes a disease
pigment:	is a molecule that absorb certain wavelengths of light and reflect others to produce colours
photosynthesis:	the process by which green plants and some bacteria use radiant energy from the Sun to turn carbon dioxide and water into glucose and oxygen
population:	a group of organisms from the same species that interbreed and live in the same place at the same time
population ecology:	the study of what contributes to the rise and fall of numbers of a species
predator:	an animal that naturally preys on other animals for food
primary consumer:	an organism that eats plant material
producer:	an organisms that is able to make its own food; for example, all green plants
protist:	member of a diverse group of microorganisms that are not viruses, bacteria or fungi; can be animal-like e.g. protozoa, plant-like e.g. algae or fungi-like e.g. slime moulds, water moulds
radiant energy:	energy contained in light rays or other forms of radiation
respiration:	the process by which energy is released from the glucose in food in a series of chemical reactions
secondary consumer:	an organisms that eats herbivores and primary consumers
soluble:	substances that are able to dissolve in a liquid
species:	a group of organisms classified by common attributes that can breed and produce fertile offspring
starch:	a substance which consists of many glucose molecules joined together; plants store glucose produced by photosynthesis in this complex form
terrestrial environment:	an environment on dry land
tertiary consumer:	an organism that eats secondary consumers; a carnivore at the highest level in a food chain that feeds on other carnivores
transmitted:	to cause something to be passed from one individual to another; eg. disease-causing microorganisms passed from one person to another
trophic level:	a feeding level in a food web, chain or pyramid; all organisms at the same trophic level get their energy in the same way

virus:

a small infectious agent that typically causes disease

Draw and discover the possibilities of what a slinky can be.





MATTER AND MATERIALS



KEY QUESTIONS:

- What is matter made up of, at the most basic level?
- What do elements look like at an atomic level?
- How are the atoms of one element different from the atoms of another element?
- Which table summarises all the elements known to humankind according to their chemical properties?
- Are atoms the smallest particles making up matter, or are they themselves made up of even smaller particles?
- What do scientists know about the 'inside' of the atom?
- Why do we say atoms are 'neutral'?
- When is a substance 'pure'?
- How is a compound different from an element?
- How is a molecule different from an atom?
- What holds molecules together?
- What happens to atoms and molecules during a chemical reaction?
- How is a mixture of elements different from a compound?

In this chapter, we will answer questions about the basic building block of matter, the **atom**.

NEW WORDS

- atoms
- element
- scientific model
- postulate

1.1 The building blocks of matter

What is matter? The traditional definition says matter is anything that has mass and occupies volume (takes up space).


We could say that matter is 'stuff', but that would not be very specific. To understand matter in a scientific way, we need to imagine what it is made of.

All the different types of matter that exist on Earth are made up of one or more chemical **elements**. You were introduced to some of the elements in Gr. 7 Matter and Materials. Before reading further, stop and see how much you can remember about the elements. Write down what you remember or say it out loud.

There are more than 100 known elements and scientists are still looking for more. We also learnt that each element has a unique name, chemical symbol and atomic number that represents it, along with a fixed place on the Periodic Table of elements.

The title of this section is 'The building blocks of matter'. For this reason, we will start our discovery by imagining a wall that has been built of bricks, like the one in the following picture. Can you see how the wall is made of many identical bricks?





A brick wall.

Similarly, we can think of most forms of matter as being made up of many, many small particles. These small particles are called **atoms**.

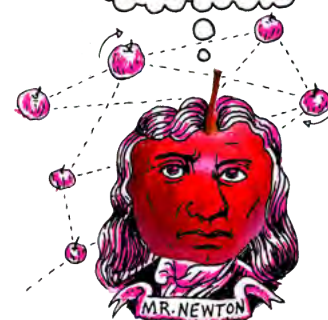
TAKE NOTE

Atomos is a Greek phrase which means 'not cut' or 'that which is indivisible'.



DID YOU KNOW?

Atoms are so small that until recently, it was impossible to see them, even using the strongest microscope. Nowadays there are microscopes connected to sophisticated computer software, which make it possible for scientists to actually 'see' atoms.



VISIT

Find out more about these microscopes which enable people to 'see' atoms
bit.ly/14Ablai



What are atoms?

The early Greek philosophers proposed that all matter is made up of incredibly small but discrete units (like the bricks in our wall example). Democritus (460 - 370 BC) was the first to call these units *atomos*. From this phrase came the term *atom* that we use today.



Democritus first used the term 'atomos' more than 2000 years ago to describe the smallest particle that matter is made of.

It took a very long time (more than 2000 years!) for the ideas of Democritus to be accepted by scientists. Why do you think it took so long? Discuss this in your class.

Can you imagine how difficult it must have been to convince those early scientists that matter consists of really, really small particles that no-one has ever seen?

How small are atoms really? Well, about 5 000 000 000 000 000 000 of them would fit inside the full stop at the end of this sentence. Of course different atoms have different sizes, so this is just an approximate number. Wait... atoms have different sizes? How does that work? In the next section, we will find out.

What are elements?

Democritus' ideas about matter were ignored and forgotten for more than 2000 years, until an Englishman by the name of John Dalton reintroduced them to the scientific world in 1803. Dalton made five claims about atoms that are still largely accepted as the truth today. Three of these claims, or **postulates** as they are more commonly called, tell us how to understand elements. We will get to the remaining two postulates later. Here is what Dalton taught us about elements:

1. **Each element consists of indivisible, minute particles called atoms.**
2. **All atoms of a given element are identical.**
3. **Atoms of different elements have different masses.**

This ties in with what we learnt about the elements in Gr. 7 Matter and Materials. Let us revise what we already know:

VISIT

The world's smallest movie made with atoms
bit.ly/178tzB3 and how the scientists made it
bit.ly/13m5p3T

- 1

2

3

4

5

6

7

8

9

10

11

12

13

14

15

16

17

18

Periodic Table of the Elements

No. Element

1 H																	2 He
3 Li	4 Be											5 B	6 C	7 N	8 O	9 F	10 Ne
11 Na	12 Mg											13 Al	14 Si	15 P	16 S	17 Cl	18 Ar
19 K	20 Ca	21 Sc	22 Ti	23 V	24 Cr	25 Mn	26 Fe	27 Co	28 Ni	29 Cu	30 Zn	31 Ga	32 Ge	33 As	34 Se	35 Br	36 Kr
37 Rb	38 Sr	39 Y	40 Zr	41 Nb	42 Mo	43 Tc	44 Ru	45 Rh	46 Pd	47 Ag	48 Cd	49 In	50 Sn	51 Sb	52 Te	53 I	54 Xe
55 Cs	56 Ba	57-71 La-Lu	72 Hf	73 Ta	74 W	75 Re	76 Os	77 Ir	78 Pt	79 Au	80 Hg	81 Tl	82 Pb	83 Bi	84 Po	85 At	86 Rn
87 Fr	88 Ra	89-103 Ac-Lr	104 Rf	105 Db	106 Sg	107 Bh	108 Hs	109 Mt	110 Ds	111 Rg	112 Cn	113 Uut	114 Uuq	115 Uup	116 Uuh	117 Uus	118 Uuo
<div> <div></div> Transition Metal <div></div> Metal <div></div> Metalloid <div></div> Nonmetal <div></div> Noble Gas <div></div> Lanthanide <div></div> Actinide </div>																	
57 La	58 Ce	59 Pr	60 Nd	61 Pm	62 Sm	63 Eu	64 Gd	65 Tb	66 Dy	67 Ho	68 Er	69 Tm	70 Yb	71 Lu			
89 Ac	90 Th	91 Pa	92 U	93 Np	94 Pu	95 Am	96 Cm	97 Bk	98 Cf	99 Es	100 Fm	101 Md	102 No	103 Lr			

A cartoon illustration of a snail with a grey, spiral shell and a pink body. The snail is positioned on a green, three-dimensional staircase that recedes into the background. The snail is moving upwards, leaving a trail of small, dark, oval-shaped droplets behind it. The background is a solid light green color.

QUESTIONS:

-

- 122

6. What is the atomic number of hydrogen and what is the atomic number of carbon?

7. Complete the following table by supplying either the name or symbol for the elements listed, and whether it is a metal, non-metal, or semi-metal.

Name	Symbol	Metal or non-metal?
Hydrogen		
	Li	
	Na	
Carbon		
	Si	
Magnesium		
	O	
	Cl	
Potassium		
Boron		
	Cu	

DID YOU KNOW?

The only letter that does not appear on the Periodic Table is the letter 'J'.



TAKE NOTE

You can find a larger version of the Periodic Table on the inside cover of your book for easy reference.




Are atoms really the smallest particles? Dalton thought so! He also postulated that:

4. Atoms can neither be created nor destroyed during chemical reactions .

Dalton was correct in saying that atoms cannot be created or destroyed in chemical reactions. Does that mean atoms are the smallest particles of matter? Not exactly. Scientists have since discovered that atoms themselves are made up of even smaller particles. We call these sub-atomic particles.

We will learn about the sub-atomic particles that make up atoms shortly, but first we need to talk briefly about **scientific models**. Do you know what a model car is?



This is a photograph of a real car. It is about 2.5 m long.



This is a photograph of a model car. It is about 25 cm long.

Scientists use models to help them understand the real world and how it works.

Scientific models

Have you ever seen a geographical globe? The globe in the next picture is a model of the Earth. What do you think it can be used for? Do you think we could learn more from a globe than from a map of the Earth?



A globe of the world.



A map of the world.

Globes are the best representations we have of our planet; because they are three-dimensional. Can you think of some of the things we can learn about the Earth from a globe?

Sometimes a model can be an idea or a set of ideas; a simplified representation of difficult concepts or phenomena. A scientific model is a set of ideas that tells a story about something in the world around us, in the same way that the globe tells us a story about Earth.

A model of the atom

Atoms cannot be seen with the naked eye, only with very powerful microscopes. However, scientists have a good idea of how they behave in different situations. Based on these ideas, they have developed a model of what the atom looks like, to help us understand atoms better.



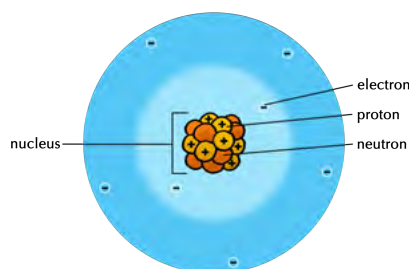
The modern model of the atom teaches us that all atoms are made up of sub-atomic particles. Sub-atomic means 'smaller than the atom'. In the next section, we are going to learn more about these interesting little particles.

1.2 Sub-atomic particles

After many decades of studying atoms, scientists discovered that all atoms are made up of three different kinds of **sub-atomic particles**. They are called:

- electrons
- protons
- neutrons

The following picture of the atom shows how they all fit together. These three sub-atomic particles form the basis of our modern-day understanding of what atoms look like on the inside. Let's look at what is known about each particle in turn.



Neutrons, protons and electrons are sub-atomic particles that make up an atom.

NEW WORDS

- atomic nucleus
- sub-atomic particle
- electrons
- neutrons
- protons



Protons

The protons are deep inside the atom, in a zone called the **nucleus**. The protons are said to be positively charged. What does this mean?

To answer this question, think about the following phenomena that have been discovered by scientists:

- When two protons get near each other, they push each other away.
- When an electron gets near a proton, they attract each other.
- Two electrons will also push each other away.

What causes this? There must be some property of electrons and protons that make them apply these forces. Scientists use the word 'charge' to represent the property these particles have. We observe that:

- like charges repel (meaning the same charges push each other away)
- opposite charges attract

Neutrons

Neutrons are particles that are neither positively nor negatively charged. They are neutral. The neutrons together with protons form the tightly packed nucleus at the centre of the atom.

Electrons

Electrons are the smallest of the three sub-atomic particles. Electrons are about 2000 times smaller than protons and neutrons. The electrons move in a zone around the **atomic nucleus** at extremely high speeds, forming an electron cloud that is much larger than the nucleus. Have another look at the drawing which shows a model of the atom to see this. These three sub-atomic particles help us understand what atoms look like on the inside.

DID YOU KNOW?

If we could enlarge the size of the nucleus to the size of the full stop at the end of this sentence, the outer edges of the electron cloud surrounding it would be between 3 and 5 meters away.





ACTIVITY: Make your own model of an atom

Do you remember Dalton's 3 postulates from the beginning of the chapter? They are:

1. **Each element consists of indivisible, minute particles called atoms.**
2. **All atoms of a given element are identical.**
3. **Atoms of different elements have different masses.**

So, each element on the Periodic Table has its own type of atom. The atoms of different elements are different as they have different numbers of protons. Do you remember that we said the **atomic number** of an element is the number of protons in an atom of that element?

1. So, if we wanted to make a model of a nitrogen atom, how many protons would we need?

2. If we wanted to make a model of a sulfur atom, how many protons would we need?

In most atoms of an element, the number of neutrons in the nucleus is the same as the number of protons. The number of electrons can change, but for now we are going to make models of neutral atoms. So, there must be the same number of electrons as protons.

DID YOU KNOW?

The nucleus is very dense. That means the protons and neutrons are tightly packed and are very heavy for their size. If the nucleus was scaled up to the size of a full stop, it would weigh as much as a fully loaded minibus taxi, or 2,5 tonnes!



MATERIALS :

- glue
- paper plate
- playdough, beads, dried lentils or peas, etc

INSTRUCTIONS:



1. After reading the information about atoms, your teacher will give you an element of which you have to build a model. What is the name of your element?

2. What is the atomic number of your element?

3. How many protons will you need to make for your atom?

4. Now decide what objects you will use to create the subatomic particles in your model.

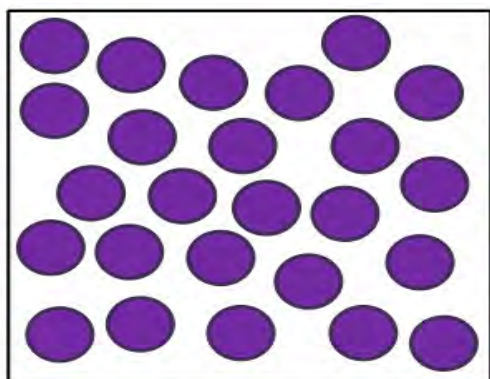
5. Stick these onto the paper plate and provide labels.
6. After you have built your model, draw a model of your atom below.
Provide labels. These are both models of your atom!



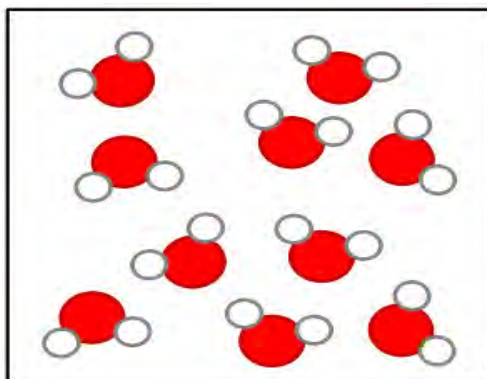
Can you remember learning about mixtures in Gr. 7? You may remember that a mixture consists of two or more substances mixed together. The next section is NOT about mixtures. It is about substances that are not mixed with anything and consists of only one type of matter throughout. Such substances are called **pure substances**. In this sense, 'pure' simply means: not mixed with any other substances.

1.3 Pure substances

There are only two classes of pure substances, namely **elements** and **compounds**. To understand the difference between the two, look at the two diagrams below.



An element consists of atoms that are all the same kind.



A compound consists of two or more kinds of atoms in a fixed ratio.

NEW WORDS

- pure substance
- compound
- chemical bond
- molecule
- chemical formula
- chemical reaction
- decomposition reaction



VISIT


Just how small is an atom?
(video)

bit.ly/18d6vT4



TAKE NOTE

Here in these diagrams,
the different coloured
circles represent
different **atoms**.



The diagram on the left represents an element. Can you see that all the atoms are of the same kind? An element is a material that is made up of atoms of only one kind.

Now look at the diagram on the right representing a compound. This diagram shows two important things about compounds:


- The compound consists of atoms, but there are more than one kind.
- The different atoms are combined in little clusters and the clusters are all exactly the same.

A compound is a material that is made up of two or more kinds of atoms that are chemically bonded together.

We are now going to explore each of these classes on their own and discuss some examples of each.

Elements

We have just learnt that an element is made up of atoms of the same kind. This means that if we had a piece of the metal copper, it would be made up entirely of copper atoms. Likewise, a piece of silver would be made up entirely of silver atoms. Copper and silver look different and have different properties, because they are made up of different atoms. Have a look at the following table which illustrates the sub-microscopic image of the atoms and also a piece of jewellery made from each of the different metals.

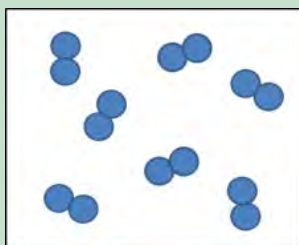
Copper	Silver
<p>Sub-microscopic structure of copper</p> 	<p>Sub-microscopic structure of silver</p> 
<p>The element copper (Cu) consists of only copper atoms.</p> 	<p>The element silver (Ag) consists of only silver atoms.</p> 
<p>A necklace made of copper wire.</p>	<p>Earrings made of silver.</p>

ACTIVITY: Studying representations of atoms and elements

QUESTIONS:

1. Why are the silver atoms bigger than the copper atoms in the previous diagrams? Hint: Find the two elements on the Periodic Table and compare their positions.

2. Do you think the substance represented in the following diagram is an element? To help you answer the question, go through the questions below the diagram.



- a) First write down what you see in the picture.

- b) Are the clusters tightly packed or far apart?

- c) What does that mean? Do you think the substance is a solid, a liquid or a gas?

- d) Do you think it is a mixture of substances or a pure substance? Why do you think so?

- e) Are the atoms all of the same kind?



f) What class of substances is made up of only one kind of atom?

g) Is the substance an element? Why?

h) Can elements be made up of molecules?

The clusters of atoms in the previous example are called molecules. **Molecule** is a very important word in chemistry. A molecule is two or more atoms that have chemically bonded with each other.

The atoms in a molecule can be of the same kind (in which case it would be a molecule of an element), or they can be of different kinds (in which case it would be a molecule of a compound).



Not all elements have molecules. The metals on the left hand side and the middle part of the Periodic Table are solids at room temperature and so they exist as tightly packed arrays of atoms like the previous examples of silver and copper.

Many of the non-metals on the right hand side of the Periodic Table are gases at room temperature that exist as molecules made up of two atoms each. These are called **diatomic molecules**. The picture of the element that we discussed earlier shows what diatomic molecules look like. Oxygen (O_2), nitrogen (N_2), hydrogen (H_2), chlorine (Cl_2) and some other elements from the non-metals all form diatomic molecules.

Draw a picture of one of these diatomic molecules in the space below.

TAKE NOTE

Diatomic refers to a molecule made of two of the same atoms bonded together, as in oxygen (O_2). 'Di' means two. **Triatomic** refers to a molecule made up of three of the same atoms bonded together, like ozone (O_3).








ACTIVITY: Atoms and molecules

Let's make sure we understand the difference between atoms and molecules.

QUESTIONS:

1. Look at the following diagrams. Decide whether each represents an atom or a molecule. If it is a molecule, state how many atoms make up the molecule.


Diagram	Atom or molecule?
	
	
	
	
	

2. Look at the following complex molecule.



- a) How many atoms make up this molecule?

- b) How many different types of atoms make up this molecule?




c) What holds the atoms together in this molecule?

Now let's think about this: if compounds consist of two or more kinds of atoms, that would mean that compounds are made of two or more different elements that have combined.

Compounds

There are at least 118 elements in our known universe. They can form compounds by bonding in millions of different combinations - far too many to discuss here! We will look at a few simple combinations of elements to illustrate the idea.

Since water is such an important compound for organisms living on Earth, we will use that as our first example. Scientists know that a water molecule is made up of one oxygen atom and two hydrogen atoms. If we could see them, all water molecules would look a little bit like this diagram of a water molecule.



A water molecule representation.

All water molecules are exactly the same. We say the atoms are bonded in a *fixed ratio*: two hydrogen atoms for every one oxygen atom. The atoms in the molecule are held together by a special force that we call a '**chemical bond**'.

Chemical formulae


Can you remember that each element has its own unique chemical symbol? We can combine these symbols into a chemical formula for water. The **chemical formula** is another very important concept in chemistry.

The chemical formula for water is H_2O . It shows the ratio of hydrogen atoms (two) to oxygen atoms (one) in one molecule of water. What do you think the chemical formula CO_2 tells us?

In the next activity we are going to practice writing and understanding chemical formulae. It is always a good idea to think about a new concept in many different ways. For this reason, we are also going to build models of the molecules we are writing formulae for.

DID YOU KNOW?

The International Union of Pure and Applied Chemistry (IUPAC) name for water is dihydrogen monoxide.



ACTIVITY: Writing and understanding simple chemical formulae

MATERIALS:


- play dough or plasticine clay in different colours

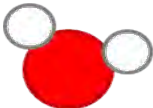


INSTRUCTIONS:

1. In the following table, the names of some pure substances are given in the left-hand column. Fill in all the empty blocks in the table.
2. Build a model of one molecule of each of the compounds on the table. Your atoms should be roughly pea-sized. It may help you to build the model before drawing the molecule in the right-hand column. When you are done, show your teacher.

To help you do this, here are some guidelines:

- Each row in the table contains enough information that you can fill all the empty blocks.
- The first row has been filled in for you, so that you have an example:
 - Column 1 contains the name: water
 - Column 2 contains the formula: H_2O
 - Column 3: The formula of water (in column 2) contains all the information we need to fill in the block in the 'What is it made of?' column. When we read the formula H_2O , the subscript '2' tells us there are two H atoms. Since O does not have a subscript, it means there is only one O atom.
 - Column 4: The model of a water molecule must reflect that there is one O atom and two H atoms. How do we know that O must be in the middle? For now, it is enough to know that the atom that we have the least of, is usually in the middle.



Name of substance	Chemical formula	What it is made of?	What would a molecule of this compound look like (if we could see it)?
Water	H ₂ O	Two H atoms and one O atom	
Carbon dioxide	CO ₂		
Sulfur dioxide			
Dihydrogen sulfide	H ₂ S		
Ammonia		One N atom and three H atoms	
Oxygen gas		Two O atoms	
Nitrogen gas	N ₂		
Chlorine gas			
Hydrogen gas		Two H atoms	

QUESTIONS:

1. List all the substances from the table that are elements. Write their names and formulae.

2. List all the substances from the table that are compounds. Write their names and formulae.



How did you know which of the substances in the table were compounds and not elements?

You probably looked to see which ones were made up of more than just one kind of atom. A compound is a material that consists of atoms of two or more different elements. The elements are not just physically mixed, but chemically bonded together at the atomic level.

Water (H_2O), carbon dioxide (CO_2) and salt or sodium chloride (NaCl) are examples of compounds, while oxygen gas (O_2), hydrogen gas (H_2) and nitrogen gas (N_2) are examples of elements.

The compound with the formula H_2O_2 also consists of hydrogen atoms and oxygen atoms. The formula tells us that one molecule of this substance is made up of two atoms of hydrogen and two atoms of oxygen. Is H_2O_2 the same as water? What do you think?

Do not confuse H_2O_2 with H_2O ! H_2O_2 is a compound called hydrogen peroxide. Hydrogen peroxide is similar to water in that it is a clear, colourless liquid at room temperature (25°C) though not as runny, but it is different in many ways. The following properties of hydrogen peroxide may convince you that it is not the same as water:


- Hydrogen peroxide has a boiling point of 150°C and it is a very effective bleach for clothes and hair.
- Concentrated hydrogen peroxide is so reactive that it is used as a component in rocket fuel!

TAKE NOTE


Corrosive substances are substances that cause damage to metal or other materials through a chemical process. Think of rainwater causing rust that eats away at metal.

- Hydrogen peroxide is extremely corrosive.
- We can drink water, but hydrogen peroxide is very hazardous and harmful.

If this doesn't convince you, let us compare what the hydrogen peroxide molecule looks like next to water:



Hydrogen peroxide.



Water.

Even though they are made up of exactly the same elements, the two compounds are very different and should never be confused with one another.

The purpose of the comparison of hydrogen peroxide and water above was to show you that the atoms in a given compound are always combined in a fixed ratio. In all water molecules in the universe, there will always be one O atom and two H atoms bonded together.

This was the fifth of Dalton's postulates:


5. Atoms chemically combine in fixed ratios to form compounds.

How do atoms 'combine'? What makes them stick together to form molecules?

Chemical bonds

Look at the photo with the different arrangements of metal balls. These balls are magnetic and this allows you to make different patterns by sticking them together. What makes magnets stick together?


Magnets attract (or repel) each other because of a magnetic force between them (you will learn more about magnets in Gr. 9). When atoms combine, they do so because they also experience an attractive force. The force is slightly more complex than the force between magnets, but it works in the same way: The force holds atoms together as if they are stuck together with glue. The forces that hold atoms together are called **chemical bonds**.



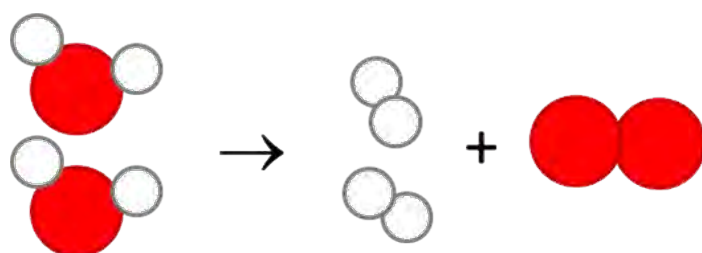
These balls are magnetic.

In the water molecule, chemical bonds between O and the two H atoms hold the whole molecule together.

How many chemical bonds in each water molecule? Look at the diagram on the right if you are not sure. The water molecule has two identical O-H bonds. What would happen if we had enough energy to break those bonds? What would we have if we separated water molecules into their atoms? Theoretically, we would have hydrogen and oxygen atoms.



What actually happens is that the hydrogen atoms immediately combine to form H_2 and the oxygen atoms immediately combine to form O_2 .



When atoms separate from each other and recombine into different combinations of atoms, we say a **chemical reaction** has occurred.

In the above chemical reaction, the water has decomposed (broken up) and recombined into smaller molecules. We say that water has undergone a **decomposition reaction** in the example above. Of course, not all chemical reactions are decomposition reactions. There are many different kinds of chemical reactions and we are going to investigate some examples in the next section.

Chemical reactions

Two important events happen in all chemical reactions:

- chemical bonds break
- new chemical bonds form

This means that, in **all** chemical reactions, the atoms in the molecules rearrange themselves to form new molecules.

In the next activity, we are going to simulate the decomposition reaction of water using clay or play dough balls to represent the different atoms.



ACTIVITY: Imagining the decomposition of water at the scale of molecules

MATERIALS:

- play dough or plasticine clay in two different colours

INSTRUCTIONS:

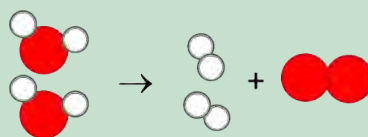
1. Build two water molecules from the clay or play dough. Look at the previous pictures to remind you what a water molecule looks like. You may use any colour clay to build yours.
2. Now break all the bonds holding the molecules together, separating them into individual atoms.
3. Answer the following questions:
 - a) How many hydrogen (H) atoms do you have?

b) How many oxygen (O) atoms do you have?

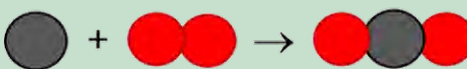
4. Combine the hydrogen and oxygen atoms into hydrogen molecules (H_2) and oxygen molecules (O_2).
5. Answer the following questions:
 - a) How many hydrogen molecules could you build from the H atoms?

b) How many oxygen molecules could you build from the O atoms?

6. Can you write a chemical equation for the reaction that you have just built with the clay models? Look at the diagram for inspiration:



7. Let us look at another example of a chemical reaction: the reaction when carbon (in coal) reacts with oxygen (in the air) to form carbon dioxide:



You can use the play dough balls to simulate this reaction.

a) Try to write a chemical equation for the reaction when carbon and oxygen combine to form carbon dioxide. (Hint: Use the diagram to guide you.)

b) How do the atoms in coal and oxygen rearrange to form carbon dioxide? Which bond breaks?

c) What new bonds form?

Next, your teacher will demonstrate two chemical reactions to the class. Your job is to watch carefully and write down your observations, which is what you can see happening.

INVESTIGATION: The decomposition of copper chloride

AIM: To determine whether it is possible to decompose copper chloride using electrical energy.

MATERIALS AND APPARATUS:

- beaker
- cardboard disk large enough to cover the top of the beaker
- two graphite electrodes
- 2 bits of wire
- copper chloride solutions
- 9 volt battery


Make the following observations before starting:

1. What colour is the copper chloride solution?

2. What colour are the graphite electrodes?

METHOD:

1. Pour the copper chloride solution into the beaker.
2. Make two small holes in the cardboard disk and push the electrodes



VISIT

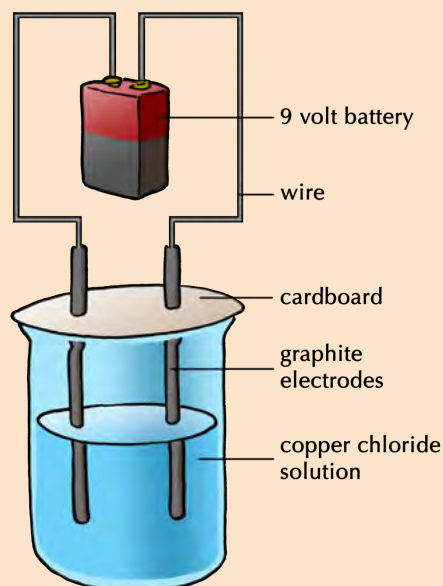
A video showing a similar reaction using copper sulfate.

bit.ly/1IOztaB



through the holes as shown on the following diagram.

3. Place the disk over the beaker, so that the greater part of each electrode is under the surface of the solution.
4. Connect the tops of the electrodes to the ends of the battery using the wire lengths. Have a look at the diagram of the experimental set-up.
5. Allow the reaction to proceed for a few minutes and observe what happens.
6. When the reaction has proceeded for approximately 10 minutes, the wires can be disconnected and the set-up disassembled.



The demonstration that your teacher sets up might look something like this.

TAKE NOTE


The electrode attached to the positive side of the battery is the positive electrode and called the **anode**. The electrode attached to the negative side of the battery is the negative electrode and called the **cathode**.

OBSERVATIONS:

1. After the reaction had proceeded for a few minutes, what do you observe on the surface of the two electrodes?

2. At the end of the experiment, what colour was the copper chloride?

3. How did the appearance of the graphite electrodes change?



4. Summarise your experimental observations in the following table.

	The copper chloride solution	Electrode 1 (called the anode)	Electrode 2 (called the cathode)
Before the experiment			
After the experiment			

ANALYSIS AND DISCUSSION:

1. What gave the copper chloride solution its intense blue colour?

2. Do you think that some of the copper chloride may have changed into something else during the reaction? Explain why you think so.

3. How would you explain the bubbles on the surface of the first electrode? Do you have any idea what they might have been? Hint: what did the electrode smell like afterwards?

4. Do you know what the reddish-brown coating on the second electrode is? Hint: Which metal has that same characteristic reddish-brown colour?

5. How do we know that a chemical reaction has occurred?

CONCLUSION:

1. Write a conclusion for the investigation. In your conclusion you should rewrite the aim of the investigation into a statement about the findings of your investigation.



Do you think it would have been possible to separate the copper chloride into copper and chlorine by any of the physical separation methods that we learnt about in Gr. 7 Matter and Materials, such as sieving, filtering, evaporation, distillation or chromatography? Here is a hint: None of those methods are able to break the bonds between atoms in a substance.

The answer is no. Copper and chlorine are chemically bonded in copper chloride. We know this from its chemical formula: CuCl_2 . Physical separation methods can only be used to separate **mixtures** into the substances they are made up of.

We have learnt about atoms, molecules, elements and compounds so far. These are sometimes confusing concepts because they describe things that are too small to see and sometimes difficult to imagine. In the next section we are going to return to the idea of mixtures and see how everything we have learnt so far can be placed into a scheme for classifying matter and materials.

NEW WORDS

- mixture
- distinction




1.4 Mixtures of elements and compounds


In Gr. 7 Matter and Materials we learnt that a mixture is a combination of two or more materials. In this chapter we learnt about pure substances. Pure substances always consist of one type of matter throughout. That matter can be an element or a compound and we have learnt how to distinguish between them by looking at the different kinds of atoms they are made up of:

- elements are made up of just one kind of atom, and
- compounds are made up of more than one kind of atom, but always combined in a fixed ratio.

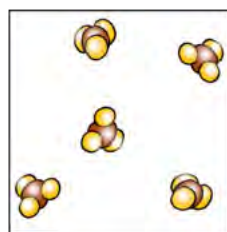
All material can be classified as either a pure substance (in other words, just one substance throughout), or a mixture of substances. Let's look at some diagrams to help us understand this **distinction** a little better.



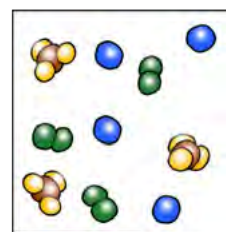
a) Atoms of an element



b) Molecules of an element



c) Molecules of a compound



d) Mixture of elements and a compound

Diagrams to show the difference between elements, compounds and mixtures.

The two diagrams on the left (a and b) summarise what we know about the particles in elements, namely that an element can consist of atoms or molecules, but that the atoms in a certain element are always of only one kind.

What special name do we give to the molecules of elements which consist of two atoms bonded together?

Diagram (c) shows that the molecules of a compound consist of two or more different kinds of atoms, but in a given compound they will always be bonded in the same fixed ratio. Think of the example of water (H_2O) and hydrogen peroxide (H_2O_2) that we saw earlier.

Diagram (d) shows how elements and compounds are different from mixtures. Elements and compounds are both pure substances (they have the same kinds of particles throughout) whilst mixtures always have more than one kind of particle. We find mixtures of elements and compounds in many places in the natural world, such as in the air, sea water, in rocks, and in living organisms.

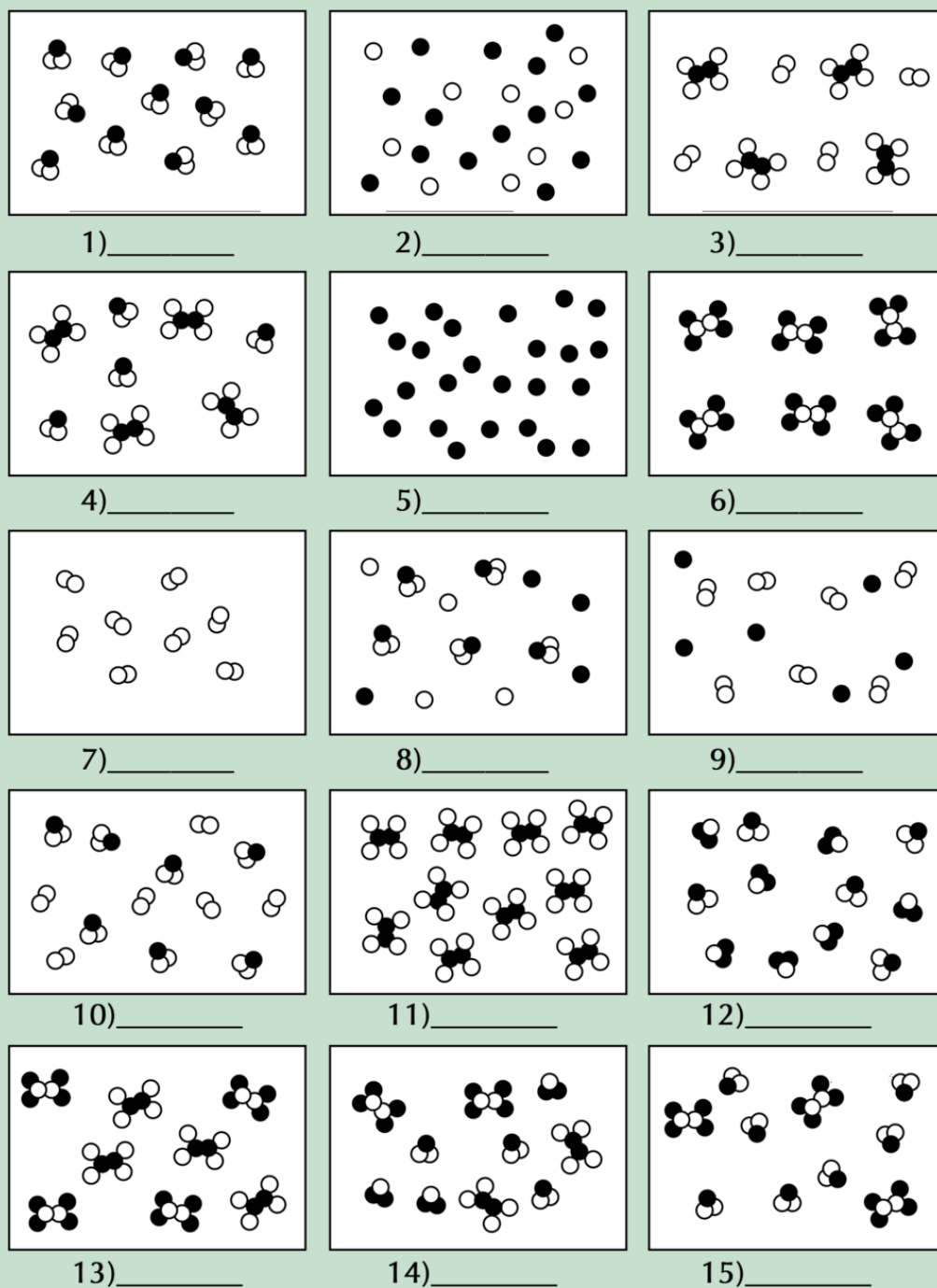
In the next activity, let's see if we can apply these principles to distinguish between different possibilities.

ACTIVITY: Distinguishing between elements, compounds and mixtures

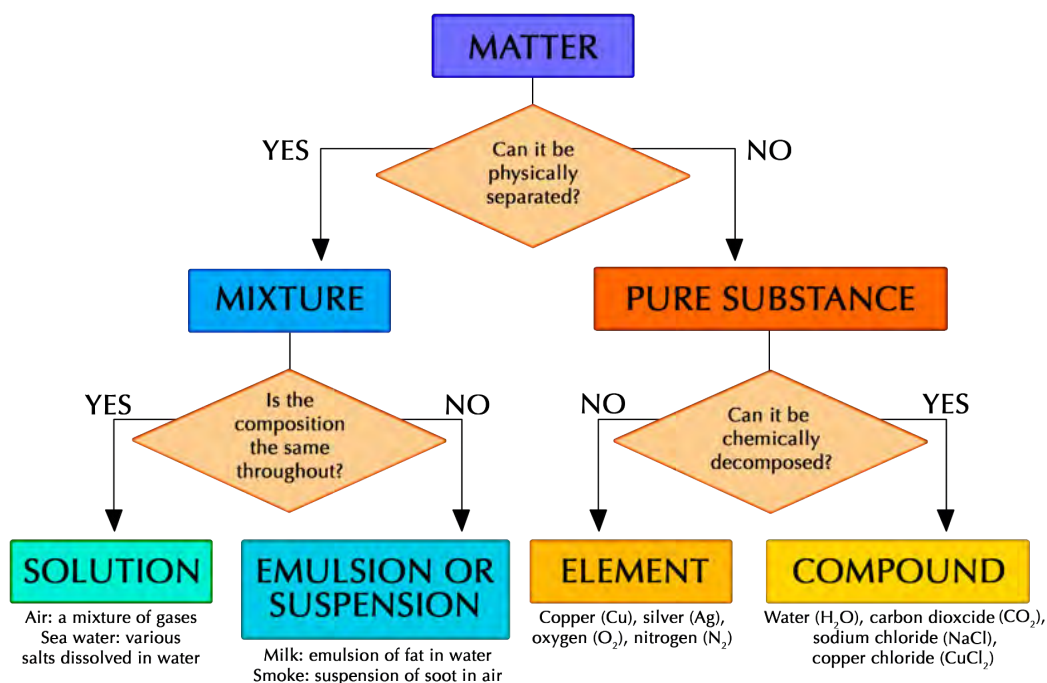
INSTRUCTIONS:

1. Each of the 15 blocks contains a diagram representing atoms and molecules of matter.
2. You must classify the matter in each block using only the letters A to E to identify the categories:
 - A = element
 - B = compound
 - C = mixture of elements
 - D = mixture of compounds
 - E = mixture of elements and compounds





You may find the following chart useful to help you understand how all these concepts fit together.



This flow diagram brings together all the different classes of matter we learnt about in this chapter. It puts them all into a scheme that helps us see how the different classes are related to each other.

SUMMARY:

Key Concepts

Atoms

- All matter is made up of tiny particles called atoms.
- The atoms of each element are unique and essentially identical to each other.
- All the known elements are listed on the Periodic Table.

Sub-atomic particles

- The three main sub-atomic particles that determine the structure of the atom are protons, neutrons and electrons.
- Protons are positively charged and are found in the nucleus, deep in the centre of the atom.
- Neutrons are similar to protons in size and mass, but they do not carry any charge (they are neutral). They are also found in the atomic nucleus.
- Electrons are negatively charged particles, much smaller than protons and neutrons. A cloud of fast-moving electrons surrounds the atomic nucleus.
- In a neutral atom, the number of protons always equals the number of electrons; hence the atom is neutral.



Pure substances

- All matter can be classified as mixtures of substances or pure substances.
- Pure substances can be further classified as elements or compounds.

Elements

- All the atoms in an element are of the same kind. That means that an element cannot be changed into other elements by any physical or chemical process.
- Elements can be built up of individual atoms, or as bonded pairs of atoms called diatomic molecules.
- When elements combine, they form compounds.

Compounds

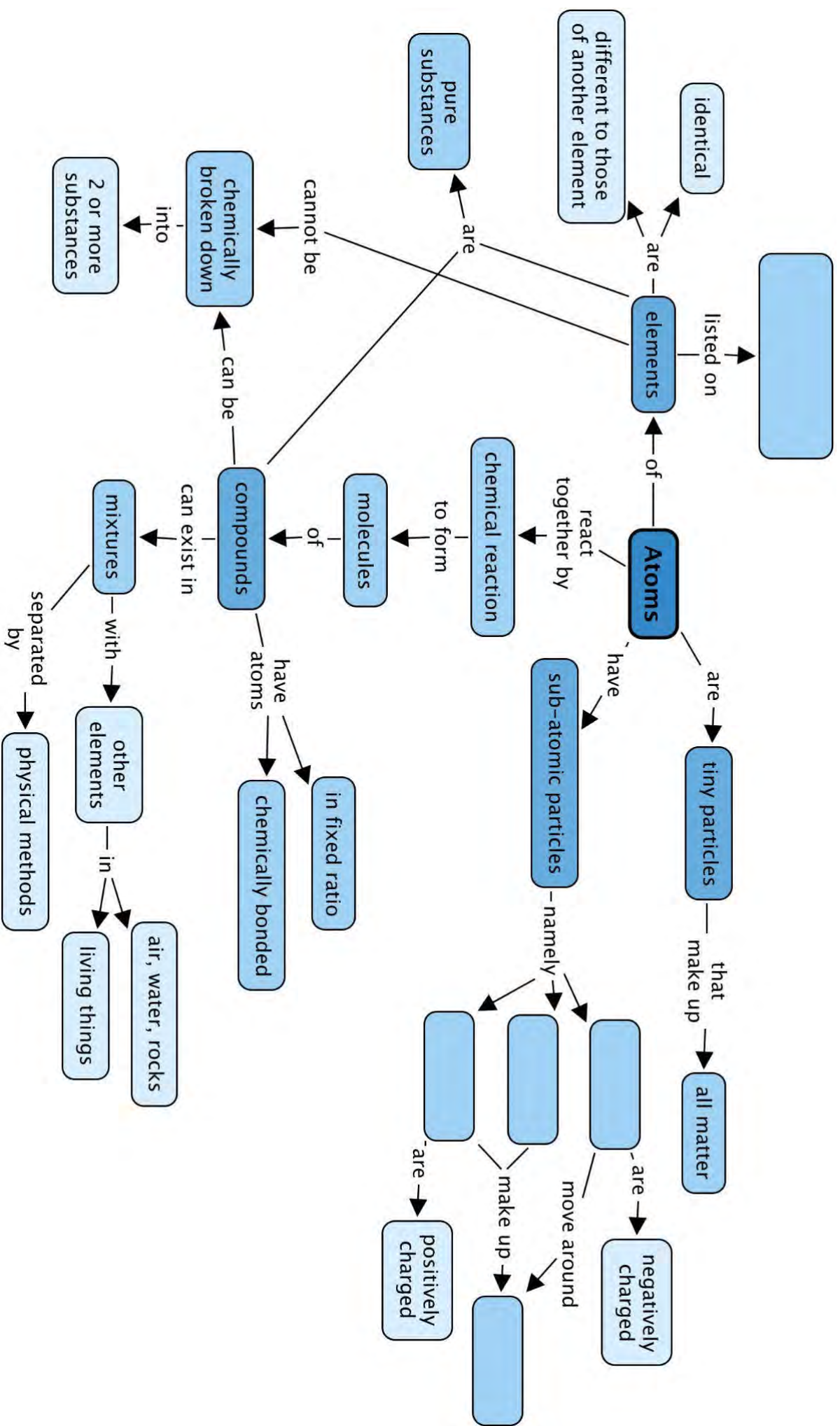
- In a compound, atoms of two or more different kinds are chemically bonded in some fixed ratio.
- The atoms that make up a molecule are held together by special attractions called chemical bonds.
- Compounds can be formed and broken down in chemical reactions.
- A chemical reaction in which a compound is broken down into simpler compounds and even elements, is called a decomposition reaction.
- Compounds cannot be separated by physical processes, but they can be separated into their elements (or simpler compounds) by chemical processes.


Mixtures

- Mixtures are combinations of two or more elements and/or compounds.
- The components in a mixture can be separated by physical separation methods, such as sieving, filtration, evaporation, distillation and chromatography.

Concept Map

The concept map summarizes all that we have learnt in this chapter about atoms, elements, compounds and mixtures. You need to complete the concept map by filling in the name of the table that lists all the elements, and the names of the three sub-atomic particles. You need to look at the concepts which come afterwards to determine which sub-atomic particle must be placed in which space.





REVISION:

1. Name the three sub-atomic particles that atoms are made up of. [3 marks]

2. Draw a picture of the atom. Your picture must show all three different types of sub-atomic particles. [4 marks]


3. Read the following statements, and answer the questions that follow:

- Some elements consist of molecules.
- All compounds consist of molecules.


- a) Do all elements consist of molecules? Explain your answer briefly. [2 marks]

- b) Can you think of at least three examples of elements that do NOT consist of molecules? Write down their names and formulae. [6 marks]


- c) Give examples of three elements that exist as molecules. Write down their names and formulae, and draw one molecule of each. [3 x 3 marks each = 9 marks]




4. Give examples of three compounds. Write down their names and formulae, and draw one molecule of each. [3 x 3 marks each = 9 marks]



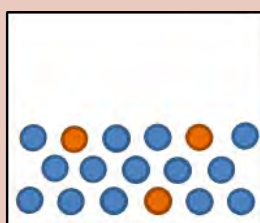
5. How are the molecules of an element different from the molecules of a compound? You may use drawings in your explanation. [4 marks]



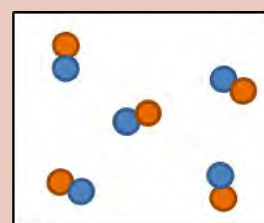
6. Each of the nine blocks below (labelled A to I) contain some matter. You must answer the following questions using the diagrams in the blocks. Each question may have more than one answer! [7 marks]




A



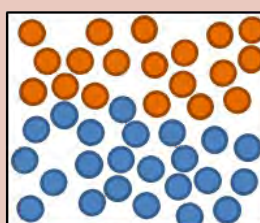
B



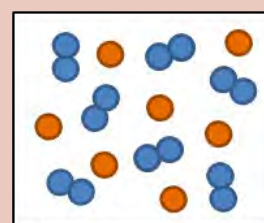
C



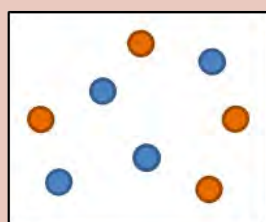
D



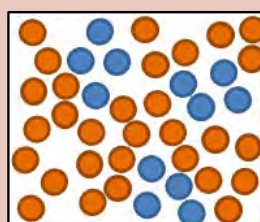
E



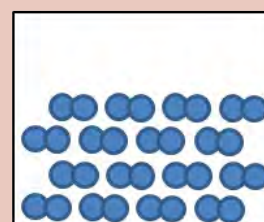
F



G



H



I

a) Which blocks represent the particles of an element?

b) Which block represents the particles of a compound?

c) Which block represents the particles of a mixture?

d) Which block represents the particles of a pure substance?

e) Which block represents diatomic molecules of an element?

7. What is the difference between mixture and compounds in terms of how we can separate them? [2 marks]

Total [44 marks]



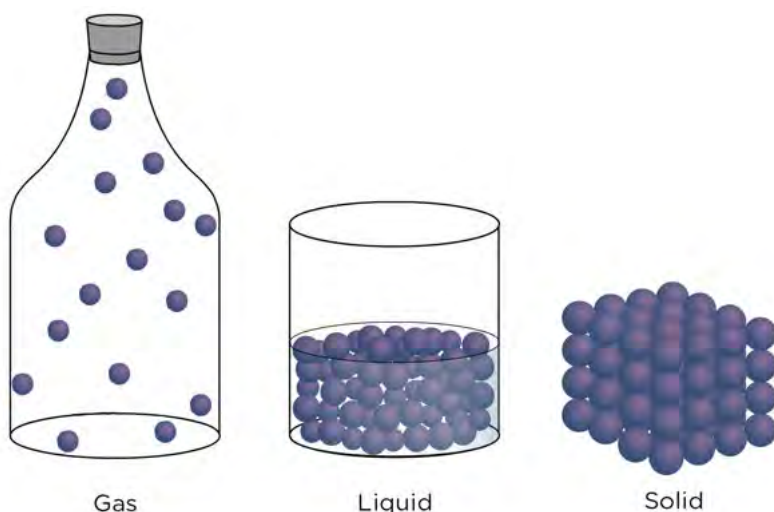


KEY QUESTIONS:

- What is the particle model of matter?
- How small are atoms and molecules?
- How does the particle model of matter describe solids, liquids and gases?
- How does the particle model of matter help us understand the process of diffusion?
- How can materials be made to change their state?
- How does the particle model of matter help us to understand changes of state in materials, such as melting, evaporation, condensation and freezing?
- How are density, mass and volume related to each other?
- How do the densities of solids, liquids and gases compare?
- Which aspects of the particles in a given material influence the density of that material?
- Why does oil float on water? Is this related to density?
- How can the particle model of matter help us to understand expansion and contraction?
- How does a gas exert pressure?
- Is the pressure a gas exerts related to the number of gas particles? If so, how?
- What happens to pressure when we change its volume and temperature?

Can you remember learning that matter can exist in three different states?
What are the three states called?

Can you remember the properties of the different states of matter? Discuss this in your class. Look at the following diagram of the states of matter to help you. Remember to take some notes as you discuss in class.

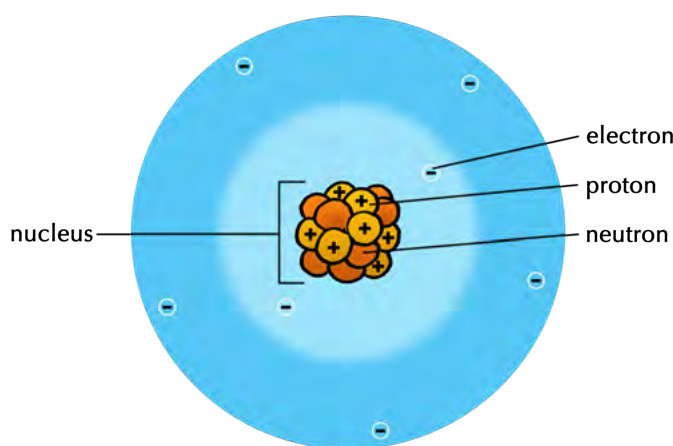


Each state of matter behaves differently and the particles in each state behave differently. This diagram compares the particles in a gas, a liquid and a solid.

In this chapter we are going to review what we know about solids, liquids and gases. We are going to learn about a scientific model that can be used to describe how the particles in all three states behave. This model is called the particle model of matter and it will help us understand much more about the properties of solids, liquids and gases. Let's get started!

2.1 What is the particle model of matter?

In the previous chapter we learnt that scientists use models when they want to describe things that are difficult to understand. We discussed a model of the atom that helped us to imagine what atoms look like.



This model of the atom shows us where the different sub-atomic particles can be found. The sub-atomic particles shown here are the proton, neutron and electron.

Theories are similar to models. They explain scientific **phenomena** (things and events that can be described and explained in scientific terms) using pictures and words.

NEW WORDS

- scientific theory
- phenomenon
- disordered
- uniform
- random
- reverse
- controlled experiment



TAKE NOTE

If you need to, turn back to chapter 1 to revise the terms atom, element, compound and molecule and how they relate.

What does the particle model of matter teach us?

The particle model describes matter in a very specific way. It describes four important aspects of matter:

- All matter is made up of particles that are incredibly small - much too small to see with the naked eye. The particles can be atoms or combinations of atoms that are bonded.
- There are forces between the particles.
- The particles in matter are always moving. The more energy they have, the faster they move.
- The spaces between the particles in matter are empty. You might assume that the spaces between particles are filled with air, but this is not the case. They contain nothing at all.

Why is the particle model of matter so useful?

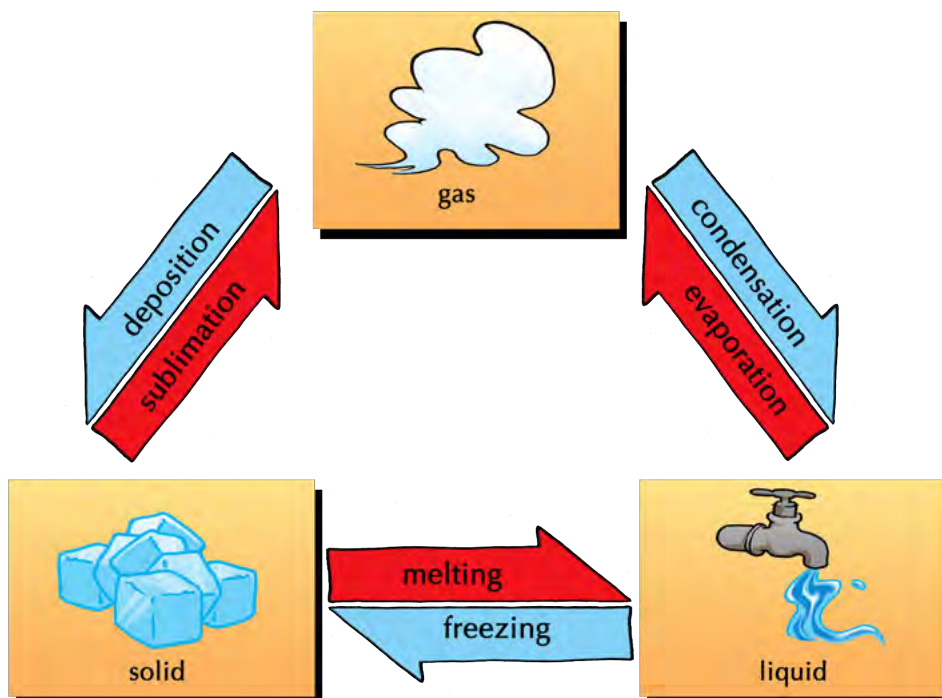

The particle model of matter is one of the most useful scientific models because it describes matter in all three states. Understanding how the particles of matter behave is vital if we hope to understand science!

The model also helps us to understand what happens to the particles when matter changes from one state to another.

The following diagram shows different changes of state, as well as which processes are the **reverse** of each other. Melting and freezing are the reverse processes of each other and so are evaporation (boiling) and condensation.

DID YOU KNOW?

Under special circumstances, a solid can change directly into a gas without melting first. This process is known as **sublimation** and its reverse (when a gas changes directly into a solid without condensing first) is called **deposition**.



The change of states

ACTIVITY: Changes of state revision

INSTRUCTIONS:

1. Refer to the previous diagram.
2. Check that you remember some of the concepts you learnt about in previous grades by going through these quick questions.

QUESTIONS:

1. What is the name of the process when a solid turns into a liquid?

2. What is the reverse process to melting?

3. What can we do to make ice melt quickly?

4. Explain the steps that a solid must go through to become a gas.

5. What is the reverse process of evaporation?

6. When we heat something, are we adding energy to it, or taking energy away?

7. How do you think the particles in a substance behave when we give them more energy?



We will use the model to look at each of these changes more closely. But first, we will look at how the model describes each state of matter.

NEW WORDS

- compress
- collide
- diffuse
- rate
- constant motion
- observation
- forces of attraction
- regular arrangement
- vibrate



VISIT

This video shows us the different ways that particles behave in the solid, liquid and gaseous states.

bit.ly/13mAd4o



2.2 Solids, liquids and gases


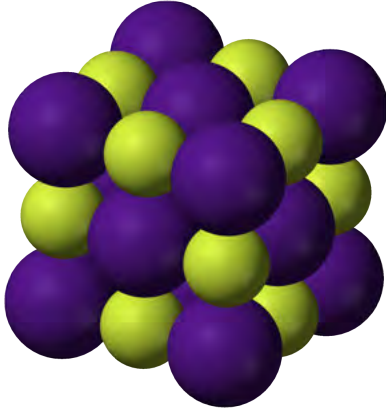
We can use the particle model to help us understand the behaviour of each of the states of matter. We are going to look at each state in turn.

There is one very important thing to remember when we consider the different states of matter. For any matter, the individual particles of that matter are exactly the same in all three states, solid, liquid and gas. It is the *behaviour* of the particles that changes in each state.

The solid state

Solids keep their shape and cannot be **compressed**. Let us see if the particle model can help us understand why solids behave in this way.

In a solid, the particles are packed close to each other in fixed positions. They are locked into place, and this explains why solids have a fixed shape. Look at the following images of sodium chloride (table salt). Do you remember the formula for sodium chloride?

Macroscopic view of sodium chloride	Submicroscopic view of sodium chloride
	
Table salt crystals are hard and have a fixed shape.	Can you see how the chloride atoms (purple) alternate with the sodium atoms (yellow) in a fixed arrangement?

Take a good look at the picture of the particles in a solid (table salt) above. You will see that they are packed in a **regular arrangement**. There are very small spaces between the particles in a solid.

Particles are held together by **forces of attraction**. In solids, these forces are strong enough to hold the particles firmly in position.

Does that mean the particles in a solid do not move at all? No. The particles in a solid move a little bit. They **vibrate** in their fixed positions. The more energy the particles have, the faster and more strongly they vibrate.

Do you see how we have used the particle model of matter to explain the properties of solids that we can **observe**? For example, the particles in solids are closely packed and have strong forces between them explains why solids have a fixed shape and you cannot compress them.

The liquid state

An important characteristic of liquids is that they flow. They fill containers they are poured into. Liquids are also not very compressible. How can these properties be explained?

In the liquid state, particles do not have fixed positions. They move about freely, but they stay close together because the forces of attraction between them are quite strong, but not as strong as in solids.

Have you noticed how a liquid always takes the shape of the container it is in? Within the liquid, the particles slip and slide past each other. This is why liquid flows. Their particles are free to move around, filling the spaces left by other particles. Look at the image of the juice being poured. Let's zoom in and have a look at what the particles are doing as the juice is poured.



Orange juice is a liquid, which can be poured.

The particles in a liquid have small spaces between them, but not as small as in solids. The particles in a liquid are loosely arranged which means they do not have a fixed shape like solids, but they rather take the shape of the container they are in.

3. The next particle can move into the opening leaving a new opening behind it.

2. An opening is left.

1. This particle falls down due to gravity.



The speed at which the particles move around inside the liquid depends on the energy of the particles. When we heat a liquid, we are giving the particles more energy and speeding them up.

In gases, the particles move at even greater speeds.

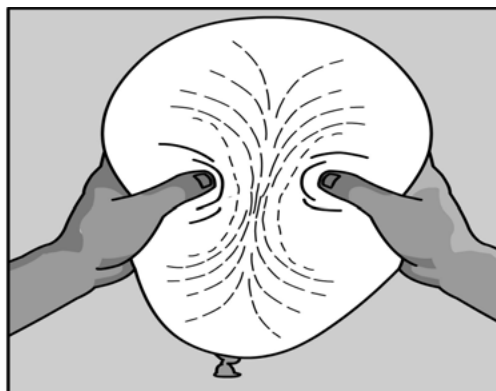
The gaseous state

Gases spread out quickly to fill all the space available to them. Think of when you blow up a balloon. The air that you blow into the balloon fills up the whole balloon. A gas will fill the entire space that is available to it. This is because the particles in a gas have no particular arrangement.

Gases do not have a fixed shape. Think about the balloon again: the gas fills the entire space inside the balloon. You can squeeze the balloon, changing the shape.



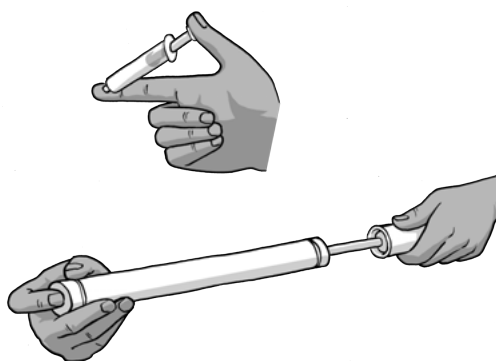
Gases fill the space available to them.



Gases do not have a fixed shape.

Gas particles move very fast, much faster than in solids and liquids. The particles in a gas possess a lot of energy.

Have you ever tried to compress the gas in a syringe or in a bicycle pump? Why do you think you can compress the gas?



In gases, the forces between particles are very weak. This explains why the particles in gases are not neatly arranged. They are not held together tightly and there are large spaces between them. These spaces are much larger than in the solid and liquid state.

Gases can be compressed, because their particles can be forced closer together. Look at the photo of a scuba diver underwater. Do you see the tank on his back? He uses this tank to breathe underwater. A scuba diver can stay underwater for almost an hour. How do you think he can get enough air to breathe for a whole hour from a small tank like that? Discuss this with your class.




A scuba diver underwater with a tank of air.




ACTIVITY: Comparing solids, liquids and gases

Let's summarise what we have learnt about what the particle model of matter tells us about solids, liquids and gases.

INSTRUCTIONS:

1. Use the images of the different states to help you, and go back over the text in your workbook.



	Solid	Liquid	Gas
Arrangement of particles			
Movement of particles			
Forces between particles			
Spaces between particles			

QUESTIONS:

1. Use the particle model of matter to explain why solids have a fixed shape, but gases fill the shape of the container they are in.

2. Use the particle model of matter to explain why you can compress a gas easily, but you cannot compress a liquid very easily.

3. Think of a bag of cake flour. You can pour the cake flour out of the bag and into a mixing bowl. Does this mean the flour is a liquid? Explain whether you think the cake flour (and all powders) are solids or liquids.

VISIT

A video explaining the difference between the solid, liquid and gaseous states of matter.

bit.ly/15frMav



Diffusion

Have you ever noticed how quickly smells travel? Perhaps you have walked past a rubbish bin, and smelled the garbage.



You can often smell garbage bins when you walk past them.



Has anyone ever set off a stink bomb near you?!

Have you ever smelled a stink bomb? When you smell these things, how do the 'stink bomb' or 'garbage' particles reach your nose?

Most smells travel fast, because their particles mix with air and get into our

noses when we breathe. We say that the particles **diffuse** through the air.

In Gr. 7 we learnt about different kinds of mixtures. In the next investigation we are going to explore whether particles mix faster when they are in the liquid state or in the gas state. This is called the **rate of diffusion**. What would your prediction be?

INVESTIGATION: Comparing the diffusion of particles in a gas and in a liquid

INVESTIGATIVE QUESTIONS:

1. Do particles diffuse (mix) faster when they are in the liquid state or in the gaseous state? Which particles will mix more quickly: gases or liquids?
2. Do particles diffuse faster with or without mixing?

HYPOTHESIS:

What are your predictions? Do you expect liquids to mix more quickly than gases, or the other way around? Will stirring influence the speed at which gases mix? Write down your hypothesis below.

IDENTIFY VARIABLES:

This is not a **controlled experiment** as we are not measuring the rates of mixing of the liquids and gases under exactly the same conditions. We will make a simple comparison of the mixing rates, by seeing how long it takes each to mix under two different sets of conditions.


MATERIALS AND APPARATUS:

- large glass beaker or other large clear glass container
- dropper
- food colouring or ink
- tap water
- vanilla essence
- shallow dish or saucer

METHOD:


Part 1: How fast do liquids mix?

1. Fill a large, clear container with tap water and place it where everyone can see it.
2. Use a dropper to place one or two drops of the food colouring in the water.
3. Record the time at which the colouring is added to the water.
4. Look carefully at the two liquids mixing, and write your observations below. Allow the liquids to mix without any stirring.
5. Record the time when the liquids are fully mixed, in other words, when the colour is uniformly spread throughout the water.



TAKE NOTE

When we talk about a **rate**, we are measuring how something changes in relation to another factor, such as time. Another example is speed measured in km/h - this is a rate of how distance in kilometres changes over a period of time (hours).



Part 2: How fast do gases mix?

This experiment should be performed with the windows closed.

1. Raise your hand as soon as you can smell vanilla essence.
2. Pour some vanilla essence into the saucer.
3. Record the time when the vanilla essence is poured out.
4. Record the time when the first learner puts up his/her hand to indicate that they can smell the vanilla essence.
5. Record the time when roughly half of the learners in the class have their hands up, to indicate that they can smell the vanilla essence.
6. Record the time when the learners at the back of the class first smell the vanilla essence.
7. If there is enough time during your next Natural Sciences lesson, repeat steps 1-5. You should do everything exactly the same, but this time, you should move your arms and try to 'wave' the air towards the back of the class.

RESULTS AND OBSERVATIONS:

1. What did you observe in the container immediately after the liquids were mixed?

2. How long did it take for the liquids to be fully mixed, until the colour was uniformly spread throughout the water?

3. When you did NOT wave your arms during the experiment:

- a) How long did it take until the first learners smelled the vanilla essence molecules?


- b) How long did it take until the last learners smelled the vanilla essence?

4. When you DID wave your arms during the experiment:

- a) How long did it take until the first learners smelled the vanilla essence molecules?

- b) How long did it take until the last learners smelled the vanilla essence?

5. Draw a table with your results for the vanilla essence experiment. You can choose your own column and row headings. Remember to give your table a heading.



ANALYSIS AND EVALUATION:

1. Did anything go wrong during the experiment?

2. Can you think of anything that could have improved this experiment?

CONCLUSIONS:

What are your conclusions? (What are your answers to the investigative questions?)

In this investigation we explored the rates at which particles diffuse. What do you think happens at the particle level when two substances mix?


VISIT

An interesting video that explains what diffusion is and how it occurs.

bit.ly/13mAMvi

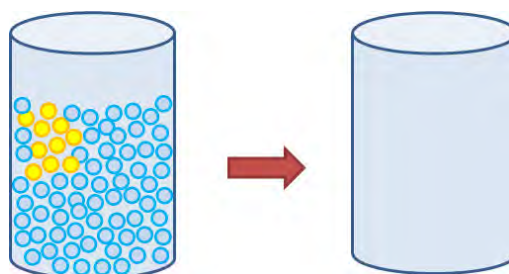


In the photos, we see a yellow liquid being added to a colourless one. Notice how the yellow liquid swirls and spreads out as the yellow particles mix with the colourless particles. Of course we cannot see the particles, but we can make a macroscopic observation (something we can see with the naked eye) of the process.



What will the mixture look like when the coloured particles are uniformly spread out amongst the water molecules?

What will the mixing process look like on particle level? The following diagram represents one of the glasses pictured above, containing a colourless liquid (represented by the blue circles) to which a yellow liquid (represented by the yellow circles) is added. The glass on the left shows the particles in the mixture directly after the yellow liquid was added to the colourless liquid. The glass on the right is empty. You must draw the particles in the mixture after the yellow liquid has spread **uniformly** throughout the colourless liquid.

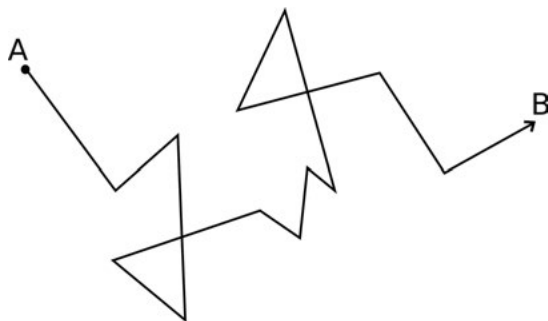


When you were watching the coloured liquid mix with the water in the last investigation, was it possible to predict the direction in which the colour would swirl? What made the two liquids mix?

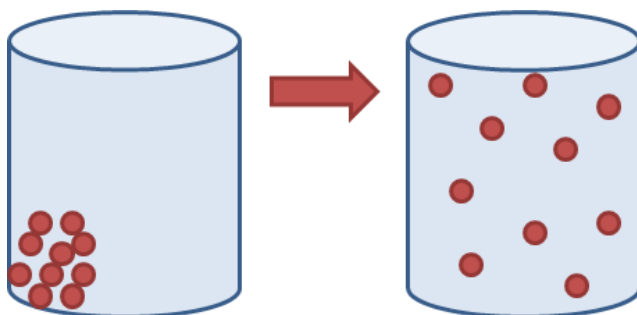
Random movement of particles

The particles in liquids and gases are constantly moving. Their movements are unpredictable: we say the particles move **randomly**. It is the random movement of the particles that allow liquid and gaseous substances to diffuse.

The following zigzag diagram explains what is meant by 'random' movement. When a gas particle travels from point A to point B, it will collide with many other gas particles along the way - up to eight billion collisions every second! Only a few of those collisions are shown in the diagram. Each time the particle collides, it will change direction. This means the actual distance travelled by the particle is much further than the direct distance between points A and B.



The process responsible for the mixing and spread of particles in a gas and liquid is called diffusion. We can define diffusion as the random movement of liquid or gas particles from a high concentration to a low concentration to spread evenly. The following diagram illustrates the idea in a very simple way: it shows the particles in a gas spreading out over time to fill all the space that is available to it.



In the diagram on the left some particles were placed into an empty container. At first they were close together (at high concentration), but over time they spread out to fill the entire container.

Factors that affect the rate at which particles diffuse

The speed at which particles diffuse depends on several factors, namely:

- The mass of the particles: lighter particles will diffuse faster, because on average they move faster.
- The state of the particles: the particles in a gas are always moving fast; we say their average speed is high. The particles in a liquid travel more slowly.
- The temperature of the particles: temperature is a measure of the kinetic energy of the particles. The higher the temperature, the more energy the particles have and the faster they will move and diffuse.
- The size of the spaces between particles: If there are large spaces between the particles of one substance, the particles of another substance can move into those spaces easily.

Particles diffuse because they are in **constant motion**. We found that gas particles diffused much more quickly than the liquid particles in the last investigation. Can we explain that result using the factors listed above?

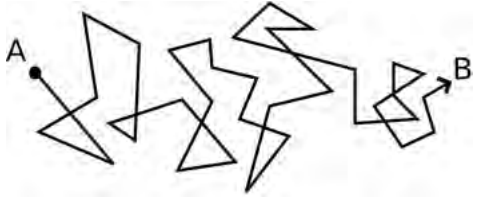
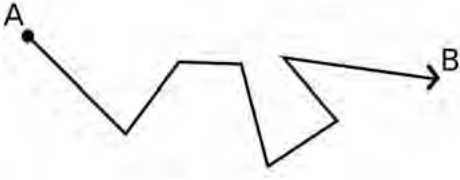
Think of it in this way: imagine you are trying to move through a crowd of people. The closer they are together, the more often you are going to have to change direction to make it through the crowd and the longer it will take to get to your destination.



Imagine walking through this crowd of people. This is similar to diffusion through a liquid.

A particle in a liquid cannot travel very far before colliding with another particle, because the particles are so close together. That means the liquid particles are constantly colliding and are sent into a new direction with each collision. This means the rate of diffusion is much slower in liquids than in gases, because the particles of a gas are further apart and collide much less. Gas particles can travel further without being sent in a different direction by a collision. This is why gases diffuse more quickly.

The following table shows similar zigzag drawings as you saw before, but now you can see the difference between the random movement of a particle through a liquid and through a gas. It will take the particle much longer to travel from A to B in the liquid than in the gas.

Liquid	Gas
	

Now that we have a better idea of the behaviour of particles in the different states of matter, we are ready to look at how particles behave when matter changes its state.

2.3 Changes of state

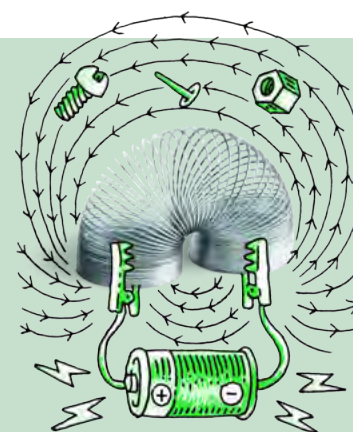
In science, a change of state refers to a change in physical state (e.g. when a liquid changes to a solid). What is this process called?

It is always a good idea to learn new things in terms of what we already know. We are going to start this section with a crossword puzzle to revise what we already know about changes of state.

ACTIVITY: Changes of state

INSTRUCTIONS:


1. The crossword puzzle below can be completed by following the clues given below.
2. The 'Down' clues are for the vertical words in the puzzle and the 'Across' clues are for the horizontal words in the puzzle.
3. All the clues have to do with changes of state of materials, and the first letter of every word has been filled in to help you.



NEW WORDS

- vapour
- vigorous
- energetic
- transformation
- condensation
- evaporation





Here are the clues:

Down:

1. If we want to turn steam into water we have to _____ it. (4 letters)
2. The process of turning a liquid into a gas is called _____. (11 letters)
3. The particles of a _____ have large spaces between them. (3 letters)
4. The particles of a _____ are locked in position by strong forces. (5 letters)
5. A solid will change into the liquid state at its _____ point. (7 letters)
7. The liquid state of ice is called _____. (5 letters)
9. The gaseous state of ice is called _____. (5 letters)
11. If we want to turn water into steam we have to _____ it. (4 letters)

Across:

1. The process of turning a gas into a liquid is called _____. (12 letters)
6. The particles of a _____ are close together but they can flow and slide over each other. (6 letters)
8. The boiling point of a liquid is the temperature at which that liquid will start to _____. (4 letters)
10. The solid state of water is called _____. (3 letters)
12. Freezing and melting are the _____ of each other. (7 letters)
13. _____ water turns it into ice. (8 letters)



How can we change matter from one state to another?

VISIT

Misconceptions about temperature (video).

bit.ly/19Q7VGZ



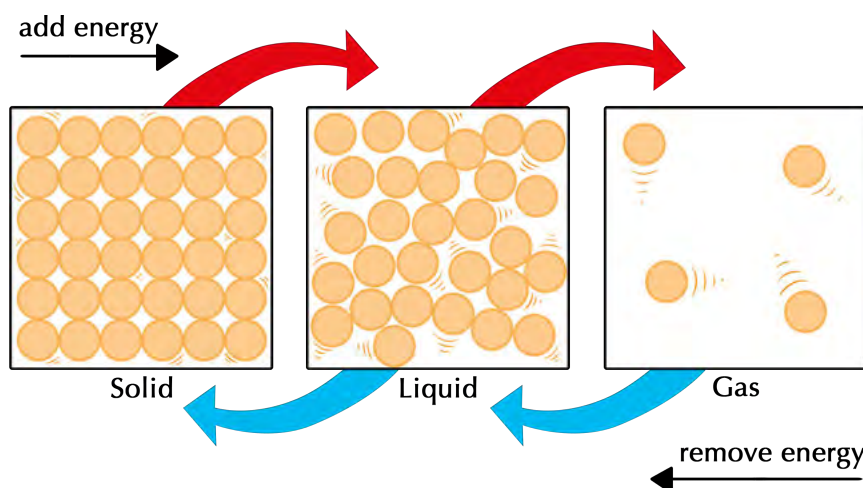
NEW WORDS

- boiling
- melting
- evaporation
- melting point
- boiling point



Changes of state involve energy

For matter to change from one state to another, its particles must gain or lose energy. The following diagram shows us that to change the state of a substance, it must either be heated or cooled.



Melting and evaporation are processes that require heating; condensation and freezing are processes that require cooling.

First, let us look at what happens to particles when they are heated.

Melting and evaporation

When a solid is heated to reach its melting point, it will change into a liquid. This is a process that we are all familiar with, because we have seen how ice melts.



A melting ice cube.

For a solid to change into a liquid state, the particles in the solid need to be freed from their fixed positions in the solid state. How could that occur?

Imagine you are holding hands with a group of other learners. Everyone is jumping in place, much like a solid particle vibrating in a fixed position. The more **energetically** and randomly everyone jumps, the more difficult it will be for everyone to keep holding hands.

When a substance is heated, the particles are given more energy. By giving the vibrating particles in a solid more energy, their vibrations will become more and more **vigorous**, until the solid particles are able to shake themselves loose from their fixed positions. The forces between the particles are no longer able to hold them together tightly, and the solid **melts**.

What will happen if we add even more energy to the particles? The particles (which are now in the liquid state) will whizz around faster and faster as they heat up. Soon some of the particles near the surface will have enough energy to escape out of the liquid. Once they are free from the forces that hold them together in the liquid state, they enter the gas (or gaseous) state. The gaseous state is sometimes called the **vapour** phase, which forms when a liquid **evaporates**. This is why the gaseous state of water is sometimes called water vapour.



Clothes hanging outside.

The higher the temperature of the liquid, the faster it will evaporate. A puddle of water will evaporate much faster from the hot pavement than it would from a cool kitchen floor! Why do you think we hang washing outside in the sunshine to dry?

Is there a difference between evaporation and boiling?

Evaporation takes place at all temperatures, while boiling occurs at a specific temperature, called the **boiling point**. When a liquid is heated to its boiling point, bubbles form in the liquid and rise up to the surface. When this happens, we say the liquid is boiling. Evaporation occurs only on the surface of the liquid, while boiling occurs throughout the entire liquid. Can you remember learning about boiling points in Gr. 7?



Boiling water.

What is the boiling point of water at sea level?

Look carefully at the picture of the boiling water above. What do you think is inside the bubbles?


Next, we will look at the changes of state that can happen when we cool a substance.

Condensation and solidifying

When a gas changes to a liquid, the state change is called **condensation**. Condensation is the opposite of evaporation. Have you noticed the little droplets of water that form on the outside of a cold glass of water? They are formed by condensation.

When the temperature of a gas is lowered, it takes energy away from the gas particles. The movement of gas particles slows down as their energy decreases

and they will start to experience attractive forces. These forces cause them to move closer to each other and they eventually return to the liquid state.



Water vapour in the air has condensed on the cold surface of this glass window.




Birds and animals in groups tend to huddle together when they get cold.

What do groups of people, animals, or birds do when they get cold? They huddle together! In the same way gas particles that are cooled down condense and come together to form water droplets.

What would happen if we cooled the liquid even more? By cooling the liquid, we would be removing energy from it. As the liquid particles lose energy, their movement slows down even more. As their movements become slower and slower, the attractive forces between become stronger. The particles eventually 'lock' into position in the solid state. They can no longer move freely and are only able to vibrate in their fixed positions. We say the liquid has **solidified**.

DID YOU KNOW?

The volume of water expands about 9 % when it freezes into ice.



INVESTIGATION: What happens when we heat and then cool candle wax?

AIM: What is your aim for this investigation?

HYPOTHESIS: What do you propose will happen in this investigation? This is your hypothesis.

MATERIALS AND APPARATUS:


- empty tin can or foil pie dish
- bunsen burner or spirit lamp
- tripod stand
- wire gauze
- candle wax
- matches



METHOD:

1. You need to write the method for this investigation. you will either plan this in a group, or your teacher might do the investigation as a demonstration. You must write down the steps for the investigation. They must be clear and allow someone else to repeat your investigation.

2. Draw a diagram of your setup for the investigation in the following space. Remember to give your diagram a heading and to provide labels.

**RESULTS AND OBSERVATIONS:**

1. What state of matter is the candle wax in at room temperature (at the start of the investigation)?

2. What happened when you heated the candle wax?

3. What happened when you cooled the candle wax?

4. Would you say the melting point of candle wax is higher or lower than room temperature?

CONCLUSION:

Write a conclusion for this investigation. You must make reference to the particle model of matter in explaining the changes of state that occurred.



In the next activity we are going to have some fun with water balloons, but not in the usual way. We are going to blow up a balloon without blowing into it and we will make it rain inside the balloon! Sounds like magic? No, just science!

ACTIVITY: Hot water balloon

MATERIALS:

- large party balloon (plus spares)
- 2 teaspoons of tap water
- microwave oven
- oven gloves
- safety goggles
- large bowl of ice cold water



Let's have some fun with balloons!



INSTRUCTIONS:

1. Before you begin, put on your safety goggles.
2. Pour water into the balloon and squeeze out all the air before tying a knot in the neck of the balloon.
3. Place the balloon in the microwave oven and heat on full power until you see the balloon starting to expand. Only a few seconds of heating should be enough for the balloon to reach its full size (if you heat it for too long it might pop). What do you observe?

4. Remove the heated balloon with the oven glove. Shake it gently. If you are very quiet you will hear something happening inside the balloon. What does it sound like?

5. Place the balloon in the bowl of cold water. What do you observe?

QUESTIONS:

1. Did the balloon have any air inside it at the start of the experiment?

2. What made the balloon expand?

3. What is the name of the gas that made the balloon expand?

4. What did you hear inside the balloon when it started to cool down?

5. What caused the sound?

6. Where did the water droplets inside the balloon come from?

7. What happened to the balloon when it was cooled down in the cold water?

8. Which changes of state did the water undergo in this experiment?



Next, we are going to look at three important properties of matter that are useful to scientists, namely density, mass and volume. These three properties are all related to each other.

2.4 Density, mass and volume

You have probably heard the terms **mass** and **volume** before in Natural Sciences and Mathematics. But what about **density**? Have you ever used this word before? Perhaps you have heard someone describe a cake as very dense? What does this mean?

This section introduces us to **physical quantities** that are important when we study science. Two of these quantities, namely mass and volume, are fundamental properties of matter. We are going to discuss them first, then we will introduce density. Density is another property of matter that is very closely related to the first two.

Mass tells us 'how much' matter we have



Look at the picture of a bag of rice.
How much rice is in the bag?

The mass of an object or a substance tells us how much matter it consists of. The greater the mass of an object, the more matter it contains.

Mass is measured in kilograms (kg). When we measure the mass of small objects or small amounts of matter we often measure in grams (g) or even milligrams (mg).

- One kilogram is the same as 1000 grams.
- One gram is the same as 1000 milligrams.

How many milligrams are in one kilogram?



Gold bars each with a mass of 250 g. How much is this in kg?

If one gold bar has twice the mass of another gold bar, then it contains twice as many gold atoms. The mass of an object stays the same, no matter where it is. Unless a piece of it is cut off, the same gold bar will have the same number of gold atoms whether it is in Gauteng, Bloemfontein, London, or the Moon. That means the mass will always remain constant.

Volume tells us 'how much space' matter takes up

The amount of space that an object occupies is called its volume. Volume is measured in litres and is calculated by multiplying the length, width and height of an object. A litre is the space inside a cube that is 10 cm wide, 10 cm long and 10 cm deep.

NEW WORDS

- mass
- volume
- density
- physical quantity



VISIT

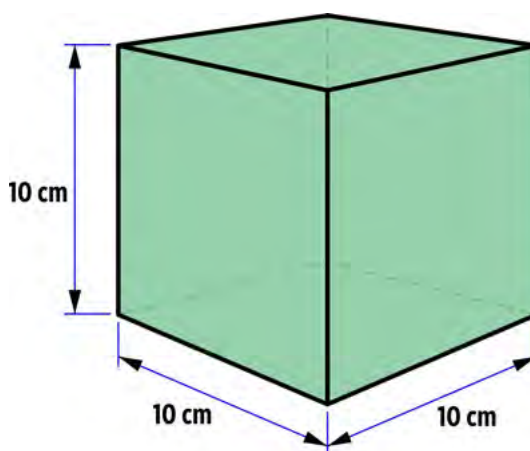

An interesting video on how to define a kilogram (by using the world's roundest object!)

bit.ly/19e6zGs



TAKE NOTE

When calculating volume, $1\text{ cm} \times 1\text{ cm} \times 1\text{ cm} = 1\text{ cm}^3$. This is the same as 1 ml. That means that $10\text{ cm} \times 10\text{ cm} \times 10\text{ cm} = 1000\text{ cm}^3$ which equals 1000 ml or 1 litre.



This cube has a volume of 1 litre.

TAKE NOTE

We can also use symbols for density (D), mass (m) and volume (V), so the equation to calculate density can be written as $D = m/V$.



A carton of milk and a bottle of juice.

What is the volume of milk in the carton and the volume of juice in the bottle in the following photo?

When we measure small volumes we use millilitres (ml) as the volume unit. 1000 millilitres is the same as one litre.

Density tells us how 'tightly packed' a material is

Density is a measure of how much mass of a material fits into a given volume. We say density is the ratio of mass to volume. We can write a mathematical relationship to show this ratio as follows:
 $\text{density} = \text{mass}/\text{volume}$



A dense piece of cake.

If we have two materials with the same volume, the material with a higher mass will be more dense. It will have a higher density. We can think of density as the 'lightness' or 'heaviness' of objects of the same size.

Think back to the slice of cake that we spoke about as being dense. This is how we can use the word density in everyday language. A piece of cake that is described as dense will feel heavy.

In the next activity we are going to compare different materials that have the same size (or volume), but different densities.

ACTIVITY: Which material is more dense?


MATERIALS:

A variety of objects that have the same size (volume) but different densities: sponge, polystyrene, wood, metal, brick or stone.

INSTRUCTIONS:

1. Handle all the different materials and compare their masses. You do not have to measure their masses on a scale. You can just feel how heavy they are in your hand.
2. Arrange them in order of increasing density. Do this activity as a group and discuss why some materials are more dense than others.
3. If you do have access to a triple beam balance, measure the masses of each of the objects.

QUESTIONS:



1. Imagine a brick and a loaf of bread that are the same size. Would the brick or the bread have a greater volume?

2. Which one, the brick or the bread, has more mass?

3. Which one, the brick or the bread, would have the greater density? Explain your answer.



VISIT


Learn more about density
with this simulation
bit.ly/142ixv5



2.5 Density and states of matter

We have now learnt about the three states of matter and the properties of each. We know one of the ways in which solids, liquids and gases are different from each other has to do with the distances between the particles in each respective state. The particles in gases are much further apart than the particles in liquids or solids.

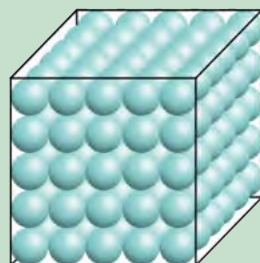
Does this mean the different states of matter have different densities? We will find out in the next activity.



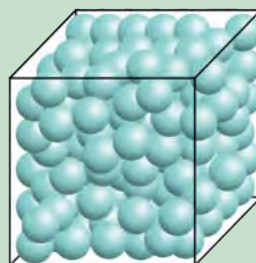
ACTIVITY: Which has the highest density: a solid, a liquid or a gas?

INSTRUCTIONS:

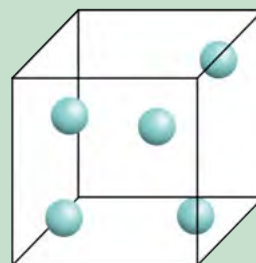
1. Compare the three identical containers below.
2. They all have the **same volume** and contain the **same material**
3. Container A contains a solid material, container B contains the liquid state of that material and container C the gaseous state of the same material.
4. Answer the questions that follow.



A.



B.



C.

QUESTIONS:

1. Which container (A, B or C) contains the greatest number of particles?
Which container contains the smallest number of particles?

2. Which container (A, B or C) contains the material with the greatest mass?
Which container has the smallest mass? Why do you say so?

3. Which state has the highest density: solid (in container A), liquid (in container B) or gas (in container C)? Which state has the lowest density? Why do you say so?



We have just performed a conceptual activity (a 'thinking' activity) in which we compared the densities of the three states of the same material.

The high density of a solid material explains why it cannot be compressed. The particles in a solid are tightly packed and cannot be squeezed closer together into a smaller volume.

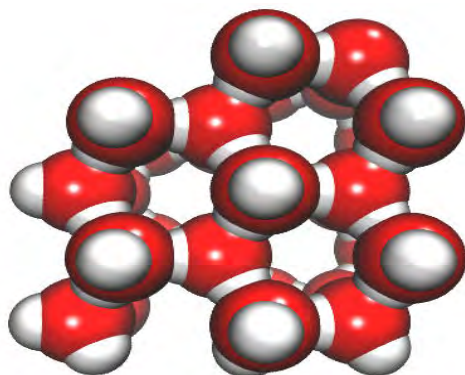

Liquids are also very dense. The density of a liquid is roughly the same as the density of the solid state of the same substance. This is because their particles are close together, even though they are not locked into fixed positions. Most liquids cannot be compressed into smaller volumes.



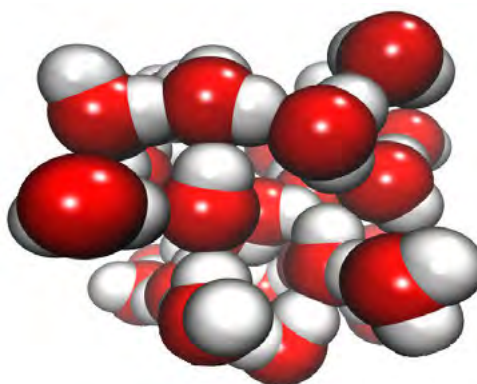
Ice blocks floating in a glass of water.

Liquids are slightly less dense than their solid states but water is an important exception. Have you ever wondered why your ice cubes float on top of the water in your glass?

The solid state of water (ice) is less dense than the liquid, because in ice the water molecules are packed in a unique way. The image below on the left shows that water molecules in ice are packed in such a way that there are open spaces between them. On the right, the same water molecules are shown in the liquid state.




Water molecules in the solid state (ice).



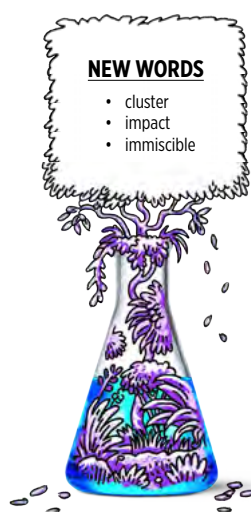
Water molecules in the liquid state.

Do you see how there are bigger spaces between the water molecules in a solid than in a liquid? This also helps to explain why icebergs are able to float in the sea.



A big floating iceberg in the Arctic.

Have you ever seen a frozen bottle of water with the ice pushed up out of the bottle? Why did the water push out of the bottle when it turned to ice?



Gases are not very dense at all because of the large spaces between the gas particles. That means they contain a small number of particles in a large volume. This why gases can be compressed: their particles can be squeezed closer together to fit into a smaller volume. Think back to the air that is compressed to fit inside a gas tank for a scuba diver.

In the activity 'Which has the highest density, a solid, a liquid or a gas?' we compared the densities of different states of the same material. This is an easy comparison because the particles in the different states are identical. By comparing the number of particles in the same volume of each state, we can determine the density of each state.

The densities of different materials are slightly more difficult to compare, because different materials consist of particles with differing masses.

2.6 Density of different materials

We are now going to do a practical activity (a 'doing' activity) to compare the densities of a solid, a liquid and a gas. It would be quite difficult to compare the three states of the same material, as the material would have to be at three different temperatures to be in three different states! For this reason we will compare three different materials: sand, water and air.



INVESTIGATION: Comparing the densities of sand, flour, water and air

INVESTIGATIVE QUESTION:

Which material has the highest density: sand, flour, water or air?

HYPOTHESIS:

What do you predict: Which material has the highest density: sand, flour, water or air?

IDENTIFY VARIABLES:

1. Which variables must be kept constant to make this a fair test?

2. What is the independent variable? (what is it that you have control over to change in this investigation?)

3. What are the dependent variables? (Which variables will you be measuring?)

MATERIALS AND APPARATUS:

- four identical cups (paper or plastic)
- sand
- flour
- tap water
- triple beam balance or scale

METHOD:

You will be designing this investigation yourself. If you are working in groups, you need to first discuss how you are going to conduct (carry out) this investigation. This is the planning. Write down your proposed method in your notebook or on scrap paper. Discuss this with your teacher. Remember to also think about how you are going to record your results. After you have conducted the investigation, write down your method on the lines provided here. Summarise each step in sequence and number the steps.

RESULTS AND OBSERVATIONS:

What were the results of your investigation? Summarise them below. You can draw a table. If you were able to measure the mass of each cup, show your calculations for the density of each material.

ANALYSIS AND EVALUATION:

1. Did anything go wrong during the experiment? If so, what?

2. Can you think of anything that could have improved this experiment?

3. What steps did you include to ensure fair testing?

CONCLUSION:

What is your conclusion? (What is your answer to the investigative question?)



In the last investigation we saw that two solids, namely sand and flour have different densities as they are different materials. But what about liquids? Do all liquids have the same density or does the type of material of the liquid affect the density?

Have you ever noticed that oil floats on water?



Oil floats on water.



This homemade salad dressing contains oil that floats on top.

VISIT

Create your own fluid simulation of oil and water.


bit.ly/15Ry2LR



When you mix oil and water, as in the picture of the salad dressing the two materials will eventually separate because they do not mix well. They are **immiscible**. When they separate, the oil will always float on top. The two separate layers of water and oil are referred to as 'phases', the oil phase and the water phase.

Oil floats on water for two reasons:

- A cup of oil has less mass than a cup of water. The oil is less dense than water. This makes oil float on water, like a cork or an air-filled rubber duck floats on the surface of the water.



- Oil does not dissolve in water. The oil molecules **cluster** together and float on the surface. If a large amount of oil is poured into water, the oil will spread out and form a layer on the surface of the water. Oil that is spilled into the ocean or a lake spreads over a huge area. It poisons many animals, birds, fish and plants and is very expensive to clean up. That is why oil pollution has an extremely negative **impact** on our environment.



Oil pollution forms a thin layer on the surface of the sea water. The oil can spread out over a huge area as the layer is thin and it floats on top of the water.



A sea bird trapped in the oil from a spill. The oil gets in between the bird's feathers, sticking them together and preventing the bird from flying.

When two substances are in the same container, but not mixed (like oil and water for instance), they will form two layers. In a certain sense, water and ice also form two 'layers'. Which layer will be on top: the one which is more dense or the one which is less dense?

In the next activity we look at how we can layer different liquids on top of each other depending on the densities!

ACTIVITY: Rainbow density column

MATERIALS:

- large glass vase or one litre glass measuring cylinder
- plastic cups
- honey
- golden syrup
- whole milk
- dish washing liquid
- water (can be coloured with food colouring, blue for example)
- vegetable oil
- rubbing alcohol (can be coloured with food colouring, red for example)
- a bolt
- a popcorn kernel
- a cherry tomato
- some plastic beads
- a ping pong ball/polystyrene ball

INSTRUCTIONS:

1. Use the same amount of each liquid. The amount will be determined by the height of the vase or measuring cylinder. Pour equal volumes of each liquid into the cups.
2. If you have access to a scale, measure the mass of each cup with a different liquid. Arrange them in order from heaviest to lightest.

3. Start with the heaviest liquid (honey) and pour it into the container first. Be careful not to let any of it touch the sides of the container.
4. Next pour in the next heaviest until you have poured all the liquids into the container. If you have a pipette, use it to carefully layer the liquids.
5. Stand the column on a desk and carefully drop in the bolt, popcorn kernel, cherry tomato and beads. Take note of where each object settles in the density column.
6. Finally, drop the ping pong/polystyrene ball on top.

QUESTIONS:

1. Use the space provided to make a drawing of the density column that you made in class. Use coloured pencils if you have them. Label each layer. If you measured the mass of each liquid, write the mass in brackets after each label. Draw in the different objects to show where they dropped to in the density column.




VISIT

A video showing how to make a rainbow density column.

bit.ly/14oGnEu





2. Which liquid is the most dense and which is the least dense? Explain your answer.

3. Do you notice any relationship between the mass and density of the different liquids?

4. Arrange the objects from most dense to least dense. Explain how you did this.

5. Why do you think the objects dropped to different levels in the liquid?

6. Which objects are more dense than water? Which objects are less dense than water?

ACTIVITY: Some density calculations

INSTRUCTIONS:


1. Below is a table with some different substances and their densities. Use this information to do the following calculations.
2. Show how you worked out each answer and do not forget to include the units in your answer.

Material	density (g/mL)
water (liquid)	1
ice	0.917
glass	2.6
salt	2.2
chalk	2.36
coal	1.5
cork	0.25

QUESTIONS:

1. You have a 500g block of butter at home. You found out that its volume is 555mL. What is the density of the butter?






2. Which is more dense, salt or chalk?



3. You have a large glass marble and you want to find out what its volume is. You measure the mass and find it to be 50 g. What is its volume?

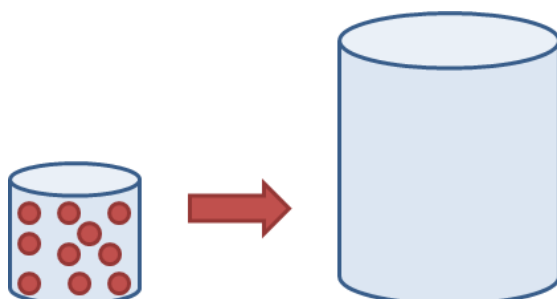


4. You have a piece of coal and a piece of cork which are exactly the same size. They have the same volume of 100 mL. Which one will have the greater mass? Calculate the exact mass of each piece.



We have learnt that the density of a material depends on how tightly packed the particles inside the material are. The more tightly packed they are, the more dense we say they are.

The following diagram represents a container (on the left) that contains a small amount of gas. Imagine that all the gas from the small container is moved into the empty container on the right. Draw the gas particles in the container on the right.



A gas will expand to fill whatever space it is in. In the larger container we will still have the same number of gas particles, but now they are filling a much larger space.

If we take a certain amount of gas from one container and place it into another, larger container, the gas expands to fill the larger container. The same mass of gas is now in a larger volume, the gas now has a lower density.

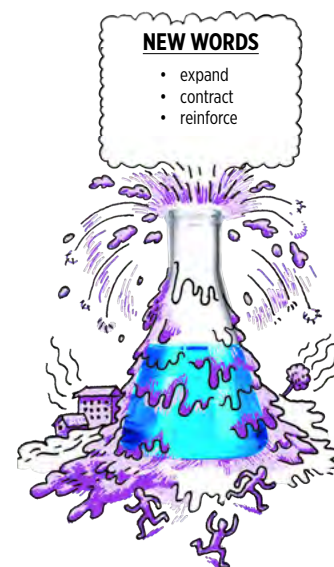
Solids and liquids cannot behave in this way. Their densities will remain more or less constant no matter in which container they are placed. This is because their particles are relatively close together with strong forces between them. But what happens when we heat them? We have learnt that this is the same as giving them extra energy. How will heating them affect the packing of the particles and the density?

In the next section we are going to look more closely at what happens to the particles inside materials when they expand. We are also going to look at the opposite of expansion, namely contraction.

2.7 Expansion and contraction of materials

Have you ever been inside a tin-roofed house? On a hot day, you often hear the metal roof panels groan and creak. Do you know why this happens?

Some materials become slightly larger when they are heated. We say they **expand**. Materials can also shrink slightly when they are cooled. We say they **contract**.





A house with a tin roof.

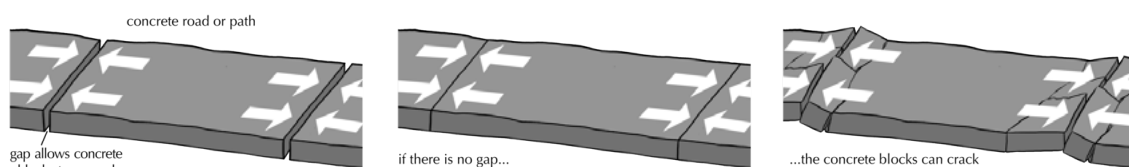
The metal roof panels expand and contract as the outside temperature changes. When this happens, the panels scrape against each other and against the nails that keep them in place. The scraping of metal against metal causes the creaky, groaning noises.

How is it possible for materials to contract and expand? Can you think of an explanation?

To understand this phenomenon, we will look at some examples of expansion. We will then try to explain expansion in terms of the particle model.

Some solids expand more than others. When we choose materials for a new job, it is important to know how much they will expand. This way we can allow for expansion when the materials get hot.

In the following diagram, the picture on the left shows a concrete path or road surface. How have the engineers who built the road allowed for expansion?




Expansion can create forces strong enough to damage materials.

The picture above shows what could happen if no allowance is made for the expansion of the concrete blocks. The forces created by the expansion of the concrete are so strong that the road surface has cracked!



The expansion joint in a bridge.

This is a very important principle to remember when building bridges. When engineers design a bridge, they must allow for contraction and expansion of the materials used to build the bridge. Have a look at the following photo showing a close-up of the gap between the two road surfaces of a bridge. Can you see the interlocking 'teeth'? These allow the bridge to expand and contract while the teeth slide past each other.




ACTIVITY: How much longer?

In this activity we will compare the expansion of different solid materials by drawing a graph. You will need the following information for your graph:

Material	How far a 100 metre length of the material will expand when the temperature increases by 10°C
Brass	19 mm
Iron	12 mm
Steel	11 mm
Platinum alloy	10 mm
Concrete	11 mm
Ordinary glass	11 mm
Ovenproof glass	3,5 mm

Draw a bar graph with 'Expansion' on the y-axis and 'Materials' as categories on the x-axis. Choose an appropriate title for you graph.



QUESTIONS:


1. Which material expands the most upon heating?

2. Which material expands the least?

3. Which solid would be the best material to **reinforce** concrete? (Hint: the reinforcing material should expand as much as the concrete, otherwise it will damage the concrete during expansion.)

4. A man builds a house with large windows set in beautiful frames made of brass. The house is in a region where it gets very hot during summer. Imagine that the owner of the house has a problem: the windows of the house look beautiful in their shiny brass frames but they keep falling out during the summer months. As a scientist, how would you explain this and what would your advice to the owner of the house be? Should the frames be replaced? If so, with which material? What other solutions can you suggest?

5. The following diagram shows a metal ball and ring apparatus. The ring and ball are both made of brass. At room temperature, the ball is just the right size to pass through the ring.



Do you think the ball will still fit through the ring when the ball has been heated?

6. Do you think the brass ball will have more mass when it has expanded? Explain your answer.

-
-
7. What will happen to the brass ball when its temperature drops back to room temperature? Will it be larger than, smaller than, or the same size as before it was heated? Explain your answer.
-
-

Now that we have seen that materials can expand, how can we explain expansion of a material in terms of the behaviour of the particles in that material?

We have learnt that when matter is heated, the particles of that matter will move faster and push further apart from each other. What happens to the particles in matter when it is cooled?

When a substance cools (energy is removed), the particles in that substance will slow down and move closer together. That is why most materials contract when they are cooled.


Expansion and contraction in a thermometer

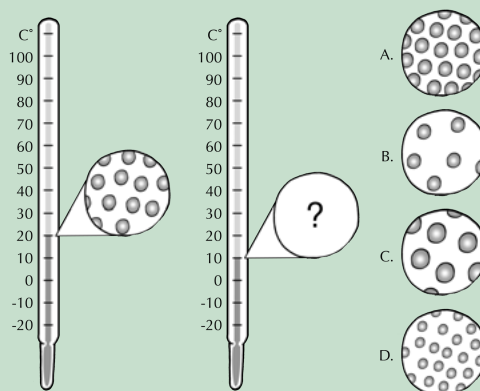
Let's look at a thermometer to understand expansion and contraction.

ACTIVITY: How does a thermometer work?

The common glass thermometer is called a bulb thermometer. All bulb thermometers have a fairly large bulb that is connected to a long, thin tube. The thermometer has a brightly coloured liquid on the inside. Some thermometers contain mercury as it expands and contracts quite a lot when heated or cooled.

Look carefully at the following set of diagrams. They represent the same thermometer at two different temperatures.





QUESTIONS:

1. The drawings represent the particles in the liquid inside a thermometer. What is the temperature measured on the thermometer on the left?

2. The drawing on the right is of the same thermometer, but slightly different. Can you tell the difference?

3. Which of the circles (A, B, C, or D) is the best representation of the liquid in the thermometer on the right? Why did you choose this one?

4. Does a material have less mass when it has contracted? Explain.

5. If the temperature was raised and the thermometer read 30°C , which circle would now best represent the particles in the liquid of the thermometer? Why?

6. How does the volume change when a material is heated? Why?

DID YOU KNOW?

Mercury is the only metal that is a liquid at room temperature.



7. How does the density change when a material is heated? Why?

We have learnt that thinking about matter in terms of the particles inside it can help us to understand many interesting phenomena: the physical properties of the different states of matter, changes from one state of matter to another, density, and expansion and contraction.

How can we measure how much of a liquid or a solid we have? If we want to know how much of a material we have, we can measure its mass. What instrument do we use to measure mass?



We can use a scale to measure the mass of a person or any other object.

TAKE NOTE

When a material is heated, its particles move further apart. When the material cools down, the particles move closer again. Heating and cooling cause the volume of the material to change.



Think back to the investigation comparing the densities of sand, water, flour and air. How did you measure the mass of the air in a cup?

We are now going to shift our focus to gases. Gases have much lower densities compared to solids and liquids. That means a large volume of gas will have a small mass. Small masses can be difficult to measure without a special, super-sensitive scale. Scientists have devised a different way of measuring how much of a gas they have.

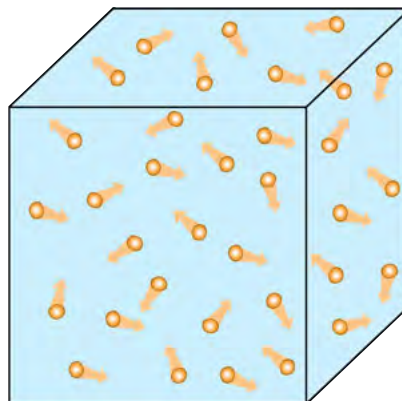
2.8 Pressure

NEW WORDS

- pressure gauge
- air valve

What is gas pressure?

We have learnt that gases contain millions of fast-moving particles. The following picture represents gas particles inside a container.



Gas particles in constant motion, inside a container. They collide with each other and with the inside of the container.

DID YOU KNOW?

Wind is simply moving air! The movement of the air is caused by differences in pressure between one area of the Earth's atmosphere and another. When the wind blows, it is the atmosphere equaling out uneven pressures by moving air from a high pressure area to a low pressure area.

As the particles whizz around, they bump and bounce off each other. They also bump against the inside of the container. The force of the particles bumping against the sides of the container cause a phenomenon called gas pressure. The number of bumps (or collisions) will depend on the number of gas particles in the container. More particles inside the container means more collisions, and more collisions mean a higher pressure.

If we can measure the pressure of the gas, we will have an idea of how much gas is inside the container.

How can gas pressure be measured?

Have you ever seen anyone check the pressure in a car tyre? You may have seen them use a device like those in the photo below. It is called a tyre **pressure gauge** and it is specially designed to measure the air pressure inside a tyre.



A simple tyre pressure gauge.

The round end of the gauge should be pressed against the **air valve** of the tyre. This opens the valve and lets some of the air from the tyre escape into the gauge. The air particles bump against a disc inside the gauge. The force generated by many gas molecule collisions pushes out a bar at the back of the gauge. Can you see it in the picture? For this particular pressure gauge, the pressure inside the tyre is indicated by how far back the bar is pushed out of the back of the gauge. Note the numbers along the bar which allow us to measure the pressure.

Other, more complicated pressure gauges all work in a similar way.



Two more complicated types of tyre pressure gauges for measuring the air pressure inside car tyres. The right one is a digital gauge.



Measuring the pressure inside a tyre using a pressure gauge.



How could we increase or reduce the amount of gas in a container? In the next activity we are going to see if we can understand gas pressure in terms of the particle model of matter.



By blowing air into the balloon, the girl is forcing air particles into it.

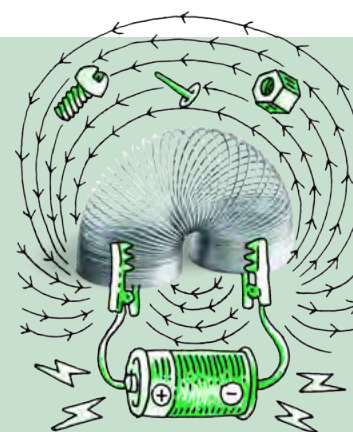
ACTIVITY: Understanding gas pressure

MATERIALS:

- brown paper bags (medium size)
- balloons
- empty plastic cold drink or water bottles (2-litre bottles are preferable)
- bicycle pump and tyre

INSTRUCTIONS:

1. This step requires a brown paper bag.
 - a) Blow up a brown paper bag until it is fully inflated.
 - b) Try blowing it up even more. See if you can make it pop by blowing into it.



- c) Write two or three sentences to describe what it feels like to blow into the bag when it is 'empty', compared to when it is 'full' of air. Does it feel different? Is it more difficult to blow into the bag when it is already full?

2. This step requires a balloon.
- a) Blow up the balloon until it is the size of an orange. Pinch it closed but do not tie a knot in the top.
 - b) Now blow up the balloon as large as you can.
 - c) Try blowing it up even more. See if you can make it pop by blowing into it.
 - d) Write two or three sentences to describe what it feels like to blow into the balloon when it is 'empty', compared to when it is 'full' of air. Does it feel different? Is it more difficult to blow into the balloon when it is already full?
 - e) Tie a knot in the top of an inflated balloon. Leave the balloon in the classroom and examine it again after one week. Does it look the same as when you inflated it a week ago? Perhaps it looks a bit like this balloon in the following photo:



A deflated birthday balloon.

- f) Remember to write your observations below.

3. This step requires a balloon and an empty plastic bottle.
- a) Stretch the balloon over the top of the bottle, with the balloon hanging down into the bottle.
 - b) Blow into the balloon. What do you observe? Can you blow up the balloon?

- c) Now make a small hole in the bottom of the bottle. Blow into the balloon again. What do you observe now?

4. This step requires a bicycle tyre and pump.
- Use the pump to pump air into the tyre. Continue to pump until it becomes too difficult to pump any more air into the tyre.
 - Write 1 or 2 sentences about your observations.

QUESTIONS:

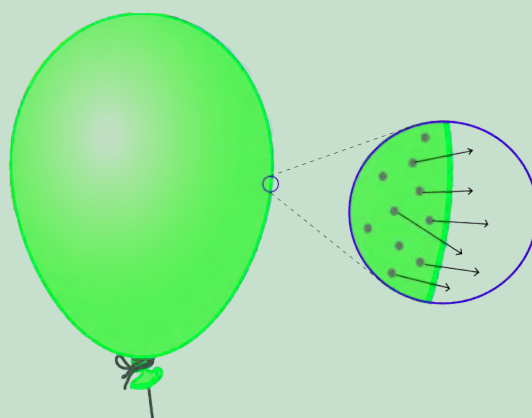
Try to answer the following questions by explaining what is happening to the air particles in each case. Use the words 'particles', 'collisions' and 'pressure' in your answers.

1. What happens when you blow up a paper bag or a balloon, or when you pump air into a tyre?

2. When you blow into a paper bag, why does the bag pop or start to leak air after a while?

3. When you blow into a balloon that is fully inflated, why does the balloon pop?

4. Why do you think the balloon became smaller when it was left for a week? The following diagram should provide a hint:



5. Explain why you think it was impossible to blow up the balloon inside the bottle? Why was it possible to blow up the balloon when there was a hole in the bottle?

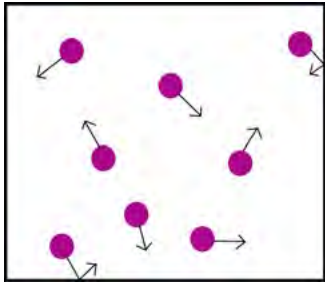
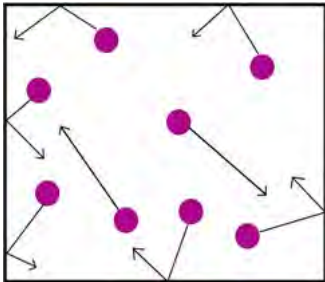
6. Why does it become more and more difficult to pump air into the bicycle tyre?



How does heating or cooling a gas change its pressure?

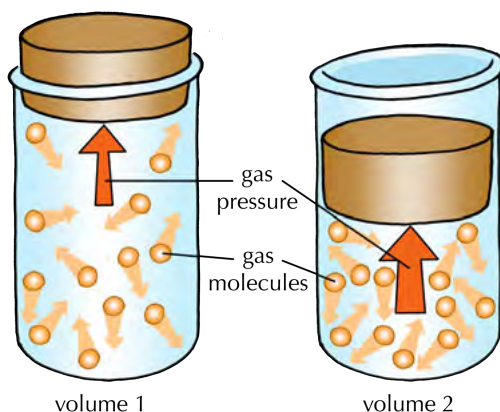
If the gas is heated, the particles will move faster as they gain more energy. That means they will collide with the inside of the container more often and with more force. This causes an increase in pressure.

If the gas is cooled, the particles will move more slowly, because they will have less energy. The gas pressure will decrease, because the particles will bounce against the inside of the container less frequently and with less force. Look at the following table which illustrates this.

Cool gas	Hot gas
	
Fewer and less energetic collisions.	More and more energetic collisions.

How does changing the volume of a gas change its pressure?

When a gas is squeezed into a smaller volume, the particles have less space to move. This is shown in the diagram below. Have you noticed that when people are squashed into small spaces, they bump into things more often? In the same way, the gas particles will collide more often with each other and with the inside of the container if they have less space to move in. More collisions means increased pressure!



We have learnt that a gas will expand to fill all the available space. So, what will happen if we take a certain amount of gas out of one container and place it into another container that is twice as large?

We still have the same number of gas particles, but now they are inside a much larger volume. There is twice as much space between the molecules as there was in the smaller container.

What has happened to the density of the gas? Has it increased, decreased or stayed the same?

In this chapter, we learnt how many different physical properties of matter can be better understood when we think in terms of the behaviour of the particles in the matter.



SUMMARY:

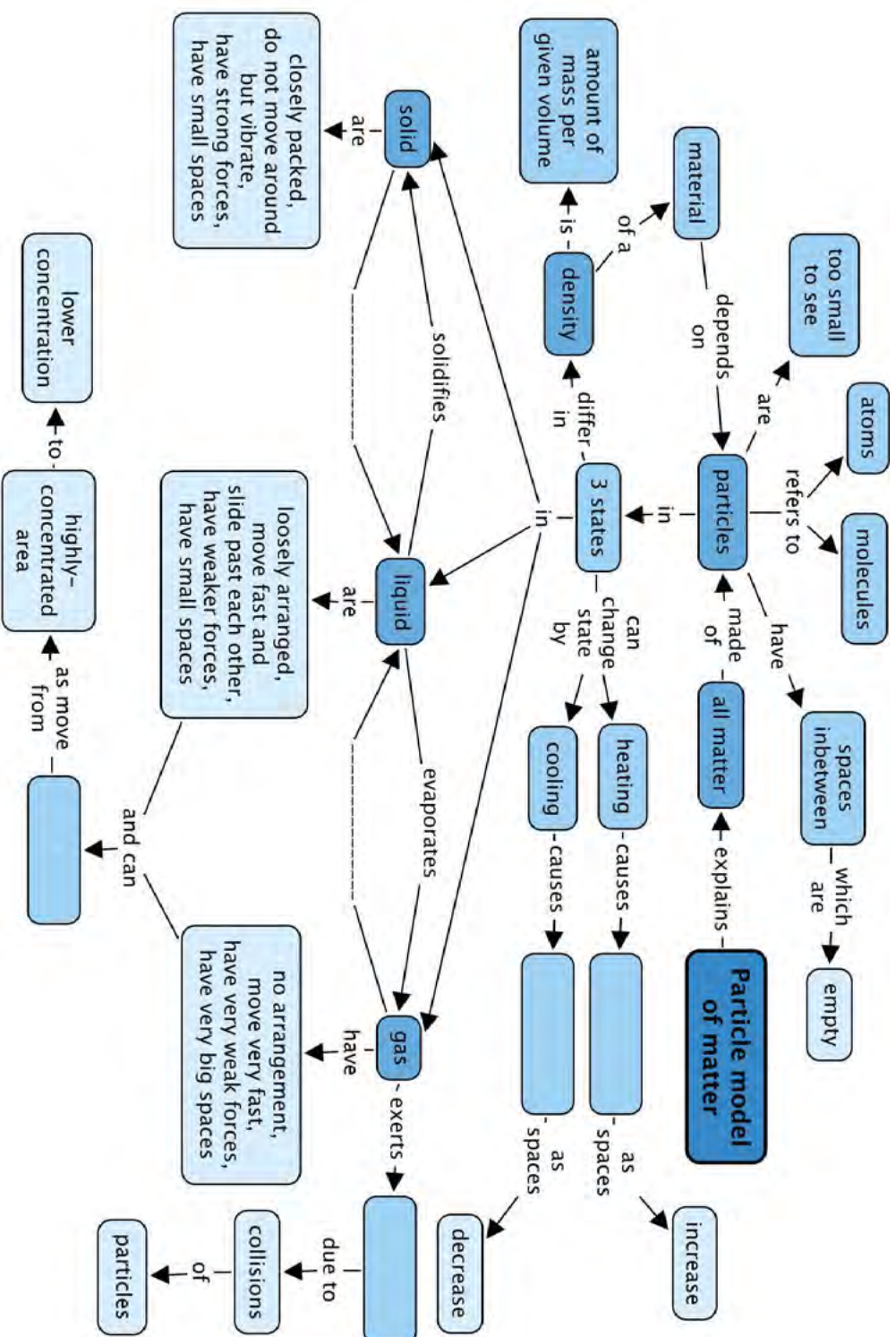
Key Concepts

- All matter can be described in terms of the particles it consists of, and how they are arranged. These extremely small particles are called atoms or molecules, depending on the type of material.
- The theory that describes matter in terms of particles is called the particle model of matter. It helps us to understand the macroscopic properties of a material in terms of the behaviour of the particles in that material.
- The particle model describes the particles in **solids** as follows:
 - They are closely and regularly packed and locked into position;
 - The only movement they are allowed is vibration;
 - They are held together by strong forces; and
 - The spaces between them are very small.
- The particle model describes the particles in **liquids** as follows:
 - They are close together but not locked in position;
 - They are in constant motion and slide past each other;
 - They are held together by moderately strong forces; and
 - The spaces between them are very small (in most cases only slightly larger than the spaces between solid particles).
- The particle model describes the particles in **gases** as follows:
 - They are in constant fast motion;
 - They are not arranged in any way but free to move;
 - The forces between them are weak; and
 - They are far apart with large empty spaces between them.
- Since the particles of liquids and gases are in constant motion they are able to diffuse. Diffusion is a process in which particles spread out, through random movement from high to low concentration, until they are evenly distributed.
- When two substances mix, their particles intermingle until their composition is uniform throughout. This is also called diffusion, and the process is much faster in gases than in liquids, because the particles in gases are further apart.
- Changes of state are usually the result of heating or cooling:
 - When a solid is heated it will change to a liquid (in a process called melting) and, when heated further, the liquid will change to a gas (in a process called evaporation).
 - When a gas is cooled it will change to a liquid (in a process called condensation) and, when cooled even further, the liquid will change to a solid (in a process called freezing).
- The density of a material is a measure of its 'relative heaviness'. Denser materials have a greater mass in relation to their size; that is why they feel 'heavy'.
- The density of a material depends on two things:
 - the mass of the individual particles of that materials - the larger the mass, the denser the material; and
 - the size of the spaces between the particles in the material - the larger the spaces, the less dense the material.
 - These explain how to calculate density, namely $\text{density} = \frac{\text{mass}}{\text{volume}}$
- Materials with a loose texture (like bread and sponge, for example) have empty spaces or holes inside them, which means they have less mass in relation to their volume. These materials tend to be less dense.
- Materials that are less dense always float on materials that are more dense.


- The particles of matter are constantly moving. In solids these movements are limited to vibrations, but in liquids and gases the particles have more freedom.
- Most materials will expand when they are heated and contract when they are cooled. This is because heating makes the particles move further apart and cooling makes them move closer together.
- When we want to know how much of a gas we have, we can measure its pressure.
- The 'pressure' of a gas is caused by the particles of the gas colliding with the inside of a container and with each other.
- More gas particles inside the container will mean more collisions against the sides, and therefore, more pressure.

Concept Map

Have a look at the concept map that shows how the many concepts relating to the particle model of matter fit together. There are 4 empty blocks which you need to fill in.



REVISION:



1. Write your own explanation of what you think the particle model of matter tells us. [2 marks]

2. What is unusual about water in terms of the particle model of matter? Explain why water is an exception. [2 marks]

3. Complete the following table with the terms and definitions of different changes of state. [4 marks]

Change of state	Explanation
	When heat is added and a solid changes to a liquid
Condensing	
	When heat is added and the particles at the surface of a liquid change to the gas state
Solidifying	


4. Explain what happens to the particles in a solid when heat is added to the solid and it changes to a liquid. [3 marks]

5. Complete the following sentence by writing it out in full again: During expansion, the spaces between the particles get _____, and during contraction, the spaces between the particles get _____. [2 marks]

6. How can a piece of metal get bigger (expand) and still have the same mass? Explain this in terms of the behaviour of the particles. [2 marks]

7. Why does oil float on top of water? [1 mark]


8. Draw a picture to show the path of a perfume particle from a flower on one side of a room to your nose on the other. [2 marks]



9. Next time you are at the petrol station, look around for a warning sign that shows you should not light a match or use a cell phone. Why do you think it is dangerous to light a match or use a cell phone anywhere near a petrol station? [2 marks]

10. If you fill a bicycle pump with air, and seal the end with your finger, the plunger can still be pushed in quite a way before the pressure forces air out of the pump. If the pump is filled with water instead of air, the plunger can hardly move. Why is this so? Try to use the words 'particles', 'spaces', and 'compress' in your explanation. [4 marks]

11. The following table represents a summary of the entire chapter. You must complete it, using your own words and or diagrams. Some of the blocks in the table already contain information to help you form your own sentences. [18 marks]

State of matter	Solid	Liquid	Gas
Diagram showing how the particles are arranged			
Arrangement of the particles	Very closely packed. Regular arrangement		
Spaces between particles			Very large
Forces of attraction between particles		Strong, but weaker than in solids	
Movement of particles			Fast and random movement
Shape		No fixed shape Depends on the container	
Volume			No fixed volume Depends on the container
Compressibility	Cannot be compressed		
Diffusion		Diffuses slowly	
Density compared to the other states	Highest density (except in the case of ice)	Almost as dense as the solid	

Total [42 marks]





KEY QUESTIONS:

- What is a chemical reaction?
- What happens to atoms and the bonds between them during a chemical reaction?
- How can we identify the reactants and products of a reaction?
- What examples of chemical reactions are there in indigenous practices?

In the last chapter we looked at the particle model of matter and specifically at changes of state. Do you remember heating and cooling candle wax to observe it melt and then solidify. The wax first changed from a solid into a liquid and then back to a solid again. These are **physical** changes. The chemical properties of the substance does not change.

We are now going to look at what happens when we get **chemical** changes in substances. These take place during **chemical reactions**.

NEW WORDS

- chemical reaction
- reaction flask or reaction vessel

3.1 How do we know a chemical reaction has taken place?

During a chemical reaction, one or more substances are changed into new substances. Do you know of any chemical reactions? Can you mention one or two examples?

How will we know when a chemical reaction is taking place? What are the signs?

We can tell if a chemical reaction has taken place when one or more of the following things happen:

- There has been a colour change inside the **reaction flask**.
- A gas has formed. Usually we know a gas has formed when we can see bubbles. This should not be confused with boiling, which only happens when a liquid is heated to its boiling point.
- A solid has formed. Usually we know that some solid material has formed when we can see a sludgy or cloudy deposit, or crystals forming.

All the signs listed above are visual, or recorded by sight. That means we can see them. Our other senses can also help us to say whether or not there was a chemical reaction:

- Sometimes chemical changes can be smelled, for instance when a new material, that has a strong smell, is formed.
- Other chemical changes can be felt, e.g when the reaction produces heat.
- Some chemical changes can be heard, e.g. when an explosion takes place.

ACTIVITY: The difference between physical and chemical changes


INSTRUCTIONS:

1. Below is a table with some different chemical and physical changes listed.
2. You need to decide whether the change is physical or chemical and write the answer in the last column.

Change	Is it a physical or chemical change?
Cutting up potatoes into cubes	
Boiling water in a pot on the stove	
Frying eggs in a pan	
Whipping egg whites	
Dissolving sugar in water	
Burning gas in a gas cooker	
Your ice cream melts in the sun	
Milk turning sour	
An iron gate outside rusts	



We will now put our checklist into practice by looking at a reaction safe enough to try at home. Have you ever wondered what a raw egg would look like without its shell? We are going to use a chemical reaction to strip away the shell of an egg, without breaking the egg!



ACTIVITY: Can we use a chemical reaction to see inside an egg?



MATERIALS:

- eggs
- a glass
- white vinegar

INSTRUCTIONS:

1. Carefully place the egg in the glass. Be careful not to crack the shell.
2. Cover the egg with vinegar. Wait a few minutes. Can you see anything happening on the surface of the eggshell?
 - a) Write your observations below.

- b) What is this observation a sign of?


3. Leave the egg in the vinegar for 4 - 5 days. You should complete the rest of the activity after this.
4. After 4 to 5 days, look at the egg in the vinegar and write down your observations.

5. Carefully scoop the egg out of the vinegar with a large spoon. Touch the surface of the egg. Write your observations below. What has happened to the shell?

6. Rub the powdery coating off the egg and place it in some clean water. What does it look like now?




7. Draw and label pictures of what the contents of the glass looked like before and after the reaction took place.



DID YOU KNOW?

Bones, teeth and pearls will all dissolve in vinegar, just like the eggshell did, even though these may take much longer.



QUESTIONS:

1. What signs did you see that told you a chemical reaction had taken place?

2. Write a short paragraph to explain what happened to the eggshell.

NEW WORDS

- reactant
- product
- chemical equation
- coefficients
- fermentation


How is it possible to change one compound into another? What happens to the particles when compounds react? In the next section we are going to answer these questions.

3.2 Reactants and products

In Chapter 1 we learnt that compounds are formed by chemical reactions. Can you remember what a compound is? Write a definition here.



Write down the formulae of three different compounds.



ACTIVITY: Analysing the eggshell experiment

In the eggshell activity the calcium carbonate in the eggshell reacted with acetic acid and formed calcium acetate, carbon dioxide and water.

We can write this **chemical equation** as follows:

eggshell + vinegar → calcium acetate + carbon dioxide + water

QUESTIONS:

1. There are two starting substances **before** this chemical reaction takes place. What are they?

2. There are three substances present **after** the reaction. What are these?

3. What are the chemical formulae for the compounds water and carbon dioxide?

4. We call the substances that are present before the chemical reaction has taken place, the **reactants**. What are the reactants of the eggshell experiment?

5. What do you think happened to the reactants during the chemical reactions?

6. We call the substances that are produced during the chemical reaction, the **products**. What are the products of the eggshell experiment?



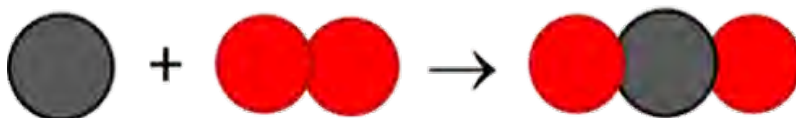
During a chemical reaction, the reactants are used to make the products. The atoms in the reactants have been rearranged into new compounds (the products).

A chemical reaction is a rearrangement of atoms

In order to change a compound into a different compound, we need to change the way in which the atoms in the compound are arranged. This is exactly what a chemical reaction is: a rearrangement of atoms to turn one or more compounds into new compounds.

Any time atoms separate from each other and recombine into different combinations of atoms, we say a chemical reaction has occurred.

We are going to use coloured circles to represent the atoms in the compounds which take place in chemical reactions. If you still have your beads or playdough from previously, you can also make these reactions yourself on your desk. Look at the following diagram.



We have carbon and oxygen on the left of the arrow reacting to make carbon dioxide on the right of the arrow.

To the left of the arrow, we have the 'before' situation. This side represents the substances we have before the reaction takes place. They are called the **reactants**.

To the right of the arrow we have the 'after' situation. This side represents the substances that we have after the reaction has taken place. They are called the **products**.

REACTANTS (before the reaction) → PRODUCTS (after the reaction)

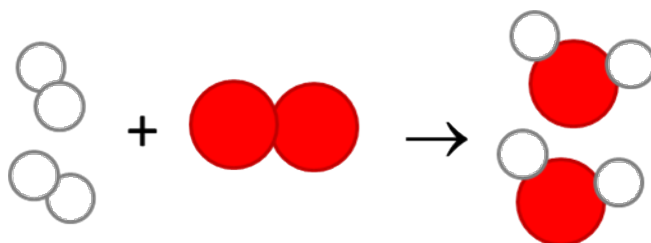
Do you see how the atoms have rearranged? This means a chemical reaction has taken place. Label the diagram with 'reactants' and 'product'.

The reaction between carbon and oxygen takes place when we burn coal. Coal is carbon and when it burns in oxygen gas, carbon dioxide is formed.



Burning coal.

The diagram below represents another chemical reaction. We have oxygen (red molecules) reacting with hydrogen (white molecule) to produce water.



What are the reactants in this reaction?

VISIT

A simulation about
reactants, products and
leftovers

bit.ly/1662WAI



What is the product in this reaction?

Why do you think hydrogen and oxygen are represented as two atoms joined together?

Do you remember when we spoke about **chemical bonds** between atoms in a molecule in Chapter 1? A chemical bond is a force which holds the atoms together. Therefore, during a chemical reaction, the bonds between atoms have to break so that the atoms can rearrange to form the products. New bonds form between the atoms in the product.

Next we will look at a chemical reaction that has been used by humankind for centuries.

Fermentation is a chemical reaction

Have you ever forgotten some milk or juice in a bottle, to find that it has 'gone off' a few days later? If you accidentally tasted it, it may have tasted sour and, in the case of the juice, a bit fizzy as well. Your senses may have warned you not to drink any more of it. Do you remember learning in Gr. 7 that our sense of taste protects us from food that has spoiled?

The sour taste of the milk or juice is caused by the products of **fermentation**. Which compounds have a sour taste?

Fermentation does not only produce unwanted products. Yoghurt, buttermilk and cheese are all fermented milk products. In these examples, the fermentation process creates acids that give these foods a sour taste.



Different dairy products which are made using fermentation.



Two buckets of ginger beer fermenting.

Fermentation is also the process by which a variety of fruits, vegetables and grains can be used to make alcohol. In many cultures the brewing of alcoholic drinks is part of their indigenous knowledge.

ACTIVITY: Studying the fermentation reaction

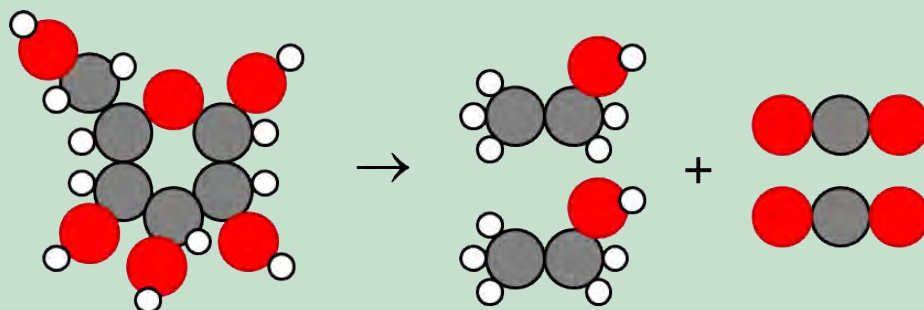
The basic reaction in the fermentation process can be summarised as follows:



What are the reactants and products in this reaction?



We can draw pictures of the molecules to show how the atoms are rearranged during the reaction:



In the diagram above, the grey atoms are carbon (C), the red atoms are oxygen (O) and the small, white ones are hydrogen (H). Write in the names of the compounds in this reaction.

Glucose does not change into alcohol and carbon dioxide by itself! Microorganisms like yeast and bacteria actively ferment glucose.

In South Africa, a popular drink is ginger or pineapple beer! The fizzy bubbles in the ginger beer or pineapple beer are bubbles of carbon dioxide produced by the yeast during fermentation. Let's make some ginger beer!

INSTRUCTIONS:

1. You need to research how to make traditional South African ginger beer.
2. Identify the different ingredients you will need.
3. Once you have done so, you can decide as a class about the best recipe you will use. You can then make ginger beer in class with your teacher.
4. Answer the questions that follow.

QUESTIONS:

1. What are the reactants in the reaction to make ginger beer?
-

2. What is the product in the reaction taking place in the ginger beer?
-

DID YOU KNOW?

Yeast produce special chemicals called enzymes that can break down the bonds in sugars such as glucose to form smaller molecules like alcohol and carbon dioxide.



3. Why are there fizzy bubbles in the ginger beer?

4. Where do you think the gas came from?

5. Another example of where we see a chemical reaction taking place is when we burn wood in a fire, either in our homes or to cook food. The wood burns and produces carbon dioxide gas and water vapour. What are the products and reactants in this reactions?

Chemical reactions can help us to detect certain substances

Some chemical reactions can produce results that are unique and even spectacular! Have you ever seen the volcano experiment? This experiment is shown in the video link in the visit box.

When ammonium dichromate burns in oxygen, the reaction produces bright orange sparks. The reaction forms nitrogen gas (N_2), water and a dark-green compound called chromium oxide as products. This reaction is unique. Only ammonium dichromate reacts with oxygen to form these particular products with these particular visual effects.



Ammonium dichromate before it is burned in oxygen.



Chromium oxide is the product.

When two substances react in a unique and characteristic way when they are mixed, one of them can be used to *detect* the other.

ACTIVITY: Some chemical reactions from Life and Living

1. Do you remember we used clear lime water to detect carbon dioxide in our breath in Chapter 1 in Life and Living? What colour did the clear lime water turn when we blew bubbles through it?



2. Limewater is a solution of calcium hydroxide in water. A reaction occurs between the lime water and the carbon dioxide to produce a white substance in the water called calcium carbonate. What are the reactants and products in this reaction?

3. We say that we used the colour change of the lime water to detect the carbon dioxide in our breath. Carbon dioxide is the by-product of the chemical reaction that takes place during respiration in all organisms. Write a word equation for respiration.

4. In Life and Living we spoke about the ingredients of respiration as we had not yet learned the terms reactant and product. What are the reactants and what are the products in respiration?

5. What are the reactants and products in photosynthesis?



We have also learnt that chemical reactions are simply rearrangements of atoms in molecules, to make different molecules. That is what many chemists do for a living! They find ways of rearranging atoms in order to make new compounds.

TAKE NOTE

Next year you will choose the subjects that you will be studying until Grade 12. Will you choose Physical Sciences, Life Sciences and Mathematics? Before you decide which subjects to take, explore what you can do with each of them after school.

Careers in chemistry

Natural sciences is all about discovery! We want to show you how the things you study in class are useful in the real world. This subject is much too big for us to learn everything about it in school. There are many different careers based in science that you can choose. Be curious about the world around you and explore it with your growing science knowledge!

Let's find out a bit more about the possibilities of fields related to what we have been studying in Matter and Materials.

There are many, many applications and uses of chemistry, and many different careers make use of chemistry in some way. Let's find out.



Marie Curie (1867 - 1934) was a famous chemist and physicist, honoured specifically for her research on radioactivity. She was the first woman to win a Nobel Prize, the only woman to win in two fields and the only person yet to win a Nobel Prize in multiple sciences!

ACTIVITY: Careers in chemistry

INSTRUCTIONS:

1. Below is a list of different careers that all use chemistry in some way. Have a look through the list and then select the five careers you find most interesting.
2. Do an internet search to find out what each career is.
3. Write a one line description of this career.
4. If there is a career that really interests you, draw a smiley face next to it and be sure to do some extra reading around the topic and where chemistry might take you! Find out what level of chemistry you will need for this particular career.
5. There are many other careers besides the ones listed here which use chemistry in some way, so if you know of something else which is not listed here and it interests you, follow your curiosity and discover the possibilities!

Some careers involving chemistry:

- Agricultural chemistry
- Biochemistry
- Biotechnology
- Chemical education/teaching
- Chemistry researcher
- Environmental chemistry
- Forensic science
- Food science/technology
- Geneticist
- Geochemistry


VISIT

A useful site to find out more about some chemistry-related careers.

bit.ly/16Ei2tf

- Materials science
- Medicine and medicinal chemistry
- Oil and petroleum industry
- Organic chemistry
- Oceanography
- Patent law
- Pharmaceuticals
- Space exploration
- Zoology

Your descriptions of the careers you are interested in:




SUMMARY:

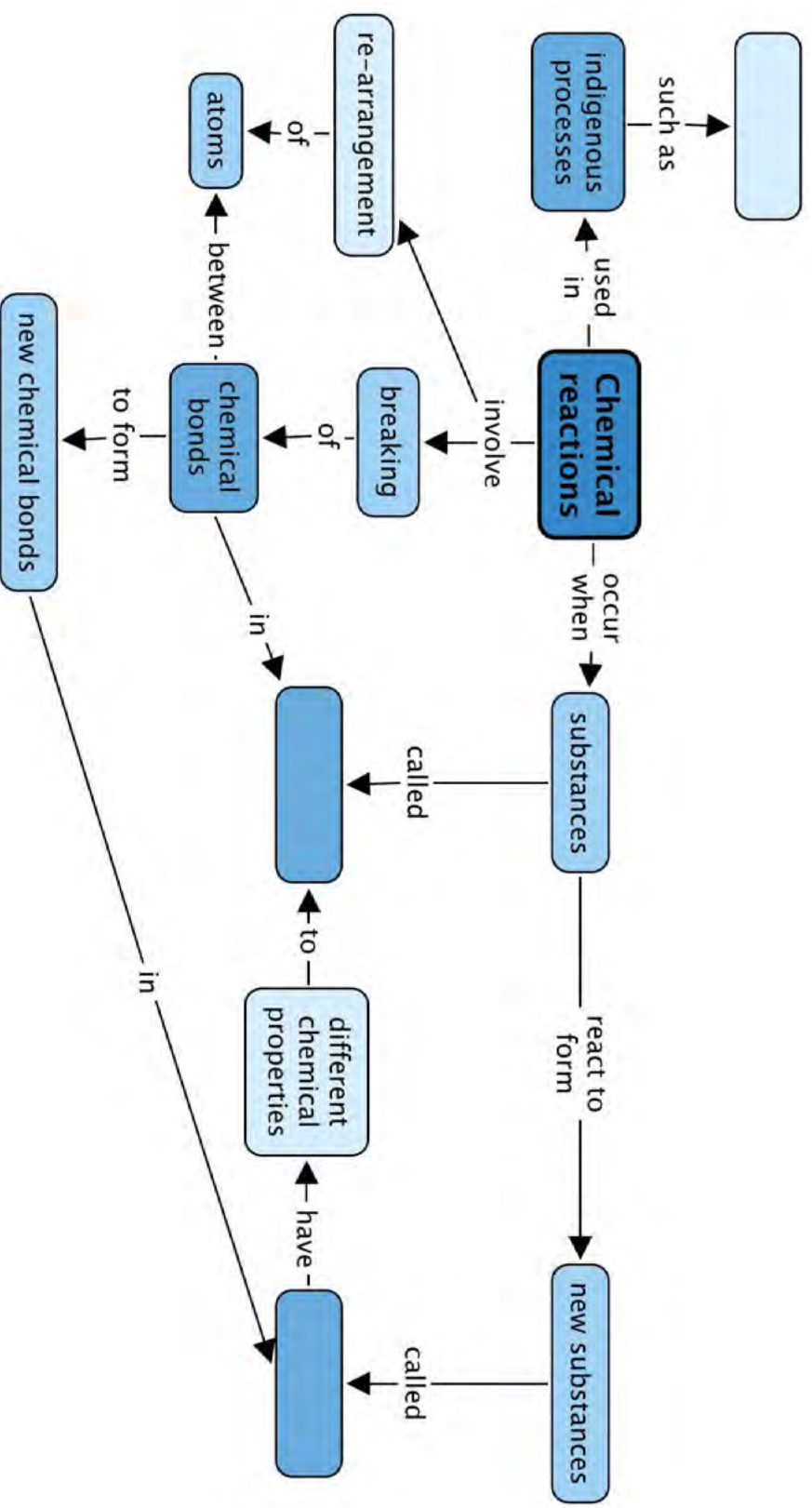
Key Concepts

- During chemical reactions, materials are changed into new materials with new chemical and physical properties.
- The materials we start with are called reactants and the new materials that form are called products.
- During chemical reactions, atoms are rearranged. This requires that chemical bonds in the reactants are broken and that new bonds are formed, resulting in product formation.
- Fermentation in brewing is an example of a chemical reaction that is also part of indigenous knowledge.

Concept Map

Fill in the blanks in the concept map for the Chemical Reactions chapter on the next page.





REVISION:

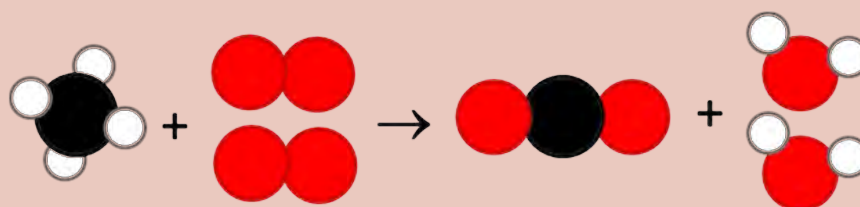
1. Suppose you mix some chemicals in a beaker. How will you know if a reaction has taken place? Write a paragraph describing each of the signals that would indicate a reaction has taken place and what each signal tells you about that reaction. [6 marks]

2. Write your own definition for what a reactant is. [1 mark]

3. Write your own definition for what a product is. [1 mark]

4. Explain what happens to the bonds between atoms in the reactants and products in a chemical reaction. [2 marks]

5. Methane gas (CH_4) is a natural fuel gas that burns in oxygen gas to produce carbon dioxide and water. The reaction can be represented by the following diagram:




Key:

Carbon atoms (C): black

Oxygen atoms (O): red

Hydrogen atoms (H): white



- a) Use the diagram and the 'key' below it to write formulae for each of the substances in the reaction. [4 marks]

Name of compound	Formula
Methane	
Oxygen gas	
Carbon dioxide	
Water	

- b) What are the reactants of the above reaction? [2 marks]

- c) What are the products of the above reaction? [2 marks]

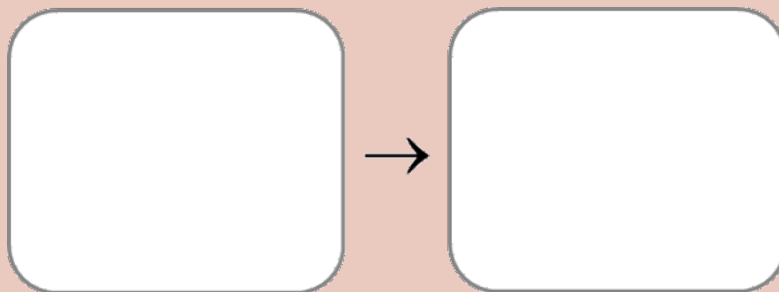
- d) Write the names of the reactants and products under the colourful picture representations of each of the molecules. [2 marks]

6. Ammonia (NH_3) is produced from hydrogen gas and nitrogen gas.

- a) Draw one molecule of each of the substances in the reaction in the following table. [3 marks]

Name of compound	Diagram of one molecule of the compound
Hydrogen gas, H_2	
Nitrogen gas, N_2	
Ammonia, NH_3	

- b) Use the template below to draw diagrams representing the particles before and after the reaction. Your diagram should also show how many of each type of particle take part in the reaction. [4 marks: 2 marks each for 'before' (left) and 'after' (right) sketch]



- c) What are the reactants of the above reaction? [2 marks]

-
- d) What is the product of the above reaction? [1 mark]
-

7. Look at the following photo which shows a test tube with milky limewater. What gas must have been bubbled through it to make it turn milky? [1 mark]



Limewater that has turned milky in a test tube.

-
8. What are the reactants in this chemical reaction? [1 mark]

Total [32 marks]





GLOSSARY

air valve:	a device that works as a gateway to allow air to flow in only one direction (either into or out of something)
atomic nucleus:	a tightly packed cluster of protons and neutrons at the centre of the atom
atoms:	the fundamental particles that all matter is made up of
boiling:	occurs <i>within a liquid</i> when it is heated to its boiling point and particles escape as bubbles of gas from the liquid
chemical bond:	a special force that holds the atoms in a molecule together
chemical equation:	a way of representing a chemical reaction in terms of the chemical formulae of the reactants and products
chemical formula:	a combination of element symbols that shows the types and number of atoms in one molecule of a certain compound
chemical reaction:	a process in which chemical bonds are broken and new ones are formed between atoms; atoms in the starting compounds, called reactants, are rearranged to form new compounds, called products
chemical reaction:	an event during which the atoms in molecules are rearranged to form new molecules
cluster:	(verb) to come together and form a tight group
coefficients:	the numbers in front of the atom and molecule formulae in the chemical equation; they represent the ratio of the numbers of individual molecules that take part in the chemical reaction
collide:	(noun: collision) to bump or crash into something
compound:	a pure substance in which atoms of two or more different chemical elements are bonded in some fixed ratio
compress:	(adjective: <i>compressible</i>) to squeeze the particles of a material closer together
condensation:	when energy is removed and a gas changes state to a liquid
constant motion:	something that is in constant motion never stops moving
contract:	the physical size of an object gets smaller
controlled experiment:	an experiment in which the variables are controlled so that the results can be compared to those obtained in another experiment
decomposition reaction:	a chemical reaction in which a given molecule is broken up and recombined into smaller molecules
density:	the mass of a substance in a given space (volume)

diffuse:	(noun: diffusion) the movement of particles so that they end up spread out randomly and uniformly in a given space
disordered:	untidy; without regular arrangement
distinction:	the separation of things into different groups according to features or characteristics
electrons:	the smallest of the three types of sub-atomic particles; they are negatively charged and are located outside the atomic nucleus
element:	a pure substance made up only of atoms of the same kind
energetic:	full of energy
evaporation:	when energy is added and the particles <i>at the surface</i> of a liquid change state to a gas
expand:	the physical size of an object gets bigger
fermentation:	a chemical reaction that occurs in the presence of yeast and/or bacteria, during which a sugar is converted to an alcohol or an acid
forces of attraction:	forces that particles experience which draw them closer to each other
immiscible:	incapable of mixing or blending
impact:	(noun) effect
mass:	a measure of the amount of matter in an object or material
melting point:	the temperature beyond which a particular material changes from the solid to the liquid state (melts)
melting:	when energy is added and a solid changes state to a liquid
mixture:	a combination of two or more pure substances mixed together
molecule:	two or more atoms that have chemically bonded with each other; the atoms in a molecule can be of the same kind (in which case it would be a molecule of an element), or they can be of different kinds (in which case it would be a molecule of a compound)
neutrons:	a type of sub-atomic particle similar to protons in mass and size, but neutral (without charge); neutrons together with protons make up the atomic nucleus
observation:	an observation is something we can see, hear, taste, smell or feel
phenomenon:	(plural: phenomena) an event or occurrence that we can observe with our senses
physical quantity:	something that can be measured or estimated
postulate:	a claim that can be supported by experimental evidence
pressure gauge:	an instrument used to measure the gas pressure inside something
product:	a substance that forms during the reaction; it will be present after the reaction has taken place

protons:	a type of sub-atomic particle that is positively charged and occurs inside the atomic nucleus along with neutrons
pure substance:	matter that consists of the same material throughout; two classes exist, namely elements and compounds
random:	unpredictable
rate:	how fast or slow an event (e.g. diffusion) occurs
reactant:	a substance that is present before the reaction takes place; it is a starting material of the reaction
reaction flask or reaction vessel:	the container in which the reaction has taken place; small scale chemical reactions done in a laboratory are usually performed in glass beakers or flasks
regular arrangement:	an arrangement of particles in a neatly packed, consistent and repetitive pattern
reinforce:	to make stronger, usually by the addition of another material or other form of support
reverse:	in this chapter reverse means 'opposite', as in: melting and freezing are <i>reverse</i> processes (the opposite of each other)
scientific model:	a set of ideas that represents a concept, object, or process in nature to help us understand it
scientific theory:	an explanation of scientific phenomena or aspects of the natural world, supported and confirmed by facts obtained through observation and experimentation
solidifying:	(freezing) when energy is removed and a liquid changes state to a solid
sub-atomic particle:	a particle that is smaller than the atom and occurs inside the atom
transformation:	change; to transform is to change from one form into another
uniform:	the same throughout
vapour:	the gaseous state of a substance that is normally liquid or solid at room temperature, such as water that has evaporated into the air
vibrate:	to move rapidly back and forth
vigorous:	strong and forceful
volume:	a measure of the amount of space occupied by a three-dimensional object or material

Here is your chance to discover the possibilities. What else can this beaker be?



Image Attribution

1	http://www.flickr.com/photos/gr33n3gg/3445868159/	5
2	http://commons.wikimedia.org/wiki/File:Elysia_chlorotica_%281%29.jpg	6
3	http://www.flickr.com/photos/tessawatson/3216911479/	8
4	http://www.flickr.com/photos/crabchick/5810139262/	11
5	http://www.flickr.com/photos/yimhafiz/2517494621/	11
6	http://www.flickr.com/photos/design-dog/1249337589/	12
7	http://www.flickr.com/photos/tessawatson/379270115/	23
8	http://www.flickr.com/photos/amanderson/4686389576/	28
9	http://www.flickr.com/photos/amanderson/4685773273/	28
10	http://www.flickr.com/photos/34731946@N00/335133573/	30
11	http://www.flickr.com/photos/dalangalma/8197670802/	38
12	http://www.flickr.com/photos/31031835@N08/6368338667/	39
13	http://www.flickr.com/photos/dejeuxx/6924771739/	39
14	http://www.flickr.com/photos/marcelekkel/4803634603/	39
15	http://www.flickr.com/photos/thomson-safaris/8377408989/	40
16	http://www.flickr.com/photos/mark233/6338069992/	40
17	http://www.flickr.com/photos/66770481@N02/6741179033/	40
18	http://www.flickr.com/photos/dkeats/8040036825/	41
19	http://www.flickr.com/photos/mickers/7896129722/	42
20	http://www.flickr.com/photos/42244964@N03/4325982802/	44
21	http://www.flickr.com/photos/chimothy27/3642531568/	44
22	http://www.flickr.com/photos/twbuckner/4056556245/	44
23	http://www.flickr.com/photos/i_benson/2545246443/	44
24	http://www.flickr.com/photos/usace-kcd/5846530366/	57
25	http://www.flickr.com/photos/ctsnow/95573879/	58
26	http://www.flickr.com/photos/oxfameastafrica/5933226731/	58
27	http://www.flickr.com/photos/dkeats/5327947094/	60
28	http://www.flickr.com/photos/smwhang/3783672117/	60
29	http://www.flickr.com/photos/fifikins/4213181845/	61
30	http://commons.wikimedia.org/wiki/File:Porcs_formiguers_%28Orycteropus_afer%29.jpg	64
31	http://www.flickr.com/photos/pedronet/3203851713/	64
32	http://www.flickr.com/photos/mister-e/3051915461/	65
33	http://www.flickr.com/photos/jonasb/6987050666/	66
34	http://www.flickr.com/photos/jonasb/6987048092/	66
35	http://www.flickr.com/photos/nh53/6061103659/	66
36	http://www.flickr.com/photos/scubagirl66/7929201230/	67
37	http://www.flickr.com/photos/tanaka_juuyoh/1775405862/	67
38	http://www.flickr.com/photos/dkeats/5643928782/	68
39	http://www.flickr.com/photos/kelsiedipernaphotography/3800104410/	68
40	http://www.flickr.com/photos/tgerus/3613267071/	68
41	http://www.flickr.com/photos/yellowcloud/3862534417/	69
42	http://www.flickr.com/photos/yellowcloud/4673616905/	69
43	http://www.flickr.com/photos/yellowcloud/4239972017/	69
44	http://www.flickr.com/photos/yellowcloud/4240758668/	70
45	http://www.flickr.com/photos/yellowcloud/4239988271/	70
46	http://commons.wikimedia.org/wiki/File:Dissected_Lithops_0133_%28137859955%29.jpg	70
47	http://www.flickr.com/photos/jemanlin/1417937089/	72
48	http://www.flickr.com/photos/jrscentist/4379034881/	74
49	http://www.flickr.com/photos/nickstep/5072666287/	74
50	http://commons.wikimedia.org/wiki/File:Al_Gore.jpg	74
51	http://www.flickr.com/photos/safaripartners/4838390161/	82
52	http://www.flickr.com/photos/eguidetravel/8058729536/	83
53	http://www.flickr.com/photos/amylovesyah/3945525048/	83
54	http://www.flickr.com/photos/dullhunk/5517978496/	87
55	http://www.flickr.com/photos/dluogs/5048733301/	87
56	http://www.flickr.com/photos/nsalt/3116061949/	88
57	http://www.flickr.com/photos/core-materials/4419088363/	88
58	http://www.flickr.com/photos/dottiemae/5188013294/	88
59	http://www.flickr.com/photos/austinevan/5288918276/	88
60	http://www.flickr.com/photos/core-materials/4419087937/	88
61	http://www.flickr.com/photos/bptakoma/3019741976/	88
62	http://www.flickr.com/photos/niaid/5149398656/	90
63	http://www.flickr.com/photos/niaid/8411599236/	90
64	http://www.flickr.com/photos/78428166@N00/6107931302/	90
65	http://www.flickr.com/photos/tessawatson/384591931/	90
66	http://www.flickr.com/photos/lunchtimemama/99886586/	94
67	http://www.flickr.com/photos/victor/7805728128/	94
68	http://www.flickr.com/photos/editor/2084672070/	94
69	http://www.flickr.com/photos/redspotted/272104/	94
70	http://www.flickr.com/photos/creativecomputer/415482865/in/photostream/	94
71	http://www.flickr.com/photos/tauntingpanda/6240242/	94
72	http://www.flickr.com/photos/niaid/5613410125/	96

73	http://www.flickr.com/photos/prep4md/3029599900/	98
74	http://www.flickr.com/photos/ricephotos/8566704879/	102
75	http://www.flickr.com/photos/plant-trees/4833252601/	102
76	http://commons.wikimedia.org/wiki/File:Kind_of_Volkswagen_Beetle.jpg	124
77	http://www.flickr.com/photos/puukibeach/8589310784/	124
78	http://www.flickr.com/photos/bellecouleurjewelry/4010214064/	128
79	http://www.flickr.com/photos/bellecouleurjewelry/5669764986/	128
80	http://www.flickr.com/photos/uscpsc/6331652875/	136
81	http://www.flickr.com/photos/57527070@N06/5337280707/	159
82	http://www.flickr.com/photos/bermarte/3290093273/	160
83	http://www.flickr.com/photos/jamescridland/613445810/	166
84	http://www.flickr.com/photos/eiriknewth/529362962/	170
85	http://www.flickr.com/photos/mary_hutchison/5234833498/	171
86	http://www.flickr.com/photos/investinggold/7361342500/	175
87	http://www.flickr.com/photos/usoceangov/8290528771/	180
88	http://www.flickr.com/photos/yortw/5470226807/in/photostream/	183
89	http://www.flickr.com/photos/jackson3/3894097289/	183
90	http://www.flickr.com/photos/76145908@N08/7085032489/	184
91	http://www.flickr.com/photos/19378856@N04/2037098785/	184
92	http://www.flickr.com/photos/nhoulihan/3653411697/	190
93	http://www.flickr.com/photos/puukibeach/4263292347/	195
94	http://www.flickr.com/photos/29233640@N07/5714502617/	197
95	http://commons.wikimedia.org/wiki/File:Girl_inflating_a_red_balloon.jpg	197
96	http://www.flickr.com/photos/robbophotos/2095823996/	198
97	http://www.flickr.com/photos/gemsling/2687069763/	210
98	http://www.flickr.com/photos/cote/66570391/	213
99	http://www.flickr.com/photos/nikonvscanon/4231775258/	214
100	http://www.flickr.com/photos/tessawatson/379270115/	223